



Compare objects within 50



I a) Draw counters to show the apples.



b) Draw counters to show the children.




c) Complete the sentences.

There are apples.

There are children.

There are fewer apples than children.

d)



All the children can have one apple.

Is Teddy correct?



2 Draw counters to make the statements true.

a)

●	●	●	●	●
●	●	●	●	●

●	●	●	●	
●	●	●		

>

e.g.

○				

b)

○	○	○	○	○
○	○	○	○	○

○	○	○	○	○
○	○	○	○	○

>

●	●	●	●	●
●	●	●	●	●

●	●	●	●	●
●	●	●	●	

c)

●	●	●	●	●
●	●	●	●	●

○	○	○	○	○
○	○	○	○	○

e.g.

>

●	●	●	●	●
●	●	●	●	●

○	○	○	○	○
○	○	○	○	○

●		●		
●			●	

○	○	○	○	○
○	○	○	○	○

d)

●	●	●		
	●	●	●	

=

e.g.

○		○		○
	○	○	○	

Is there more than one answer for each?

