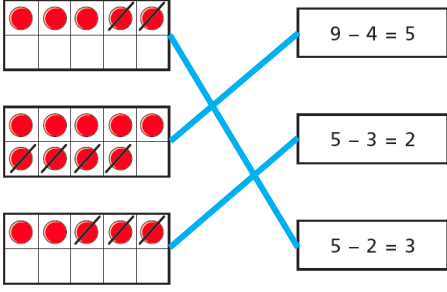
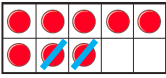
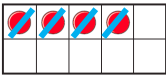


Y1 – Autumn – Block 2 – Step 12 – How many left? (2) Answers

Question	Answer
1	 <p>Three ten-frames are shown. The first has 5 red dots (3 in the top row, 2 in the bottom row). The second has 5 red dots (4 in the top row, 1 in the bottom row). The third has 5 red dots (3 in the top row, 2 in the bottom row). Blue lines connect the first ten-frame to the equation $9 - 4 = 5$, the second to $5 - 3 = 2$, and the third to $5 - 2 = 3$.</p>
2	<p>a) </p> <p>b) </p>
3	$10 - 4 = 6$
4	6
5	<p>a) 1 b) 3 c) 2 d) 5</p>