


## Count one more and one less

- 1 a) There are 13 children sitting down.

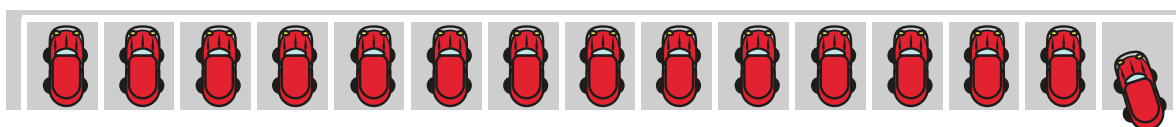


One more child sits down.

How many children are sitting down now?

14

- b) There are 15 cars in a car park.



One car leaves.

How many cars are in the car park now?

14

What is the same about your answers?




2 Colour these numbers on the track.

- One less than 19
- One more than 14
- One more than 11

|    |    |    |    |    |    |    |    |    |    |    |
|----|----|----|----|----|----|----|----|----|----|----|
| 10 | 11 | 12 | 13 | 14 | 15 | 16 | 17 | 18 | 19 | 20 |
|----|----|----|----|----|----|----|----|----|----|----|

3 Eva has 12 strawberries.



Her sister gives her one more strawberry.

How many strawberries does Eva have now?

13

4 Complete the sentences.

a) One more than 17 is

18

b) One less than twenty is nineteen.

c) One less than 1 ten and 5 ones is

14





5 Complete the sentences.

a)  is one less than 19

b)  is one more than 11

c) 1 ten and 7 ones is one more than 16

6 How many ways can you complete the sentence?

*Various answers.*

One less than  is one more than

One less than  is one more than

One less than  is one more than

