


## Order groups of objects



I Show how many cherries each child has.



Teddy



Rosie



Dora



a) Who has the most cherries? Rosie

b) Who has the least cherries? Dora

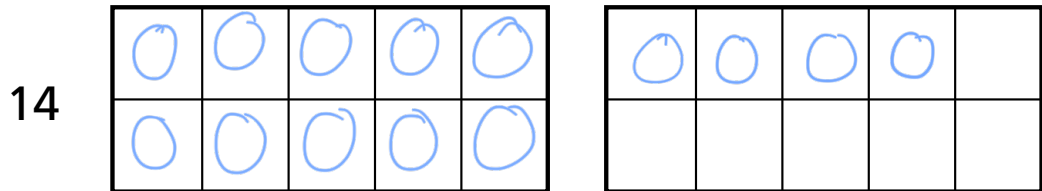
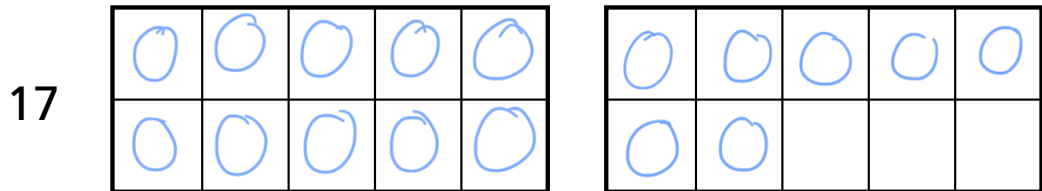
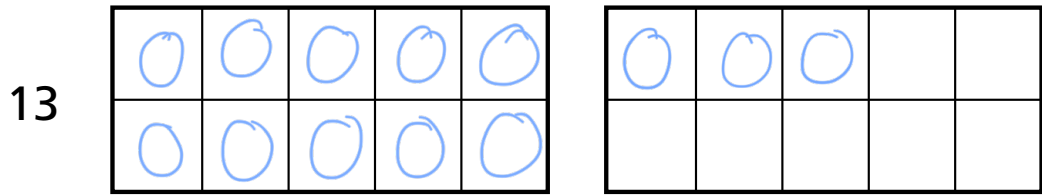
c) Whitney has more cherries than Dora, but fewer cherries than Teddy.

Draw Whitney's cherries.






**2** a) Draw counters to show each number.




b) Write the numbers in order.

Start with the smallest number.



c) Write the numbers in order.

Start with the greatest number.



What do you notice?

