
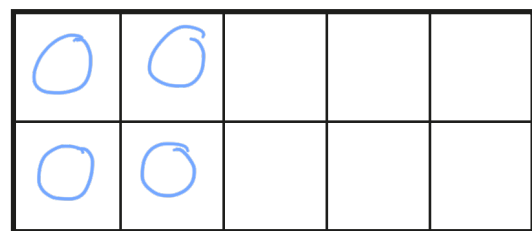
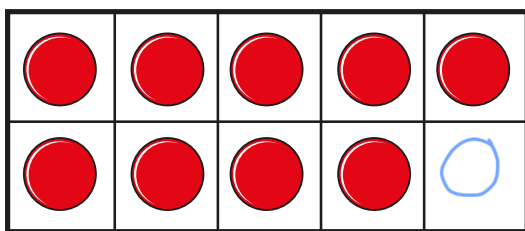


## Add by counting on

- 1 There are 9 children on the bus.  
5 more children get on the bus.



How many children are on the bus now?  
Complete the ten frames and the sentences.



$$\boxed{9} + \boxed{5} = \boxed{14}$$

There are  $\boxed{14}$  children on the bus now.

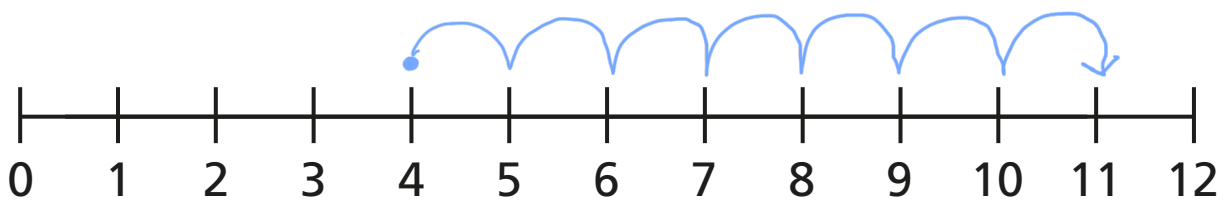


**2** Eva has 4 coins.

Jack gives her 7 more coins.

How many coins does Eva have now?

Draw on the number line and complete the sentences.

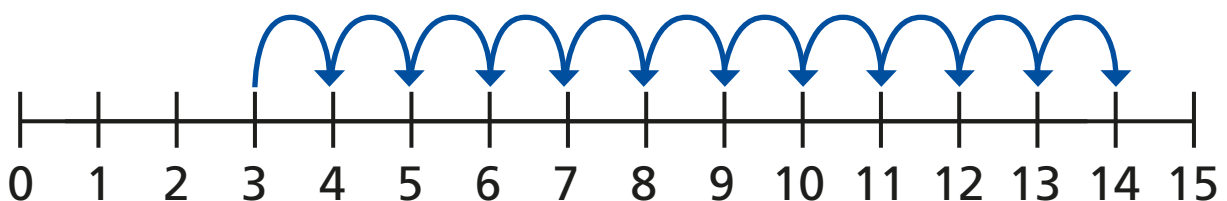


$$\boxed{4} + \boxed{7} = \boxed{11}$$

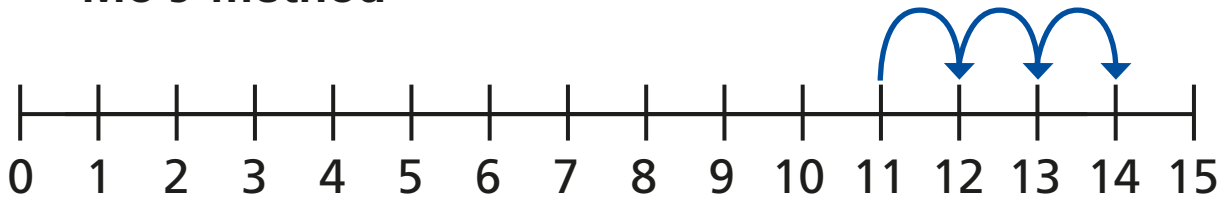
Eva has  $\boxed{11}$  coins now.

**3** Ron and Mo are working out  $3 + 11$  on a number line.

**Ron's method**



## Mo's method

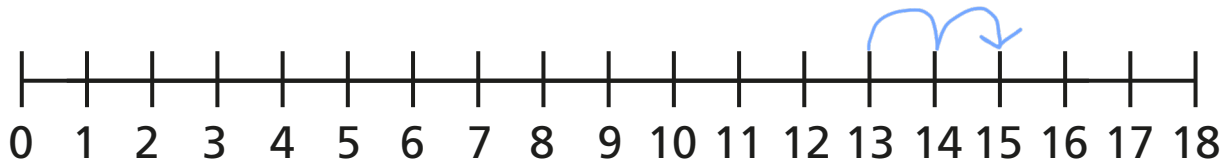


What is the same and what is different?

Use the number lines to work out the additions.

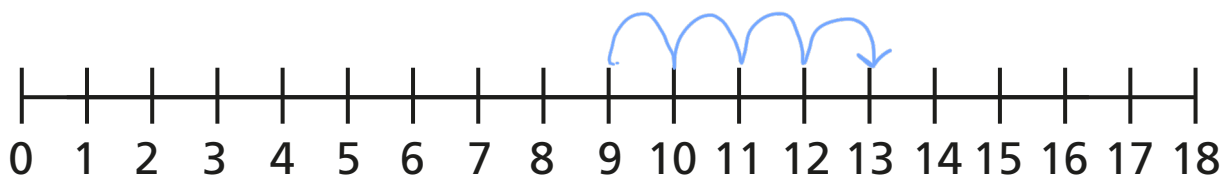
a)  $2 + 13 =$

15



b)  $4 + 9 =$

13



c)  $1 + 17 =$

18

