








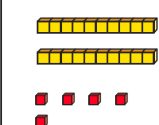
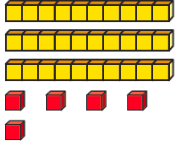
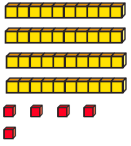






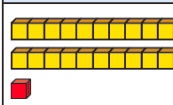
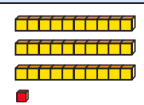
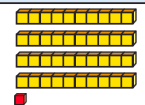








Question	Answer
----------	--------

1	a) Dani has 40 balloons. 50 b) 70 60
---	---

2	a)	<table border="1" style="width: 100%; text-align: center;"> <tr> <th style="width: 33%;">10 less</th> <th style="width: 33%;">Number</th> <th style="width: 33%;">10 more</th> </tr> <tr> <td></td> <td></td> <td></td> </tr> <tr> <td>11</td> <td>21</td> <td>31</td> </tr> </table>	10 less	Number	10 more				11	21	31
	10 less	Number	10 more								
											
11	21	31									
b)	<table border="1" style="width: 100%; text-align: center;"> <tr> <th style="width: 33%;">10 less</th> <th style="width: 33%;">Number</th> <th style="width: 33%;">10 more</th> </tr> <tr> <td></td> <td></td> <td></td> </tr> <tr> <td>25</td> <td>35</td> <td>45</td> </tr> </table>	10 less	Number	10 more				25	35	45	
10 less	Number	10 more									
											
25	35	45									
c)	<table border="1" style="width: 100%; text-align: center;"> <tr> <th style="width: 33%;">10 less</th> <th style="width: 33%;">Number</th> <th style="width: 33%;">10 more</th> </tr> <tr> <td></td> <td></td> <td></td> </tr> <tr> <td>21</td> <td>31</td> <td>41</td> </tr> </table>	10 less	Number	10 more				21	31	41	
10 less	Number	10 more									
											
21	31	41									

1	2	3	4	5	6	7	8	9	10
11	12	13	14	15	16	17	18	19	20
21	22	23	24	25	26	27	28	29	30
31	32	33	34	35	36	37	38	39	40
41	42	43	44	45	46	47	48	49	50
51	52	53	54	55	56	57	58	59	60
61	62	63	64	65	66	67	68	69	70
71	72	73	74	75	76	77	78	79	80
81	82	83	84	85	86	87	88	89	90
91	92	93	94	95	96	97	98	99	100

Each set of numbers is in a column.

4	a) 10 more than 13 is 23 b) 10 less than 81 is 71 c) 10 more than 50 is 60 d) 10 less than 97 is 87
---	--

5	true
---	------