


NAME: _____

10s



SCORE

BASELINE

CHECK 1

CHECK 2



BASELINE



Name: _____

Date: _____

1. $10 \times 5 =$ _____

21. $10 \times 8 =$ _____

41. $100 \div 10 =$ _____

2. $10 \times 7 =$ _____

22. $10 \times 5 =$ _____

42. $110 \div 10 =$ _____

3. $10 \times 8 =$ _____

23. $10 \times 3 =$ _____

43. $80 \div 10 =$ _____

4. $10 \times 4 =$ _____

24. $10 \times 4 =$ _____

44. $50 \div 10 =$ _____

5. $10 \times 3 =$ _____

25. $10 \times 6 =$ _____

45. $70 \div 10 =$ _____

6. $10 \times 9 =$ _____

26. $10 \times 9 =$ _____

46. $60 \div 10 =$ _____

7. $10 \times 11 =$ _____

27. $10 \times 10 =$ _____

47. $20 \div 10 =$ _____

8. $10 \times 12 =$ _____

28. $10 \times 7 =$ _____

48. $10 \div 10 =$ _____

9. $10 \times 3 =$ _____

29. $10 \times 2 =$ _____

49. $90 \div 10 =$ _____

10. $10 \times 1 =$ _____

30. $10 \times 1 =$ _____

50. $110 \div 10 =$ _____

11. $10 \times 8 =$ _____

31. $20 \div 10 =$ _____

51. $70 \div 10 =$ _____

12. $10 \times 6 =$ _____

32. $40 \div 10 =$ _____

52. $40 \div 10 =$ _____

13. $10 \times 7 =$ _____

33. $50 \div 10 =$ _____

53. $30 \div 10 =$ _____

14. $10 \times 9 =$ _____

34. $90 \div 10 =$ _____

54. $80 \div 10 =$ _____

15. $10 \times 12 =$ _____

35. $100 \div 10 =$ _____

55. $50 \div 10 =$ _____

16. $10 \times 11 =$ _____

36. $120 \div 10 =$ _____

56. $120 \div 10 =$ _____

17. $10 \times 2 =$ _____

37. $70 \div 10 =$ _____

57. $100 \div 10 =$ _____

18. $10 \times 1 =$ _____

38. $60 \div 10 =$ _____

58. $60 \div 10 =$ _____

19. $10 \times 10 =$ _____

39. $30 \div 10 =$ _____

59. $10 \div 10 =$ _____

20. $10 \times 9 =$ _____

40. $10 \div 10 =$ _____

60. $20 \div 10 =$ _____

SCORE:
(5 minute limit)

/60

TIME TAKEN (optional)

MINUTES SECONDS



Name: _____

Date: _____

MULTIPLICATION 1

Practise 10s

Complete first and then use it to help you if you get stuck.

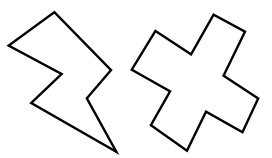
ROCK BOX

1.	$10 \times 1 =$	_____
2.	$10 \times 2 =$	_____
3.	$10 \times 3 =$	_____
4.	$10 \times 4 =$	_____
5.	$10 \times 5 =$	_____
6.	$10 \times 6 =$	_____
7.	$10 \times 7 =$	_____
8.	$10 \times 8 =$	_____
9.	$10 \times 9 =$	_____
10.	$10 \times 10 =$	_____
11.	$10 \times 11 =$	_____
12.	$10 \times 12 =$	_____

- | | | | | | |
|-----|------------------|-------|-----|------------------|-------|
| 21. | $10 \times 11 =$ | _____ | 41. | $10 \times 9 =$ | _____ |
| 22. | $10 \times 4 =$ | _____ | 42. | $10 \times 5 =$ | _____ |
| 23. | $10 \times 10 =$ | _____ | 43. | $10 \times 3 =$ | _____ |
| 24. | $10 \times 8 =$ | _____ | 44. | $10 \times 2 =$ | _____ |
| 25. | $10 \times 9 =$ | _____ | 45. | $10 \times 12 =$ | _____ |
| 26. | $10 \times 1 =$ | _____ | 46. | $10 \times 10 =$ | _____ |
| 27. | $10 \times 3 =$ | _____ | 47. | $10 \times 11 =$ | _____ |
| 28. | $10 \times 12 =$ | _____ | 48. | $10 \times 1 =$ | _____ |
| 29. | $10 \times 4 =$ | _____ | 49. | $10 \times 5 =$ | _____ |
| 30. | $10 \times 9 =$ | _____ | 50. | $10 \times 7 =$ | _____ |
| 31. | $10 \times 8 =$ | _____ | 51. | $10 \times 8 =$ | _____ |
| 32. | $10 \times 7 =$ | _____ | 52. | $10 \times 11 =$ | _____ |
| 33. | $10 \times 11 =$ | _____ | 53. | $10 \times 10 =$ | _____ |
| 34. | $10 \times 7 =$ | _____ | 54. | $10 \times 6 =$ | _____ |
| 35. | $10 \times 1 =$ | _____ | 55. | $10 \times 9 =$ | _____ |
| 36. | $10 \times 12 =$ | _____ | 56. | $10 \times 4 =$ | _____ |
| 37. | $10 \times 2 =$ | _____ | 57. | $10 \times 3 =$ | _____ |
| 38. | $10 \times 5 =$ | _____ | 58. | $10 \times 6 =$ | _____ |
| 39. | $10 \times 4 =$ | _____ | 59. | $10 \times 9 =$ | _____ |
| 40. | $10 \times 6 =$ | _____ | 60. | $10 \times 11 =$ | _____ |

Continue here...

- | | | |
|-----|------------------|-------|
| 13. | $10 \times 7 =$ | _____ |
| 14. | $10 \times 12 =$ | _____ |
| 15. | $10 \times 8 =$ | _____ |
| 16. | $10 \times 12 =$ | _____ |
| 17. | $10 \times 10 =$ | _____ |
| 18. | $10 \times 9 =$ | _____ |
| 19. | $10 \times 11 =$ | _____ |
| 20. | $10 \times 3 =$ | _____ |



SCORE: _____



Grown-ups:
Can learners spot links between neighbouring questions?



Name: _____

Date: _____

MULTIPLICATION 2

Practise 10s

Complete first and then use it to help you if you get stuck.

ROCK BOX

1. $10 \times 1 =$ _____

2. $10 \times 2 =$ _____

3. $10 \times 3 =$ _____

4. $10 \times 4 =$ _____

5. $10 \times 5 =$ _____

6. $10 \times 6 =$ _____

7. $10 \times 7 =$ _____

8. $10 \times 8 =$ _____

9. $10 \times 9 =$ _____

10. $10 \times 10 =$ _____

11. $10 \times 11 =$ _____

12. $10 \times 12 =$ _____

13. $1 \times 10 =$ _____

14. $2 \times 10 =$ _____

15. $3 \times 10 =$ _____

16. $4 \times 10 =$ _____

17. $5 \times 10 =$ _____

18. $6 \times 10 =$ _____

19. $7 \times 10 =$ _____

20. $8 \times 10 =$ _____

21. $9 \times 10 =$ _____

22. $10 \times 10 =$ _____

23. $11 \times 10 =$ _____

24. $12 \times 10 =$ _____

41. $3 \times 10 =$ _____

42. $10 \times 5 =$ _____

43. $8 \times 10 =$ _____

44. $10 \times 7 =$ _____

45. $10 \times 8 =$ _____

46. $12 \times 10 =$ _____

47. $10 \times 4 =$ _____

48. $2 \times 10 =$ _____

49. $10 \times 1 =$ _____

50. $5 \times 10 =$ _____

51. $11 \times 10 =$ _____

52. $1 \times 10 =$ _____

53. $12 \times 10 =$ _____

54. $7 \times 10 =$ _____

55. $9 \times 10 =$ _____

56. $6 \times 10 =$ _____

57. $5 \times 10 =$ _____

58. $10 \times 10 =$ _____

59. $3 \times 10 =$ _____

60. $10 \times 3 =$ _____

Continue here...

25. $4 \times 10 =$ _____

26. $10 \times 1 =$ _____

27. $5 \times 10 =$ _____

28. $10 \times 6 =$ _____

29. $6 \times 10 =$ _____

30. $10 \times 5 =$ _____

31. $2 \times 10 =$ _____

32. $10 \times 4 =$ _____

33. $7 \times 10 =$ _____

34. $8 \times 10 =$ _____

35. $10 \times 9 =$ _____

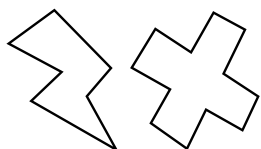
36. $11 \times 10 =$ _____

37. $10 \times 12 =$ _____

38. $10 \times 11 =$ _____

39. $10 \times 2 =$ _____

40. $1 \times 10 =$ _____



SCORE:

Grown-ups:
Can learners spot links between neighbouring questions?



Name: _____

Date: _____

MISSING NUMBER 1

Practise 10s

Complete first and then use it to help you if you get stuck.

ROCK BOX

1. $10 \times \underline{\quad} = 10$

2. $10 \times \underline{\quad} = 20$

3. $10 \times \underline{\quad} = 30$

4. $10 \times \underline{\quad} = 40$

5. $10 \times \underline{\quad} = 50$

6. $10 \times \underline{\quad} = 60$

7. $10 \times \underline{\quad} = 70$

8. $10 \times \underline{\quad} = 80$

9. $10 \times \underline{\quad} = 90$

10. $10 \times \underline{\quad} = 100$

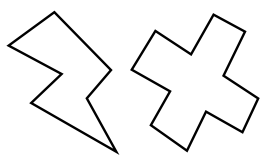
11. $10 \times \underline{\quad} = 110$

12. $10 \times \underline{\quad} = 120$

21. $10 \times \underline{\quad} = 50$
22. $10 \times \underline{\quad} = 20$
23. $10 \times \underline{\quad} = 60$
24. $10 \times \underline{\quad} = 120$
25. $10 \times \underline{\quad} = 100$
26. $10 \times \underline{\quad} = 90$
27. $10 \times \underline{\quad} = 110$
28. $10 \times \underline{\quad} = 70$
29. $10 \times \underline{\quad} = 40$
30. $10 \times \underline{\quad} = 30$
31. $10 \times \underline{\quad} = 10$
32. $10 \times \underline{\quad} = 110$
33. $10 \times \underline{\quad} = 80$
34. $10 \times \underline{\quad} = 50$
35. $10 \times \underline{\quad} = 10$
36. $10 \times \underline{\quad} = 40$
37. $10 \times \underline{\quad} = 60$
38. $10 \times \underline{\quad} = 70$
39. $10 \times \underline{\quad} = 90$
40. $10 \times \underline{\quad} = 120$
41. $10 \times \underline{\quad} = 20$
42. $10 \times \underline{\quad} = 30$
42. $10 \times \underline{\quad} = 10$
44. $10 \times \underline{\quad} = 50$
45. $10 \times \underline{\quad} = 70$
46. $10 \times \underline{\quad} = 40$
47. $10 \times \underline{\quad} = 80$
48. $10 \times \underline{\quad} = 120$
49. $10 \times \underline{\quad} = 100$
50. $10 \times \underline{\quad} = 90$
51. $10 \times \underline{\quad} = 60$
52. $10 \times \underline{\quad} = 30$
53. $10 \times \underline{\quad} = 110$
54. $10 \times \underline{\quad} = 10$
55. $10 \times \underline{\quad} = 20$
56. $10 \times \underline{\quad} = 70$
57. $10 \times \underline{\quad} = 50$
58. $10 \times \underline{\quad} = 80$
59. $10 \times \underline{\quad} = 90$
60. $10 \times \underline{\quad} = 100$

Continue here...

13. $10 \times \underline{\quad} = 40$
14. $10 \times \underline{\quad} = 10$
15. $10 \times \underline{\quad} = 100$
16. $10 \times \underline{\quad} = 90$
17. $10 \times \underline{\quad} = 120$
18. $10 \times \underline{\quad} = 110$
19. $10 \times \underline{\quad} = 80$
20. $10 \times \underline{\quad} = 70$



SCORE:

Grown-ups:
Can learners spot links between neighbouring questions?



Name: _____

Date: _____

MISSING NUMBER 2

Practise 10s

Complete first and then use it to help you if you get stuck.

ROCK BOX					
1.	$10 \times$	$= 10$	2.	$1 \times$	$= 10$
3.	$10 \times$	$= 20$	4.	$2 \times$	$= 20$
5.	$10 \times$	$= 30$	6.	$3 \times$	$= 30$
7.	$10 \times$	$= 40$	8.	$4 \times$	$= 40$
9.	$10 \times$	$= 50$	10.	$5 \times$	$= 50$
11.	$10 \times$	$= 60$	12.	$6 \times$	$= 60$
13.	$10 \times$	$= 70$	14.	$7 \times$	$= 70$
15.	$10 \times$	$= 80$	16.	$8 \times$	$= 80$
17.	$10 \times$	$= 90$	18.	$9 \times$	$= 90$
19.	$10 \times$	$= 100$	20.	$10 \times$	$= 100$
21.	$10 \times$	$= 110$	22.	$11 \times$	$= 110$
23.	$10 \times$	$= 120$	24.	$12 \times$	$= 120$

Continue here...

25. $10 \times$ _____ $= 90$

33. $1 \times$ _____ $= 10$

26. $9 \times$ _____ $= 90$

34. $11 \times$ _____ $= 110$

27. $10 \times$ _____ $= 60$

35. $9 \times$ _____ $= 90$

27. $7 \times$ _____ $= 70$

36. $10 \times$ _____ $= 120$

29. $8 \times$ _____ $= 80$

37. $10 \times$ _____ $= 70$

30. $10 \times$ _____ $= 110$

38. $5 \times$ _____ $= 50$

31. $12 \times$ _____ $= 120$

39. $10 \times$ _____ $= 60$

32. $10 \times$ _____ $= 10$

40. $3 \times$ _____ $= 30$

41. $4 \times$ _____ $= 40$

42. $10 \times$ _____ $= 20$

43. $10 \times$ _____ $= 80$

44. $12 \times$ _____ $= 120$

45. $6 \times$ _____ $= 60$

46. $7 \times$ _____ $= 70$

47. $10 \times$ _____ $= 90$

48. $11 \times$ _____ $= 110$

49. $10 \times$ _____ $= 100$

50. $10 \times$ _____ $= 10$

51. $10 \times$ _____ $= 120$

52. $10 \times$ _____ $= 30$

53. $10 \times$ _____ $= 40$

54. $10 \times$ _____ $= 50$

55. $10 \times$ _____ $= 100$


56. $2 \times$ _____ $= 20$

57. $8 \times$ _____ $= 80$

58. $1 \times$ _____ $= 10$

59. $9 \times$ _____ $= 90$

60. $12 \times$ _____ $= 120$



SCORE:

Grown-ups:
Can learners spot links between neighbouring questions?



Name: _____

Date: _____

DIVISION 1

Practise 10s

Complete first and then use it to help you if you get stuck.

ROCK BOX

1. $10 \div 10 =$ _____

2. $20 \div 10 =$ _____

3. $30 \div 10 =$ _____

4. $40 \div 10 =$ _____

5. $50 \div 10 =$ _____

6. $60 \div 10 =$ _____

7. $70 \div 10 =$ _____

8. $80 \div 10 =$ _____

9. $90 \div 10 =$ _____

10. $100 \div 10 =$ _____

11. $110 \div 10 =$ _____

12. $120 \div 10 =$ _____

21. $110 \div 10 =$ _____

22. $90 \div 10 =$ _____

23. $50 \div 10 =$ _____

24. $40 \div 10 =$ _____

25. $30 \div 10 =$ _____

26. $60 \div 10 =$ _____

27. $120 \div 10 =$ _____

28. $80 \div 10 =$ _____

29. $40 \div 10 =$ _____

30. $100 \div 10 =$ _____

31. $110 \div 10 =$ _____

32. $90 \div 10 =$ _____

33. $70 \div 10 =$ _____

34. $10 \div 10 =$ _____

35. $50 \div 10 =$ _____

36. $80 \div 10 =$ _____

37. $120 \div 10 =$ _____

38. $30 \div 10 =$ _____

39. $10 \div 10 =$ _____

40. $60 \div 10 =$ _____

41. $90 \div 10 =$ _____

42. $80 \div 10 =$ _____

43. $20 \div 10 =$ _____

44. $60 \div 10 =$ _____

45. $70 \div 10 =$ _____

46. $60 \div 10 =$ _____

47. $50 \div 10 =$ _____

48. $80 \div 10 =$ _____

49. $20 \div 10 =$ _____

50. $10 \div 10 =$ _____

51. $40 \div 10 =$ _____

52. $90 \div 10 =$ _____

53. $30 \div 10 =$ _____

54. $80 \div 10 =$ _____

55. $110 \div 10 =$ _____

56. $100 \div 10 =$ _____

57. $120 \div 10 =$ _____

58. $70 \div 10 =$ _____

59. $50 \div 10 =$ _____

60. $60 \div 10 =$ _____

Continue here...

13. $120 \div 10 =$ _____

14. $80 \div 10 =$ _____

15. $100 \div 10 =$ _____

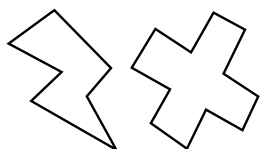
16. $60 \div 10 =$ _____

17. $110 \div 10 =$ _____

18. $10 \div 10 =$ _____

19. $30 \div 10 =$ _____

20. $70 \div 10 =$ _____



SCORE:

Grown-ups:
Can learners spot links between neighbouring questions?



Name: _____

Date: _____

DIVISION 2

Practise 10s

Complete first and then use it to help you if you get stuck.

ROCK BOX

1. $10 \div 10 =$

2. $10 \div 1 =$

3. $20 \div 10 =$

4. $20 \div 2 =$

5. $30 \div 10 =$

6. $30 \div 3 =$

7. $40 \div 10 =$

8. $40 \div 4 =$

9. $50 \div 10 =$

10. $50 \div 5 =$

11. $60 \div 10 =$

12. $60 \div 6 =$

13. $70 \div 10 =$

14. $70 \div 7 =$

15. $80 \div 10 =$

16. $80 \div 8 =$

17. $90 \div 10 =$

18. $90 \div 9 =$

19. $100 \div 10 =$

20. $100 \div 10 =$

21. $110 \div 10 =$

22. $110 \div 11 =$

23. $120 \div 10 =$

24. $120 \div 12 =$

41. $80 \div 8 =$ _____

42. $60 \div 6 =$ _____

43. $50 \div 10 =$ _____

44. $120 \div 12 =$ _____

45. $100 \div 10 =$ _____

46. $30 \div 10 =$ _____

47. $70 \div 10 =$ _____

48. $10 \div 1 =$ _____

49. $110 \div 10 =$ _____

50. $40 \div 4 =$ _____

51. $40 \div 10 =$ _____

52. $80 \div 10 =$ _____

53. $90 \div 9 =$ _____

54. $80 \div 8 =$ _____

55. $100 \div 10 =$ _____

56. $60 \div 10 =$ _____

57. $20 \div 2 =$ _____

58. $30 \div 3 =$ _____

59. $70 \div 10 =$ _____

60. $50 \div 5 =$ _____

Continue here...

25. $50 \div 5 =$ _____

33. $60 \div 6 =$ _____

26. $30 \div 10 =$ _____

34. $50 \div 10 =$ _____

27. $50 \div 10 =$ _____

35. $60 \div 10 =$ _____

28. $100 \div 10 =$ _____

36. $90 \div 9 =$ _____

29. $30 \div 3 =$ _____

37. $110 \div 11 =$ _____

30. $10 \div 10 =$ _____

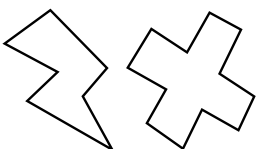
38. $90 \div 10 =$ _____

31. $10 \div 1 =$ _____

39. $40 \div 10 =$ _____

32. $20 \div 10 =$ _____

40. $70 \div 7 =$ _____



SCORE:

Grown-ups:
Can learners spot links between neighbouring questions?





CHECK 1



Name: _____

Date: _____

- | | | |
|----------------------------|----------------------------|---------------------------|
| 1. $10 \times 8 =$ _____ | 21. $10 \times 8 =$ _____ | 41. $20 \div 10 =$ _____ |
| 2. $10 \times 2 =$ _____ | 22. $10 \times 10 =$ _____ | 42. $100 \div 10 =$ _____ |
| 3. $10 \times 5 =$ _____ | 23. $10 \times 12 =$ _____ | 43. $80 \div 10 =$ _____ |
| 4. $10 \times 4 =$ _____ | 24. $10 \times 9 =$ _____ | 44. $10 \div 10 =$ _____ |
| 5. $10 \times 3 =$ _____ | 25. $10 \times 2 =$ _____ | 45. $50 \div 10 =$ _____ |
| 6. $10 \times 6 =$ _____ | 26. $10 \times 1 =$ _____ | 46. $90 \div 10 =$ _____ |
| 7. $10 \times 7 =$ _____ | 27. $10 \times 5 =$ _____ | 47. $70 \div 10 =$ _____ |
| 8. $10 \times 10 =$ _____ | 28. $10 \times 4 =$ _____ | 48. $10 \div 10 =$ _____ |
| 9. $10 \times 12 =$ _____ | 29. $10 \times 3 =$ _____ | 49. $100 \div 10 =$ _____ |
| 10. $10 \times 1 =$ _____ | 30. $10 \times 6 =$ _____ | 50. $120 \div 10 =$ _____ |
| 11. $10 \times 9 =$ _____ | 31. $30 \div 10 =$ _____ | 51. $40 \div 10 =$ _____ |
| 12. $10 \times 2 =$ _____ | 32. $60 \div 10 =$ _____ | 52. $60 \div 10 =$ _____ |
| 13. $10 \times 11 =$ _____ | 33. $90 \div 10 =$ _____ | 53. $50 \div 10 =$ _____ |
| 14. $10 \times 7 =$ _____ | 34. $50 \div 10 =$ _____ | 54. $30 \div 10 =$ _____ |
| 15. $10 \times 9 =$ _____ | 35. $100 \div 10 =$ _____ | 55. $100 \div 10 =$ _____ |
| 16. $10 \times 4 =$ _____ | 36. $10 \div 10 =$ _____ | 56. $110 \div 10 =$ _____ |
| 17. $10 \times 3 =$ _____ | 37. $110 \div 10 =$ _____ | 57. $90 \div 10 =$ _____ |
| 18. $10 \times 6 =$ _____ | 38. $120 \div 10 =$ _____ | 58. $10 \div 10 =$ _____ |
| 19. $10 \times 1 =$ _____ | 39. $80 \div 10 =$ _____ | 59. $20 \div 10 =$ _____ |
| 20. $10 \times 5 =$ _____ | 40. $40 \div 10 =$ _____ | 60. $40 \div 10 =$ _____ |

SCORE:
(5 minute limit)

/60

TIME TAKEN (optional)

<input type="text"/>	<input type="text"/>
MINUTES	SECONDS



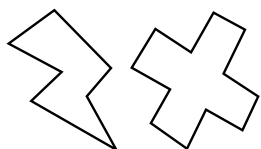
Name: _____

Date: _____

MULTIPLICATION 3

Practise 10s

- | | | | | | |
|-----|------------------------|-----|------------------------|-----|------------------------|
| 1. | $5 \times 10 =$ _____ | 21. | $8 \times 10 =$ _____ | 41. | $10 \times 1 =$ _____ |
| 2. | $3 \times 10 =$ _____ | 22. | $1 \times 10 =$ _____ | 42. | $12 \times 10 =$ _____ |
| 3. | $10 \times 3 =$ _____ | 23. | $2 \times 10 =$ _____ | 43. | $10 \times 11 =$ _____ |
| 4. | $7 \times 10 =$ _____ | 24. | $10 \times 4 =$ _____ | 44. | $7 \times 10 =$ _____ |
| 5. | $4 \times 10 =$ _____ | 25. | $6 \times 10 =$ _____ | 45. | $1 \times 10 =$ _____ |
| 6. | $10 \times 7 =$ _____ | 26. | $10 \times 9 =$ _____ | 46. | $3 \times 10 =$ _____ |
| 7. | $10 \times 5 =$ _____ | 27. | $12 \times 10 =$ _____ | 47. | $10 \times 12 =$ _____ |
| 8. | $8 \times 10 =$ _____ | 28. | $10 \times 11 =$ _____ | 48. | $10 \times 9 =$ _____ |
| 9. | $10 \times 9 =$ _____ | 29. | $1 \times 10 =$ _____ | 49. | $6 \times 10 =$ _____ |
| 10. | $11 \times 10 =$ _____ | 30. | $10 \times 10 =$ _____ | 50. | $10 \times 3 =$ _____ |
| 11. | $10 \times 12 =$ _____ | 31. | $11 \times 10 =$ _____ | 51. | $10 \times 5 =$ _____ |
| 12. | $12 \times 10 =$ _____ | 32. | $5 \times 10 =$ _____ | 52. | $10 \times 10 =$ _____ |
| 13. | $10 \times 1 =$ _____ | 33. | $3 \times 10 =$ _____ | 53. | $5 \times 10 =$ _____ |
| 14. | $10 \times 10 =$ _____ | 34. | $2 \times 10 =$ _____ | 54. | $10 \times 8 =$ _____ |
| 15. | $7 \times 10 =$ _____ | 35. | $10 \times 7 =$ _____ | 55. | $2 \times 10 =$ _____ |
| 16. | $10 \times 6 =$ _____ | 36. | $4 \times 10 =$ _____ | 56. | $4 \times 10 =$ _____ |
| 17. | $10 \times 3 =$ _____ | 37. | $3 \times 10 =$ _____ | 57. | $10 \times 7 =$ _____ |
| 18. | $10 \times 1 =$ _____ | 38. | $10 \times 2 =$ _____ | 58. | $10 \times 9 =$ _____ |
| 19. | $10 \times 4 =$ _____ | 39. | $10 \times 9 =$ _____ | 59. | $8 \times 10 =$ _____ |
| 20. | $10 \times 8 =$ _____ | 40. | $8 \times 10 =$ _____ | 60. | $10 \times 6 =$ _____ |



SCORE:

Grown-ups:
Can learners spot links between neighbouring questions?



Name: _____

MISSING NUMBERS 3

Practise 10s

Date: _____

1. $10 \times \underline{\quad} = 110$

21. $10 \times \underline{\quad} = 40$

41. $10 \times \underline{\quad} = 10$

2. $10 \times \underline{\quad} = 120$

22. $12 \times \underline{\quad} = 120$

42. $11 \times \underline{\quad} = 110$

3. $7 \times \underline{\quad} = 70$

23. $10 \times \underline{\quad} = 80$

43. $10 \times \underline{\quad} = 80$

4. $10 \times \underline{\quad} = 50$

24. $7 \times \underline{\quad} = 70$

44. $9 \times \underline{\quad} = 90$

5. $9 \times \underline{\quad} = 90$

25. $5 \times \underline{\quad} = 50$

45. $10 \times \underline{\quad} = 90$

6. $6 \times \underline{\quad} = 60$

26. $6 \times \underline{\quad} = 60$

46. $10 \times \underline{\quad} = 100$

7. $10 \times \underline{\quad} = 60$

27. $10 \times \underline{\quad} = 20$

47. $10 \times \underline{\quad} = 40$

8. $4 \times \underline{\quad} = 40$

28. $1 \times \underline{\quad} = 10$

48. $2 \times \underline{\quad} = 20$

9. $9 \times \underline{\quad} = 90$

29. $10 \times \underline{\quad} = 100$

49. $1 \times \underline{\quad} = 10$

10. $3 \times \underline{\quad} = 30$

30. $10 \times \underline{\quad} = 110$

50. $10 \times \underline{\quad} = 80$

11. $10 \times \underline{\quad} = 20$

31. $9 \times \underline{\quad} = 90$

51. $6 \times \underline{\quad} = 60$

12. $1 \times \underline{\quad} = 10$

32. $4 \times \underline{\quad} = 40$

52. $4 \times \underline{\quad} = 40$

13. $10 \times \underline{\quad} = 10$

33. $10 \times \underline{\quad} = 30$

53. $10 \times \underline{\quad} = 50$

14. $10 \times \underline{\quad} = 100$

34. $10 \times \underline{\quad} = 100$

54. $10 \times \underline{\quad} = 70$

15. $10 \times \underline{\quad} = 110$

35. $10 \times \underline{\quad} = 30$

55. $9 \times \underline{\quad} = 90$

16. $7 \times \underline{\quad} = 70$

36. $5 \times \underline{\quad} = 50$

56. $10 \times \underline{\quad} = 110$

17. $5 \times \underline{\quad} = 50$

37. $10 \times \underline{\quad} = 90$

57. $12 \times \underline{\quad} = 120$

18. $8 \times \underline{\quad} = 80$

38. $4 \times \underline{\quad} = 40$

58. $10 \times \underline{\quad} = 120$

19. $10 \times \underline{\quad} = 40$

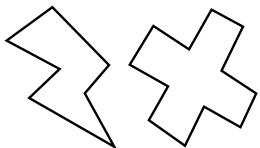
39. $10 \times \underline{\quad} = 10$

59. $10 \times \underline{\quad} = 30$

20. $10 \times \underline{\quad} = 70$

40. $6 \times \underline{\quad} = 60$

60. $9 \times \underline{\quad} = 90$



SCORE:

Grown-ups:
Can learners spot links between neighbouring questions?



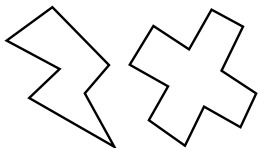
Name: _____

Date: _____

DIVISION 3

Practise 10s

- | | | |
|---------------------------|---------------------------|---------------------------|
| 1. $70 \div 7 =$ _____ | 21. $120 \div 10 =$ _____ | 41. $80 \div 10 =$ _____ |
| 2. $70 \div 10 =$ _____ | 22. $60 \div 10 =$ _____ | 42. $90 \div 10 =$ _____ |
| 3. $30 \div 3 =$ _____ | 23. $90 \div 10 =$ _____ | 43. $70 \div 7 =$ _____ |
| 4. $20 \div 2 =$ _____ | 24. $70 \div 7 =$ _____ | 44. $110 \div 11 =$ _____ |
| 5. $20 \div 10 =$ _____ | 25. $30 \div 10 =$ _____ | 45. $110 \div 10 =$ _____ |
| 6. $40 \div 4 =$ _____ | 26. $100 \div 10 =$ _____ | 46. $10 \div 1 =$ _____ |
| 7. $100 \div 10 =$ _____ | 27. $50 \div 5 =$ _____ | 47. $100 \div 10 =$ _____ |
| 8. $110 \div 11 =$ _____ | 28. $70 \div 10 =$ _____ | 48. $90 \div 9 =$ _____ |
| 9. $110 \div 10 =$ _____ | 29. $40 \div 4 =$ _____ | 49. $80 \div 8 =$ _____ |
| 10. $70 \div 10 =$ _____ | 30. $60 \div 10 =$ _____ | 50. $40 \div 10 =$ _____ |
| 11. $50 \div 5 =$ _____ | 31. $40 \div 10 =$ _____ | 51. $40 \div 4 =$ _____ |
| 12. $120 \div 12 =$ _____ | 32. $30 \div 3 =$ _____ | 52. $60 \div 10 =$ _____ |
| 13. $120 \div 10 =$ _____ | 33. $90 \div 9 =$ _____ | 53. $30 \div 10 =$ _____ |
| 14. $80 \div 10 =$ _____ | 34. $100 \div 10 =$ _____ | 54. $70 \div 10 =$ _____ |
| 15. $110 \div 10 =$ _____ | 35. $110 \div 10 =$ _____ | 55. $30 \div 3 =$ _____ |
| 16. $50 \div 10 =$ _____ | 36. $100 \div 10 =$ _____ | 56. $120 \div 10 =$ _____ |
| 17. $60 \div 6 =$ _____ | 37. $120 \div 12 =$ _____ | 57. $60 \div 10 =$ _____ |
| 18. $30 \div 10 =$ _____ | 38. $10 \div 1 =$ _____ | 58. $50 \div 10 =$ _____ |
| 19. $30 \div 3 =$ _____ | 39. $10 \div 10 =$ _____ | 59. $20 \div 2 =$ _____ |
| 20. $90 \div 9 =$ _____ | 40. $80 \div 8 =$ _____ | 60. $20 \div 10 =$ _____ |



SCORE:

Grown-ups:
Can learners spot links between neighbouring questions?



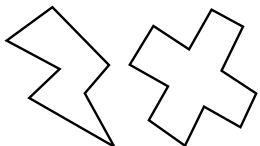
Name: _____

Date: _____

MULTIPLICATION 4

Practise 10s

- | | | | | | |
|-----|------------------------|-----|------------------------|-----|------------------------|
| 1. | $10 \times 12 =$ _____ | 21. | $10 \times 1 =$ _____ | 41. | $3 \times 10 =$ _____ |
| 2. | $10 \times 11 =$ _____ | 22. | $4 \times 10 =$ _____ | 42. | $2 \times 10 =$ _____ |
| 3. | $8 \times 10 =$ _____ | 23. | $10 \times 4 =$ _____ | 43. | $10 \times 8 =$ _____ |
| 4. | $10 \times 9 =$ _____ | 24. | $3 \times 10 =$ _____ | 44. | $4 \times 10 =$ _____ |
| 5. | $7 \times 10 =$ _____ | 25. | $6 \times 10 =$ _____ | 45. | $2 \times 10 =$ _____ |
| 6. | $5 \times 10 =$ _____ | 26. | $10 \times 9 =$ _____ | 46. | $10 \times 1 =$ _____ |
| 7. | $10 \times 6 =$ _____ | 27. | $8 \times 10 =$ _____ | 47. | $10 \times 11 =$ _____ |
| 8. | $4 \times 10 =$ _____ | 28. | $10 \times 10 =$ _____ | 48. | $10 \times 12 =$ _____ |
| 9. | $10 \times 3 =$ _____ | 29. | $10 \times 11 =$ _____ | 49. | $7 \times 10 =$ _____ |
| 10. | $3 \times 10 =$ _____ | 30. | $6 \times 10 =$ _____ | 50. | $10 \times 10 =$ _____ |
| 11. | $10 \times 6 =$ _____ | 31. | $10 \times 6 =$ _____ | 51. | $10 \times 4 =$ _____ |
| 12. | $10 \times 7 =$ _____ | 32. | $10 \times 9 =$ _____ | 52. | $9 \times 10 =$ _____ |
| 13. | $10 \times 10 =$ _____ | 33. | $10 \times 3 =$ _____ | 53. | $10 \times 6 =$ _____ |
| 14. | $12 \times 10 =$ _____ | 34. | $10 \times 5 =$ _____ | 54. | $8 \times 10 =$ _____ |
| 15. | $10 \times 11 =$ _____ | 35. | $8 \times 10 =$ _____ | 55. | $10 \times 4 =$ _____ |
| 16. | $10 \times 6 =$ _____ | 36. | $11 \times 10 =$ _____ | 56. | $10 \times 11 =$ _____ |
| 17. | $8 \times 10 =$ _____ | 37. | $10 \times 10 =$ _____ | 57. | $3 \times 10 =$ _____ |
| 18. | $3 \times 10 =$ _____ | 38. | $10 \times 1 =$ _____ | 58. | $10 \times 10 =$ _____ |
| 19. | $10 \times 2 =$ _____ | 39. | $10 \times 2 =$ _____ | 59. | $6 \times 10 =$ _____ |
| 20. | $1 \times 10 =$ _____ | 40. | $5 \times 10 =$ _____ | 60. | $10 \times 9 =$ _____ |



SCORE:



Grown-ups:
Can learners spot links between neighbouring questions?



Name: _____

MISSING NUMBERS 4

Practise 10s

Date: _____

1. $10 \times \underline{\quad} = 60$

21. $10 \times \underline{\quad} = 50$

41. $10 \times \underline{\quad} = 60$

2. $9 \times \underline{\quad} = 90$

22. $10 \times \underline{\quad} = 40$

42. $5 \times \underline{\quad} = 50$

3. $8 \times \underline{\quad} = 80$

23. $3 \times \underline{\quad} = 30$

43. $10 \times \underline{\quad} = 100$

4. $4 \times \underline{\quad} = 40$

24. $6 \times \underline{\quad} = 60$

44. $10 \times \underline{\quad} = 10$

5. $10 \times \underline{\quad} = 30$

25. $10 \times \underline{\quad} = 70$

45. $9 \times \underline{\quad} = 90$

6. $10 \times \underline{\quad} = 50$

26. $10 \times \underline{\quad} = 50$

46. $10 \times \underline{\quad} = 110$

7. $6 \times \underline{\quad} = 60$

27. $10 \times \underline{\quad} = 90$

47. $7 \times \underline{\quad} = 70$

8. $10 \times \underline{\quad} = 10$

28. $8 \times \underline{\quad} = 80$

48. $3 \times \underline{\quad} = 30$

9. $10 \times \underline{\quad} = 20$

29. $10 \times \underline{\quad} = 10$

49. $2 \times \underline{\quad} = 20$

10. $10 \times \underline{\quad} = 100$

30. $12 \times \underline{\quad} = 120$

50. $10 \times \underline{\quad} = 40$

11. $12 \times \underline{\quad} = 120$

31. $10 \times \underline{\quad} = 30$

51. $5 \times \underline{\quad} = 50$

12. $10 \times \underline{\quad} = 60$

32. $2 \times \underline{\quad} = 20$

52. $10 \times \underline{\quad} = 60$

13. $10 \times \underline{\quad} = 70$

33. $6 \times \underline{\quad} = 60$

53. $10 \times \underline{\quad} = 100$

14. $1 \times \underline{\quad} = 10$

34. $10 \times \underline{\quad} = 20$

54. $12 \times \underline{\quad} = 120$

15. $10 \times \underline{\quad} = 20$

35. $10 \times \underline{\quad} = 10$

55. $1 \times \underline{\quad} = 10$

16. $10 \times \underline{\quad} = 110$

36. $12 \times \underline{\quad} = 120$

56. $10 \times \underline{\quad} = 100$

17. $9 \times \underline{\quad} = 90$

37. $9 \times \underline{\quad} = 90$

57. $9 \times \underline{\quad} = 90$

18. $10 \times \underline{\quad} = 100$

38. $10 \times \underline{\quad} = 40$

58. $10 \times \underline{\quad} = 40$

19. $6 \times \underline{\quad} = 60$

39. $10 \times \underline{\quad} = 30$

59. $10 \times \underline{\quad} = 70$

20. $10 \times \underline{\quad} = 70$

40. $8 \times \underline{\quad} = 80$

60. $7 \times \underline{\quad} = 70$



SCORE:

Grown-ups:
Can learners spot links between neighbouring questions?



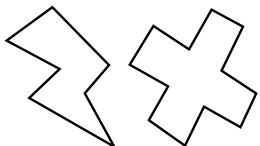
Name: _____

Date: _____

DIVISION 4

Practise 10s

- | | | |
|---------------------------|---------------------------|---------------------------|
| 1. $120 \div 10 =$ _____ | 21. $100 \div 10 =$ _____ | 41. $120 \div 10 =$ _____ |
| 2. $110 \div 10 =$ _____ | 22. $120 \div 10 =$ _____ | 42. $10 \div 1 =$ _____ |
| 3. $10 \div 1 =$ _____ | 23. $110 \div 11 =$ _____ | 43. $10 \div 10 =$ _____ |
| 4. $10 \div 10 =$ _____ | 24. $70 \div 10 =$ _____ | 44. $40 \div 10 =$ _____ |
| 5. $90 \div 9 =$ _____ | 25. $70 \div 7 =$ _____ | 45. $70 \div 7 =$ _____ |
| 6. $80 \div 10 =$ _____ | 26. $40 \div 10 =$ _____ | 46. $70 \div 10 =$ _____ |
| 7. $50 \div 10 =$ _____ | 27. $50 \div 10 =$ _____ | 47. $90 \div 9 =$ _____ |
| 8. $60 \div 6 =$ _____ | 28. $90 \div 10 =$ _____ | 48. $100 \div 10 =$ _____ |
| 9. $70 \div 7 =$ _____ | 29. $90 \div 9 =$ _____ | 49. $110 \div 10 =$ _____ |
| 10. $100 \div 10 =$ _____ | 30. $80 \div 10 =$ _____ | 50. $20 \div 10 =$ _____ |
| 11. $30 \div 3 =$ _____ | 31. $60 \div 10 =$ _____ | 51. $110 \div 11 =$ _____ |
| 12. $20 \div 2 =$ _____ | 32. $40 \div 4 =$ _____ | 52. $30 \div 10 =$ _____ |
| 13. $50 \div 10 =$ _____ | 33. $10 \div 10 =$ _____ | 53. $120 \div 12 =$ _____ |
| 14. $60 \div 10 =$ _____ | 34. $50 \div 5 =$ _____ | 54. $40 \div 10 =$ _____ |
| 15. $90 \div 10 =$ _____ | 35. $70 \div 7 =$ _____ | 55. $70 \div 10 =$ _____ |
| 16. $40 \div 10 =$ _____ | 36. $20 \div 10 =$ _____ | 56. $60 \div 6 =$ _____ |
| 17. $40 \div 4 =$ _____ | 37. $90 \div 9 =$ _____ | 57. $10 \div 10 =$ _____ |
| 18. $80 \div 8 =$ _____ | 38. $30 \div 10 =$ _____ | 58. $20 \div 2 =$ _____ |
| 19. $10 \div 10 =$ _____ | 39. $110 \div 11 =$ _____ | 59. $100 \div 10 =$ _____ |
| 20. $120 \div 12 =$ _____ | 40. $60 \div 6 =$ _____ | 60. $10 \div 1 =$ _____ |



SCORE:

Grown-ups:
Can learners spot links between neighbouring questions?





CHECK 2



Name: _____

Date: _____

1. $10 \times 9 =$ _____

21. $10 \times 3 =$ _____

41. $10 \div 10 =$ _____

2. $10 \times 4 =$ _____

22. $10 \times 10 =$ _____

42. $90 \div 10 =$ _____

3. $10 \times 12 =$ _____

23. $10 \times 2 =$ _____

43. $70 \div 10 =$ _____

4. $10 \times 3 =$ _____

24. $10 \times 4 =$ _____

44. $110 \div 10 =$ _____

5. $10 \times 6 =$ _____

25. $10 \times 8 =$ _____

45. $20 \div 10 =$ _____

6. $10 \times 10 =$ _____

26. $10 \times 6 =$ _____

46. $100 \div 10 =$ _____

7. $10 \times 12 =$ _____

27. $10 \times 12 =$ _____

47. $120 \div 10 =$ _____

8. $10 \times 2 =$ _____

28. $10 \times 5 =$ _____

48. $10 \div 10 =$ _____

9. $10 \times 1 =$ _____

29. $10 \times 1 =$ _____

49. $30 \div 10 =$ _____

10. $10 \times 8 =$ _____

30. $10 \times 7 =$ _____

50. $80 \div 10 =$ _____

11. $10 \times 4 =$ _____

31. $90 \div 10 =$ _____

51. $40 \div 10 =$ _____

12. $10 \times 5 =$ _____

32. $50 \div 10 =$ _____

52. $70 \div 10 =$ _____

13. $10 \times 7 =$ _____

33. $40 \div 10 =$ _____

53. $30 \div 10 =$ _____

14. $10 \times 6 =$ _____

34. $100 \div 10 =$ _____

54. $110 \div 10 =$ _____

15. $10 \times 10 =$ _____

35. $110 \div 10 =$ _____

55. $100 \div 10 =$ _____

16. $10 \times 12 =$ _____

36. $30 \div 10 =$ _____

56. $50 \div 10 =$ _____

17. $10 \times 1 =$ _____

37. $60 \div 10 =$ _____

57. $20 \div 10 =$ _____

18. $10 \times 11 =$ _____

38. $70 \div 10 =$ _____

58. $70 \div 10 =$ _____

19. $10 \times 9 =$ _____

39. $50 \div 10 =$ _____

59. $60 \div 10 =$ _____

20. $10 \times 7 =$ _____

40. $80 \div 10 =$ _____

60. $10 \div 10 =$ _____

SCORE:
(5 minute limit)

/60

TIME TAKEN (optional)

MINUTES SECONDS

