


Word Problems

Learning Outcome: To add and subtract 10s from a given number within 100.

- Each packet contains 10 biscuits. Harry takes one packet to school to share with his friends. How many biscuits are left?



- Harry is 8 years old. His brother is 10 years older than Harry. How old is his brother?

- Emma has £25 to spend. She buys a bag for £10. How much money does she have left?



- Burnley FC scored 39 goals last season which was 10 more than Sunderland. How many goals did Sunderland score?



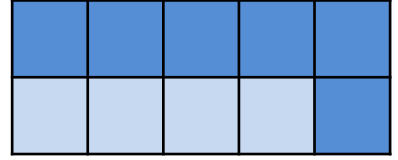
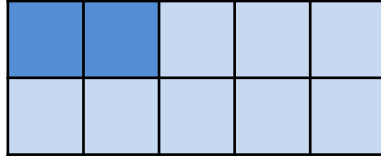
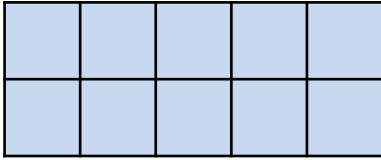
Comments

no help	
some help	
1-1	

Number Bonds to 100 (Tens)

Learning Outcome: To identify the number bonds to 100 in multiples of 10.

➤ Match the 10 frames to the sentences below.



$$40 + 60 = 100$$

$$100 = 100 + 0$$

One hundred = eighty plus twenty

➤ Continue the pattern.

90	=	100	-	10
80	=	100	-	20

➤ Insert the missing numbers.

2	+	8	=	
20	+	80	=	
5	+	5	=	
50	+		=	100
4	+	6	=	
	+	60	=	
7	+		=	10
	+	30	=	100
	+		=	100

➤ Shade the two numbers that equal 100.

50	20
80	50

30	70
10	50

90	40
80	10

60	30
40	20



Comments

no help	
some help	
1-1	