


1 Label the shapes.


Use the word bank to help you.

square    rectangle    circle    triangle



\_\_\_\_\_



\_\_\_\_\_







\_\_\_\_\_

\_\_\_\_\_

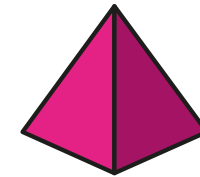


2 Which shape is the square?



3 Which shapes are circles?



4 Which shapes are triangles?



How do you know?

