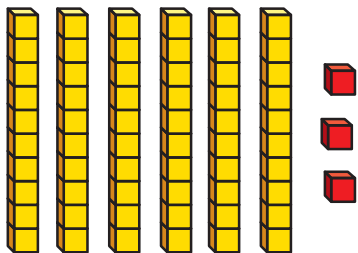
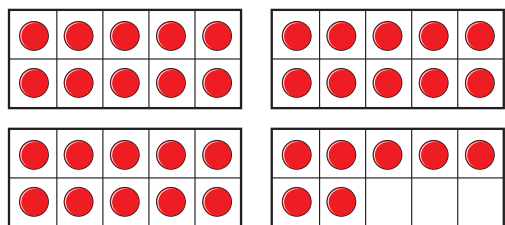


1 What is one more than each number?

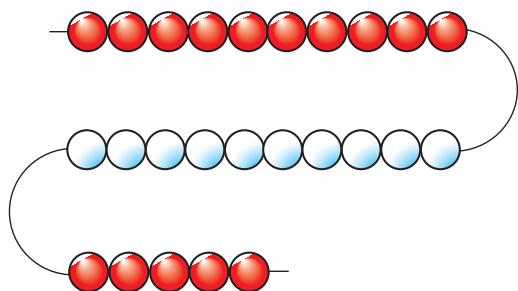
a)



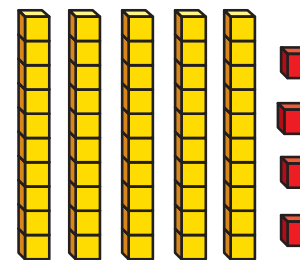
b)



c)



2 Sam makes this number.



a) Make a number that is one less than Sam's.

b) What number did you make?



3 Kim has 73 stickers.

She gets one more sticker.

How many stickers does she have now?

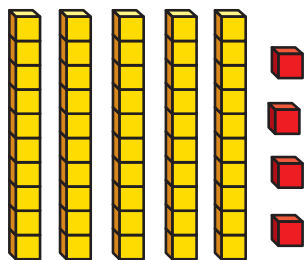


4 Write one more than each number.

- |       |       |
|-------|-------|
| a) 48 | d) 9  |
| b) 73 | e) 36 |
| c) 59 | f) 99 |



2 Sam makes this number.



- a) Make a number that is one less than Sam's.
- b) What number did you make?

3 Kim has 73 stickers.

She gets one more sticker.

How many stickers does she have now?

4 Write one more than each number.

- |       |       |
|-------|-------|
| a) 48 | d) 9  |
| b) 73 | e) 36 |
| c) 59 | f) 99 |



5 Write one less than each number.

- |       |       |
|-------|-------|
| a) 61 | d) 10 |
| b) 83 | e) 78 |
| c) 90 | f) 29 |



6 Complete the sentences.

- a) One less than 39 is
- b) One more than 39 is
- c) One more than  is 39
- d) One less than  is 39

