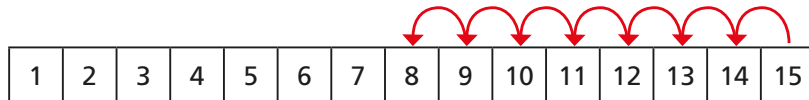



1 There are 15 cookies in a jar.

Mo eats 7 cookies.

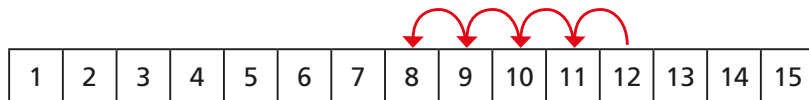
He counts back 7 from 15




How many cookies does Mo have left?

2 Use the number tracks to help you.


a) $12 - 4 =$



b) $12 - 5 =$

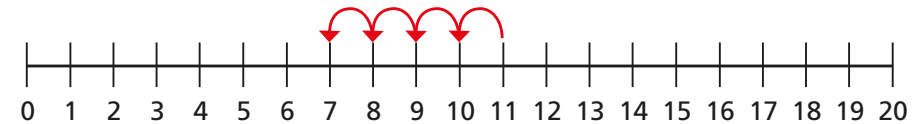


c) $12 - 7 =$

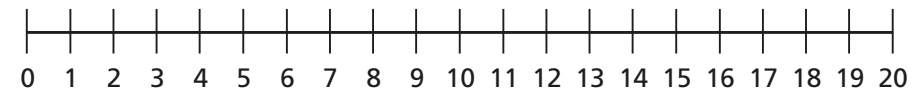


3 Use the number lines to help you.

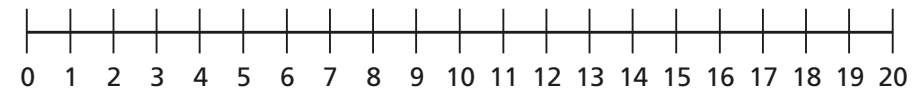
a) $11 - 4 =$



b) $16 - 9 =$



c) $14 - 11 =$



4 There are 13 toys in a box.

Kim takes some toys out of the box.

There are 5 toys left in the box.

How many toys does Kim take out of the box?

