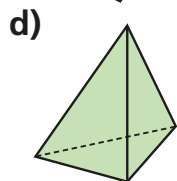
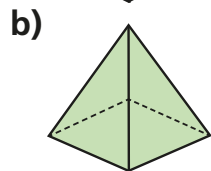
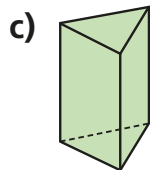
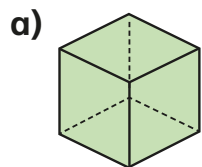


1 How many vertices does each shape have?



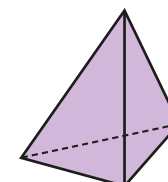
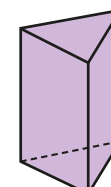
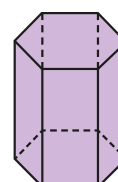
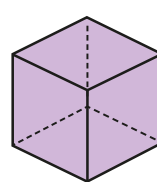
2 Complete the table.

Shape	Name	Number of vertices

Write the name of a different 3D shape with no vertices.

3 Write the shapes in order of the number of vertices.

Start with the shape that has the fewest vertices.



A

B

C

D

4 Complete the sentences.

more

fewer

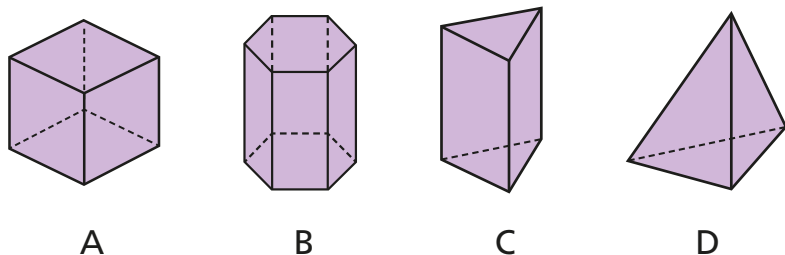
a) A cube has _____ vertices than a sphere.

b) A sphere has _____ vertices than a cone.

c) A triangular prism has _____ vertices than a cuboid.

3 Write the shapes in order of the number of vertices.

Start with the shape that has the fewest vertices.



4 Complete the sentences.

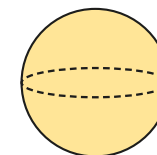
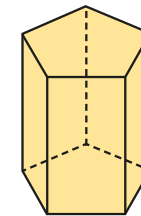
more

fewer

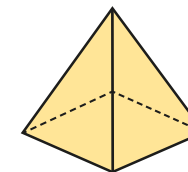
- a) A cube has _____ vertices than a sphere.
- b) A sphere has _____ vertices than a cone.
- c) A triangular prism has _____ vertices than a cuboid.

5 Match each shape to the correct label.

< 5 vertices



= 5 vertices



> 5 vertices

