

1 Match the coin to the amount.



20 pence



5 pence



10 pence



1 pound



1 pence



50 pence



2 pence



2 pounds



2 Here are some coins.



Complete the sentences.

There are 1p coins.

There are 2p coins.

There is 5p coin.

There are 10p coins.

There are 20p coins.

2 Here are some coins.



Complete the sentences.

There are 1p coins.

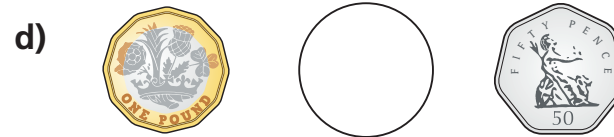
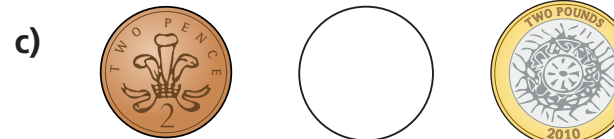


There are 2p coins.

There is 5p coin.


There are 10p coins.

There are 20p coins.

3 Write $<$ or $>$ to compare the amounts.



4 Mo has one coin in his hand.



I have more than 2 pence, but less than 1 pound.

Draw Mo's coin.

What is the value of Mo's coin?

Is there more than one answer?

