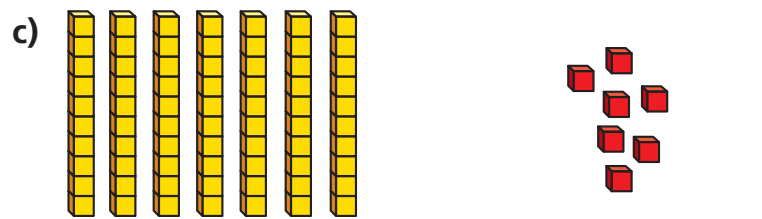
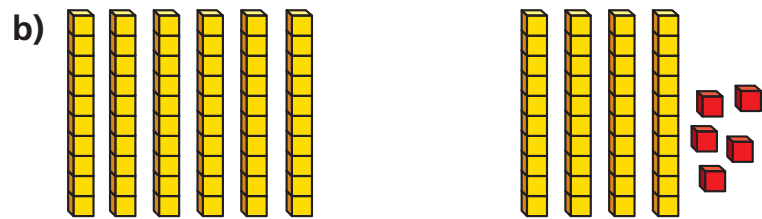
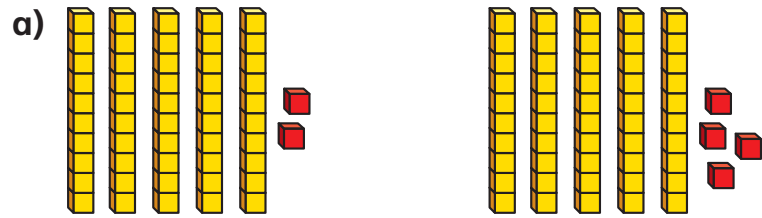


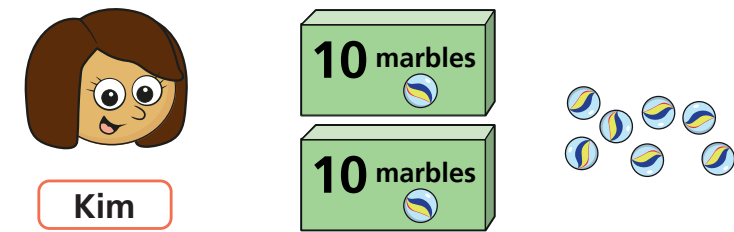
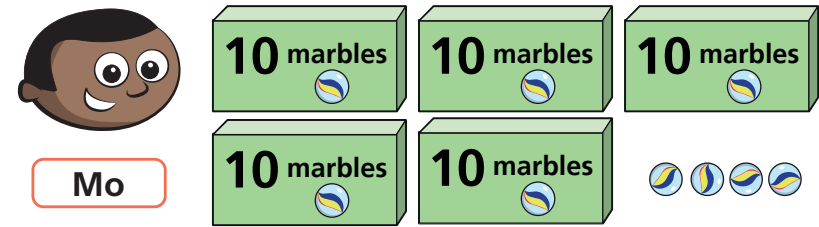
1 Which is the greater number in each pair?



How do you know?



2 Mo and Kim each have some marbles.



a) How many marbles does Mo have?

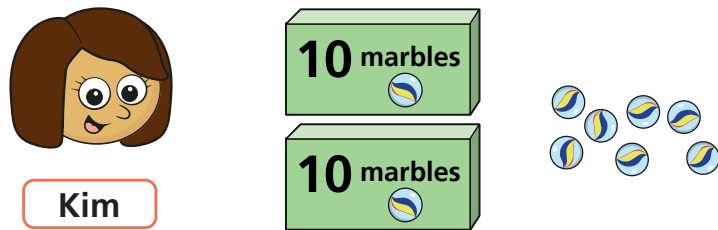
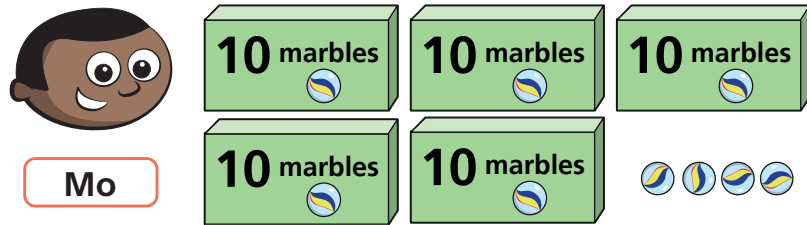
b) How many marbles does Kim have?

c) Who has more marbles?

How do you know?



2 Mo and Kim each have some marbles.



- How many marbles does Mo have?
- How many marbles does Kim have?
- Who has more marbles?
How do you know?



3 Use base 10

- Make a number greater than 50
What number did you make?
- Make a number less than 90
What number did you make?
- Make a number greater than 80
but less than 100
What number did you make?

Talk about your answers.

4 Write **greater than** or **less than** to complete the sentences.

- 72 is _____ 83
- 100 is _____ 99
- 65 is _____ 56

