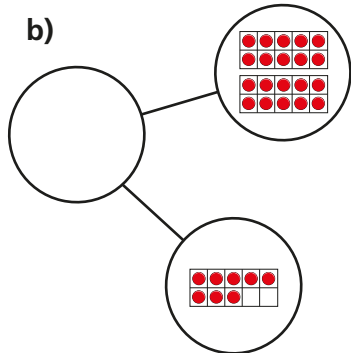
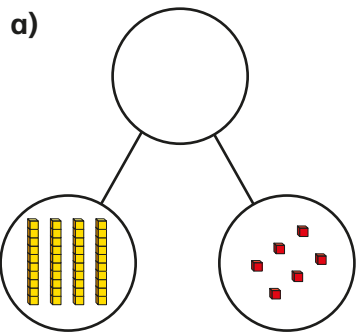
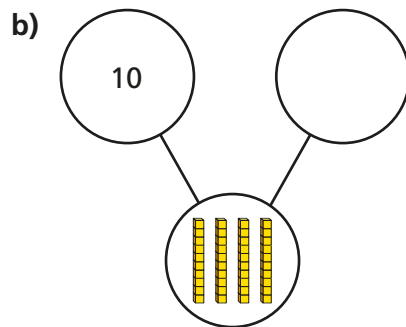
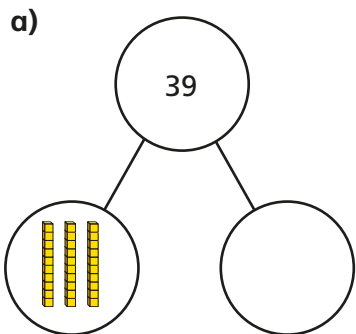


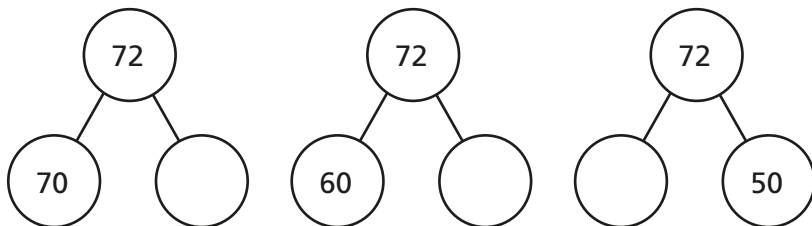
1 Write a numeral to complete the part-whole models.



2 Write a numeral to complete the part-whole models.



3 Complete the part-whole models.



What is the same and what is different about the part-whole models?



Complete the sentence for each part-whole model.

72 is made up of tens and ones.

How many other ways can you partition 72?

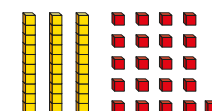
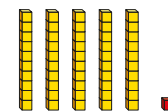
4 Draw part-whole models to represent each number in two different ways.

a) 9 b) 80 c) 53

5 Annie and Teddy have each made a number.



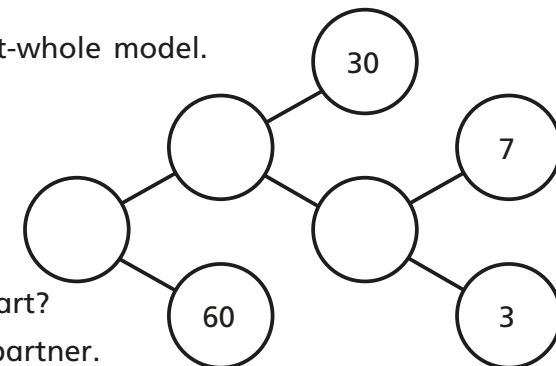
Annie



Teddy

Show that they have made the same number.

6 Complete the part-whole model.



Where did you start?
Compare with a partner.