

1 Match the shape to its name.



circle

hexagon

pentagon

square

triangle

rectangle

2 Match the shape to its name.



cuboid

triangular prism

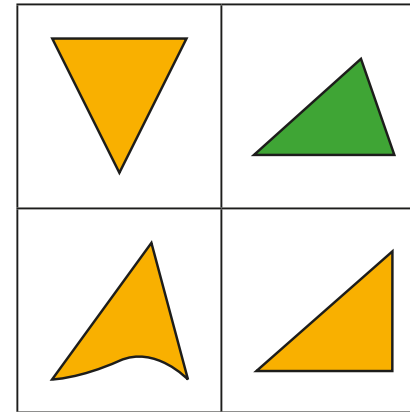
cube

pyramid

sphere

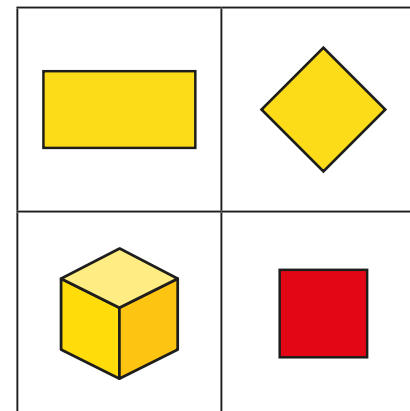
cylinder

3 Which shape is the odd one out?



Why did you choose this shape?

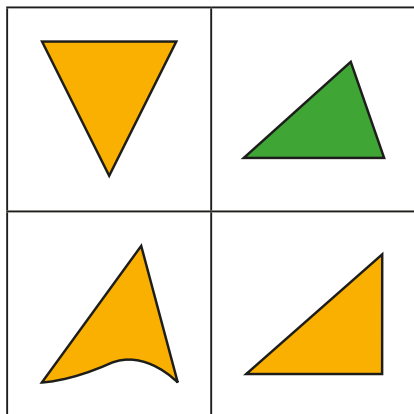
4 Which shape is the odd one out?



Compare answers with a partner.

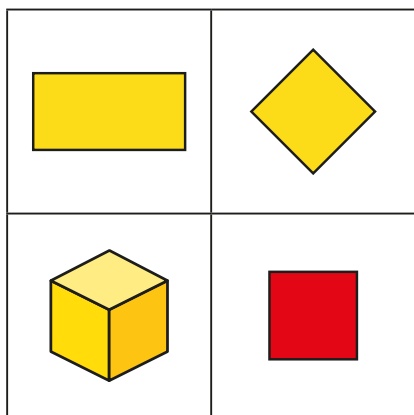


3 Which shape is the odd one out?



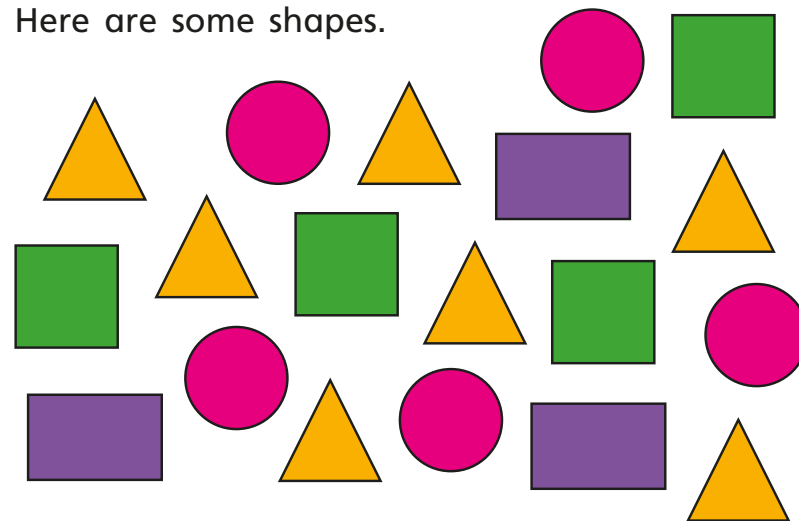
Why did you choose this shape?

4 Which shape is the odd one out?



Compare answers with a partner.

5 Here are some shapes.



Complete a tally chart to show the number of each shape.

Work with a partner.

Find shapes around your classroom and complete your own tally chart.