


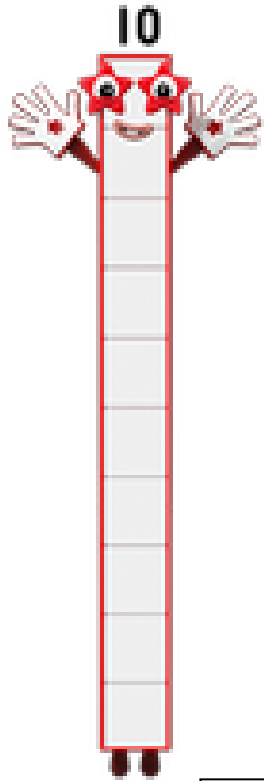




# Maths Ambassadors' Reception February Challenge



*How many different ways can you join two Numberblocks to make 10?*



Numberblocks  
1 and 9

Numberblocks  
\_\_ and \_\_

Numberblocks  
\_\_ and \_\_

Numberblocks  
\_\_ and \_\_

Numberblocks  
\_\_ and \_\_



Which  
Numberblocks?



Name: \_\_\_\_\_ Class: \_\_\_\_\_

*Return completed homework by 28th February 2020 to be in with a chance of winning this month's prize.*

