

Monday 2)

$1 + 1 = ?$

$1 + 2 = ?$

$2 + 1 = ?$

$2 + 2 = ?$

$3 + 1 = ?$

$3 + 2 = ?$

$4 + 1 = ?$

$4 + 2 = ?$

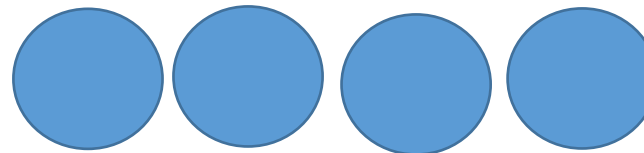

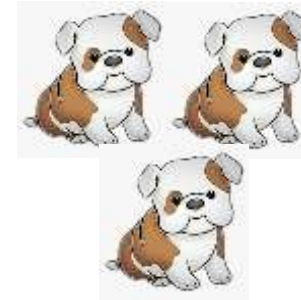
$5 + 1 = ?$

$5 + 2 = ?$

Monday 4)

$$3+4=7$$

$$4+3=7$$



Tuesday 2)

$1 + 3 = ?$

$1 + 4 = ?$

$2 + 3 = ?$

$2 + 4 = ?$

$3 + 3 = ?$

$3 + 4 = ?$

$4 + 3 = ?$

$4 + 4 = ?$

$5 + 3 = ?$

$5 + 4 = ?$

0

twinkl.co.uk

1

twinkl.co.uk

2

twinkl.co.uk

3

twinkl.co.uk

4

twinkl.co.uk

5

twinkl.co.uk

6

twinkl.co.uk

7

twinkl.co.uk

8

twinkl.co.uk

9

twinkl.co.uk

10

twinkl.co.uk

11

twinkl.co.uk

12

twinkl.co.uk

13

twinkl.co.uk

14

twinkl.co.uk

15

twinkl.co.uk

16

[twinkl.co.uk](https://www.twinkl.co.uk)

17

[twinkl.co.uk](https://www.twinkl.co.uk)

18

[twinkl.co.uk](https://www.twinkl.co.uk)

19

[twinkl.co.uk](https://www.twinkl.co.uk)





20

[twinkl.co.uk](https://www.twinkl.co.uk)

Tuesday 4)

$$2+4=6$$

$$4+2=6$$



Wednesday 2)

$1 + 4 = ?$

$1 + 5 = ?$

$2 + 4 = ?$

$2 + 5 = ?$

$3 + 4 = ?$

$3 + 5 = ?$

$4 + 4 = ?$

$4 + 5 = ?$



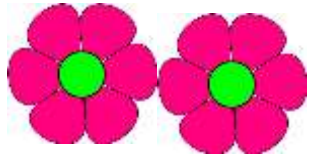
$5 + 4 = ?$

$5 + 5 = ?$

Wednesday 4)

$$7+2=9$$

$$2+7=9$$



Thursday 2)

$$2 + 2 = ?$$

$$3 + 3 = ?$$

$$3 + 5 = ?$$

$$1 + 4 = ?$$

$$3 + 1 = ?$$

$$5 + 1 = ?$$

$$2 + 3 = ?$$

$$3 + 4 = ?$$



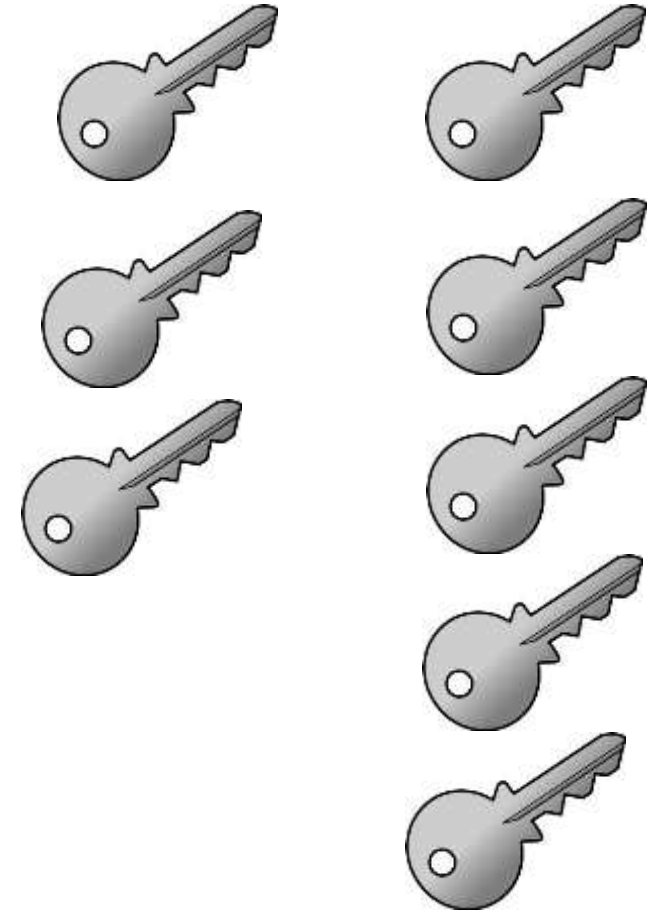
$$4 + 2 = ?$$

$$4 + 5 = ?$$

Thursday 4)

$$5+3=8$$

$$3+5=8$$



Sweet Shop Estimation



Estimate _____

Answer _____



Estimate _____

Answer _____



Estimate _____

Answer _____



Estimate _____

Answer _____



Estimate _____

Answer _____



Estimate _____

Answer _____

Friday 2)

$4 + 4 = ?$

$5 + 5 = ?$

$2 + 1 = ?$

$4 + 3 = ?$

$5 + 4 = ?$

$1 + 3 = ?$


$3 + 2 = ?$

$4 + 1 = ?$

$1 + 5 = ?$

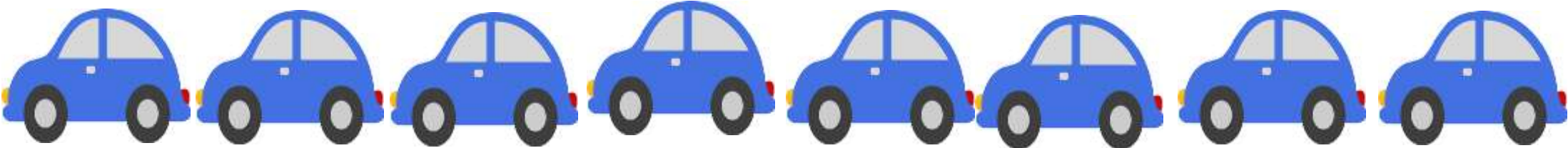


$5 + 2 = ?$

Friday 4)



$$8+2=10$$

$$2+8=10$$



Test 1 Number Facts to 10

You have 10 minutes to beat your own score!

Name: _____

Class: _____

Date: _____

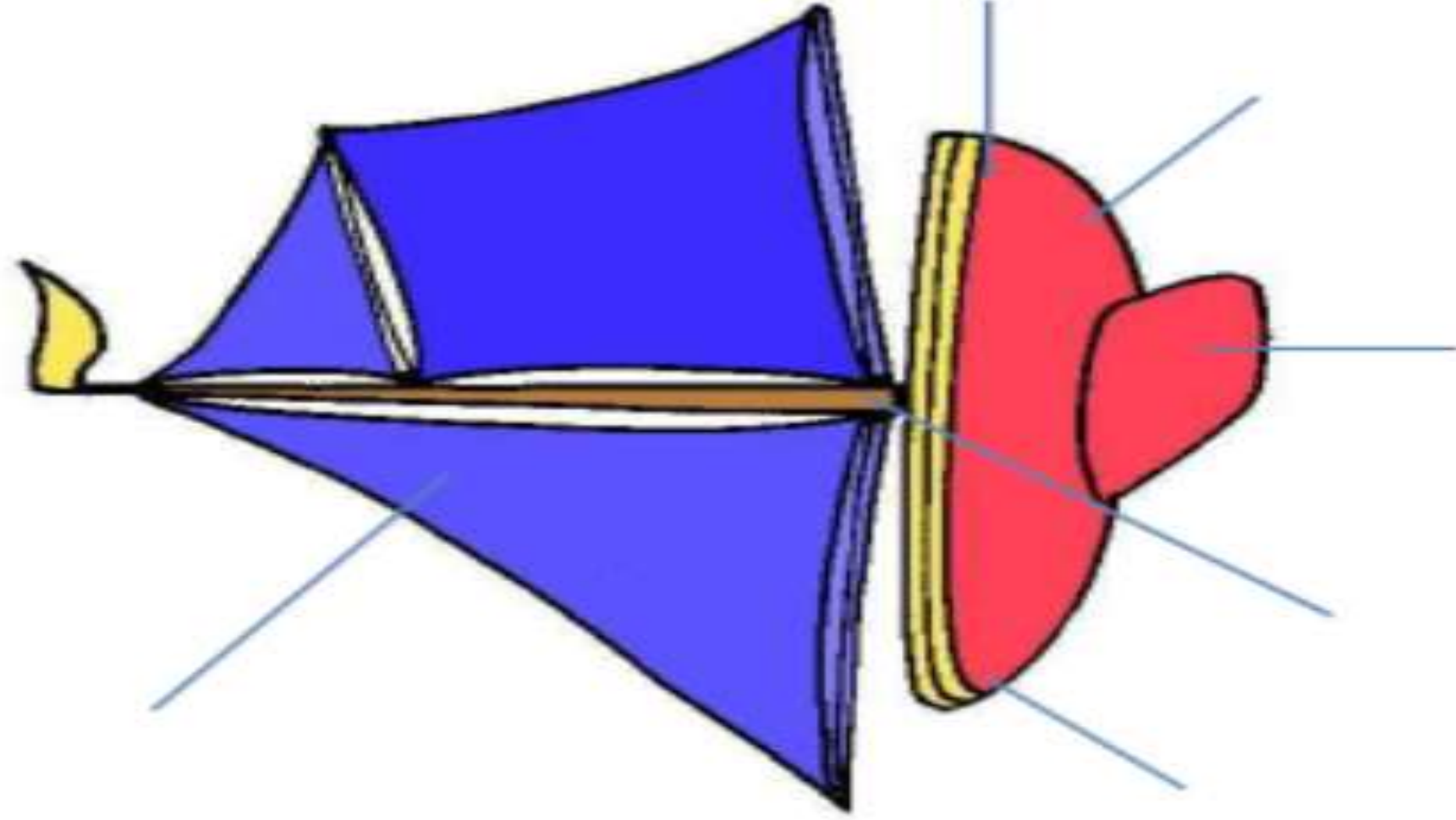
1 + 1 = ?		1 + 2 = ?		1 + 3 = ?		1 + 4 = ?		1 + 5 = ?	
2 + 1 = ?		2 + 2 = ?		2 + 3 = ?		2 + 4 = ?		2 + 5 = ?	
3 + 1 = ?		3 + 2 = ?		3 + 3 = ?		3 + 4 = ?		3 + 5 = ?	
4 + 1 = ?		4 + 2 = ?		4 + 3 = ?		4 + 4 = ?		4 + 5 = ?	
5 + 1 = ?		5 + 2 = ?		5 + 3 = ?		5 + 4 = ?		5 + 5 = ?	

1 + 1 = ?		2 + 2 = ?		3 + 3 = ?		4 + 4 = ?		5 + 5 = ?	
2 + 4 = ?		3 + 5 = ?		1 + 4 = ?		2 + 1 = ?		4 + 3 = ?	
1 + 2 = ?		3 + 1 = ?		5 + 1 = ?		5 + 4 = ?		1 + 3 = ?	
2 + 5 = ?		2 + 3 = ?		3 + 4 = ?		3 + 2 = ?		4 + 1 = ?	
5 + 3 = ?		4 + 2 = ?		4 + 5 = ?		1 + 5 = ?		5 + 2 = ?	

Grand Total:	Red: (0 – 20)		Yellow: (21 – 40)		Green: (41 – 50)	
---------------------	------------------	--	----------------------	--	---------------------	--



- 1. Czech Republic
- 2. Austria
- 3. Slovakia
- 4. Hungary
- 5. Slovenia
- 6. Croatia
- 7. Bosnia and Herzegovina
- 8. Serbia
- 9. Montenegro
- 10. Albania
- 11. Macedonia
- 12. Moldova
- 13. Kosovo



Mast

Sail

Hull

Bow

Stem

Keel

Object	Float	Sink

