

As recommended by [gov.uk](https://www.gov.uk)

Home Learning Pack Year 2

Week 3

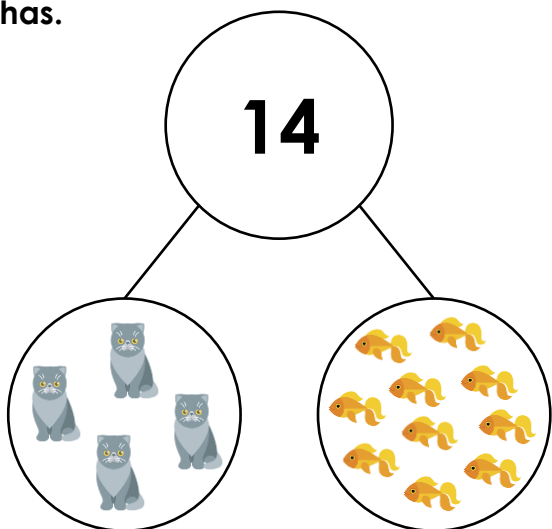
04/05/2020



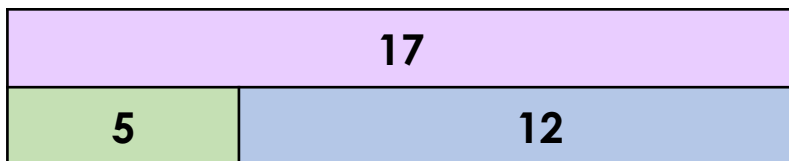
Take a picture while you work through this booklet and tweet us [@ClassroomSecLtd](https://twitter.com/ClassroomSecLtd) using the hashtags [#CSKids](https://twitter.com/CSKids) and [#HomeLearningHero](https://twitter.com/HomeLearningHero) to be in with a chance of winning a month's subscription to [classroomsecrets.co.uk](https://www.classroomsecrets.co.uk).

Monday – Fact Families

1. Evie has 14 pets. Using +, – and =, write the 4 calculations that show how many pets Evie has.



2. Use the bar model to complete the calculations below.



$$\boxed{12} + \boxed{} = \boxed{17}$$

$$\boxed{5} + \boxed{} = \boxed{17}$$

$$\boxed{} - \boxed{5} = \boxed{}$$

$$\boxed{} - \boxed{12} = \boxed{}$$

3. Choose two digit cards to complete the fact family. Complete the part-whole model to match.

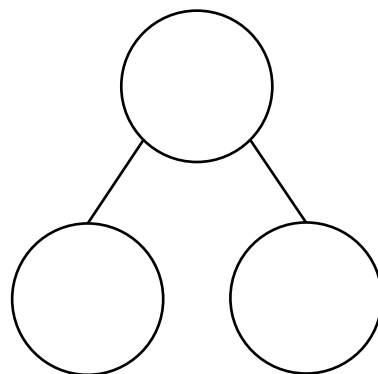


$$\boxed{} + \boxed{} = 16$$

$$\boxed{} + \boxed{} = 16$$

$$16 - \boxed{} = \boxed{}$$

$$16 - \boxed{} = \boxed{}$$



Monday – Developing Vocabulary About the UK

Complete the words. What other things can you label in the picture?



Write a sentence or more about the picture. Use your completed words to help you.

Tuesday – Compare Number Sentences

Arrange the loop cards so that each end is matched with a calculation of equal value.

$3 + 6$	$11 - 4$
---------	----------

$9 + 8$	$5 - 4$
---------	---------

$7 - 3$	$4 + 5$
---------	---------

$10 + 7$	$15 - 2$
----------	----------

$13 + 2$	$6 - 2$
----------	---------

$6 - 5$	$4 + 4$
---------	---------

$10 - 3$	$3 + 5$
----------	---------

$16 - 3$	$12 + 3$
----------	----------

--	--

--	--

--	--

--	--

Tuesday – Writing Challenge

Write a postcard to a friend or relative to tell them about your week in lockdown. Include a list of all the things you have been doing and remember to use commas.

Things you could include:

- What activities have you been doing?
- How is home school going?
- What do you miss at the moment?
- What are you enjoying at the moment?

Don't forget to use capital letters and full stops!





Sentence starters

This week I have....

I really enjoyed....

I'm missing...

I have been learning...

Wednesday – Related Facts

1. Connect each calculation to the correct answer. Match each calculation to its related fact.

$3 + 2 =$

4

$30 + 20 =$

60

$8 - 2 =$

8

$90 - 50 =$

50

$9 - 5 =$

6

$80 - 20 =$

40

$7 + 1 =$

5

$70 + 10 =$

80

2. Complete A. Use your answers to complete B.

A. $3 + 4 =$

B. $30 + 40 =$

$8 - 5 =$

$80 - 50 =$

$6 + 2 =$

$60 + 20 =$

$9 - 5 =$

$90 - 50 =$

$6 - 4 =$

$60 - 40 =$

3. Wahid buys two sweets. What related fact will he need to work out how much the sweets cost altogether?

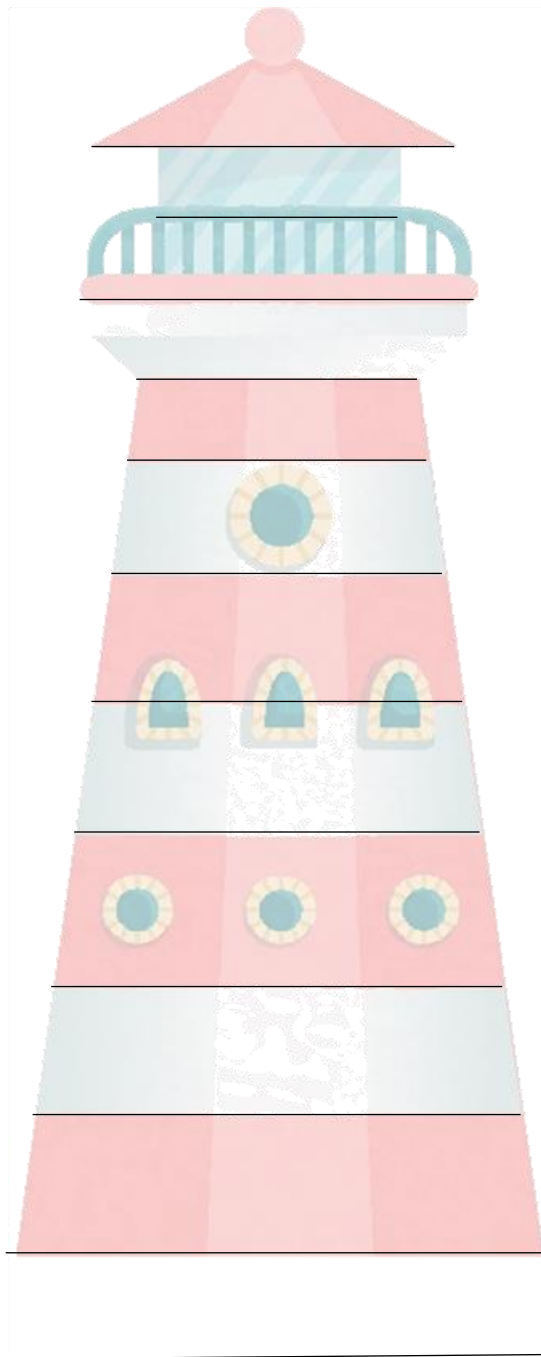


$\square + \square = \square$

How much would they cost? Convince me.

Wednesday – Writing Challenge

Write a shape poem about the lighthouse.
Try and include lots of long ladder letters (l i t u j y).



Word bank

lighthouse

lamp

lit

tall

tower

seagull

safe

storm

rocks

boat

stripe

paddle

Thursday – Add 2-Digit and 1-Digit Numbers

1. Use the place value counters and the column method below to calculate $27 + 4$.

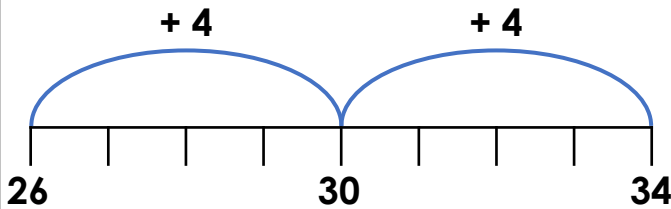
	2	7
+		4
<hr/>		
<hr/>		

2. What number does Ahmed finish with?



I start at 43 and then add 6.

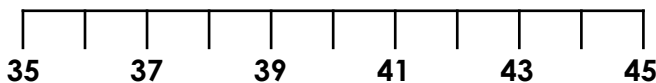
3. Joseph thinks $26 + 8 = 34$.



Is he correct?

4. Use the number line below to solve the calculation.

$$35 + 7 = \square$$



5. Use the clues to solve the calculation. Find 3 possibilities.



I am adding a 1-digit number. It is greater than 1 but less than 5.

6. Kyle completes a calculation using place value counters.

$$37 + 7 = 44$$

Is he correct? Explain how you know.

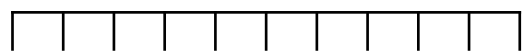
7. Put an 'X' next to the incorrect calculation.

A. $39 + 6 = 44$

B. $9 + 17 = 26$

C. $5 + 29 = 34$

Use the number line to find the correct answer.



Thursday – Writing Challenge

Think of different questions you could ask about the picture.




Question words

Who What

Why Where

When How



Word bank

beach

sea

sandcastle

lighthouse

café

picnic

sunny

swim

beach hut

boat

seagull

paddle

Friday – Reading Comprehension
Coastal Holidays

Read the holiday advertisement on the next page and answer the questions.

1. What is a coast?

2. Which coastal holiday would you most like to go on?

3. What does UK stand for?

4. Which holiday is the cheapest deal?

5. Have you ever been to the coast before? If so, what was it like? If not, what do you think it would be like?

6. Why do you think the brochure has pictures?

7. What is the slogan for Coastal Holidays?

8. Why do you think the writer has used short sentences in small boxes instead of writing lots of text?

COASTAL HOLIDAYS

It's time for a holiday on the coast, where the land meets the sea.

On the island of the United Kingdom, we are surrounded by the sea. We are spoilt for choice for places to visit on the coast for a much needed holiday. COASTAL HOLIDAYS have lots of fantastic deals this year. Keep reading to find some ideas for your trip...

BLACKPOOL

from £60 per person

Blackpool is one of the best loved seaside towns in the UK. Come and build sandcastles on the beach and paddle in the sea. Stay at The Pool Inn or Sandy Hotel and relax in our comfy rooms.

Email us at:
blackpool@coastalholidays.co.uk for more information.



CORNWALL

from £67 per person

Come to Cornwall for an adventure! Look at the sea from the cliffs or the lighthouse. Stop at our Coastal Cottages for a cosy, family holiday. You won't want to go back home again!

Email us at:
cornwall@coastalholidays.co.uk for more information.



Call us on...

0800 1234 5678

and book your COASTAL HOLIDAY today!