


Year 2 Maths Activity Mat

Section 1

Use the correct sign < or > to make these true:

16		30
19		17

Section 2

What are the missing numbers? 

12	11	10		8		6		4
----	----	----	--	---	--	---	--	---

Section 3

A lorry has 10 wheels. How many wheels are there on 2 lorries?



Section 4

Which number is the odd one out? How do you know?

20 30 15
50 40 10




.....

Section 6

Gill is going to see a film. It starts in half an hour. It is now 10 o'clock. What time will the film start?

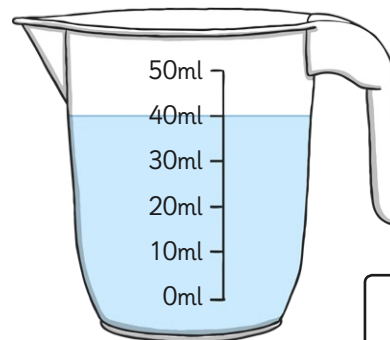
Section 5

There are 4 cakes. Two of them are eaten. What fraction of cakes are left?



Section 7

How much juice is in the jug?



Section 8

Are these answers right? Can you correct any which are not correct?

$$31 + 10 = 30$$

$$17 - 4 = 16$$

$$13 + 5 = 18$$

Year 2 Maths Activity Mat: 2

Answers

Section 1

Use the correct sign
< or > to make these true:

16	<	30
19	>	17

Section 2

What are the missing numbers? **???**

12	11	10	9	8	7	6	5	4
----	----	----	---	---	---	---	---	---

Section 3

A lorry has 10 wheels. How many wheels are there on 2 lorries?



20

Section 4

Which number is the odd one out? How do you know?

20 30 15
50 40 10



15 because the other numbers end with a 0.

Section 6

Gill is going to see a film. It starts in half an hour. It is now 10 o'clock. What time will the film start?

10:30 or half past 10

Section 5

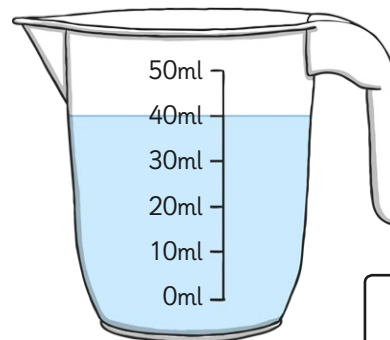
There are 4 cakes. Two of them are eaten. What fraction of cakes are left?



$\frac{1}{2}$

Section 7

How much juice is in the jug?



40ml

Section 8

Are these answers right? Can you correct any which are not correct?

$31 + 10 =$ ~~31~~ **41**

$17 - 4 =$ ~~16~~ **13**

$13 + 5 = 18$ ✓

Year 2 Maths Activity Mat

2

Section 1

Use the correct sign
< or > to make these true:

26		44
71		17

Section 2

What are the missing numbers? **???**

90		70	60			30	
----	--	----	----	--	--	----	--

Section 3

A baker bakes 18 cakes. He sells half of them. How many are left?



Section 4

Which number is the odd one out? Explain how you know.

13 17 11
62 91 53




.....

Section 6

Hannah's train leaves at 11.30am. It is now 11.15am. How long does Hannah have to wait for the train to leave?

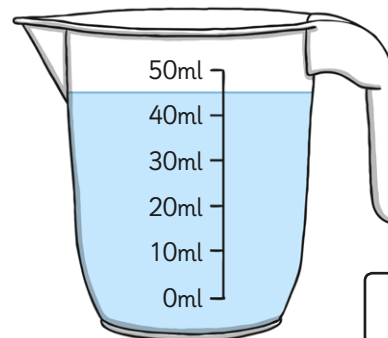
Section 5

Kim eats one cake. What fraction of the amount has she eaten?



Section 7

How much juice is in the jug?



Section 8

Are these correct? Can you correct any which are not correct?

$$112 - 10 = 100$$

$$200 + 35 = 230$$

$$73 + 14 = 87$$

Year 2 Maths Activity Mat: 2

Answers

Section 1

Use the correct sign
< or > to make these true:

26	<	44
71	>	17

Section 2

What are the missing numbers? **???**

90	80	70	60	50	40	30	20
----	-----------	----	----	-----------	-----------	----	----

Section 3

A baker bakes 18 cakes. He sells half of them. How many are left?



9

Section 4

Which number is the odd one out? Explain how you know.

13 17 11
62 91 53



62 because it is even.....

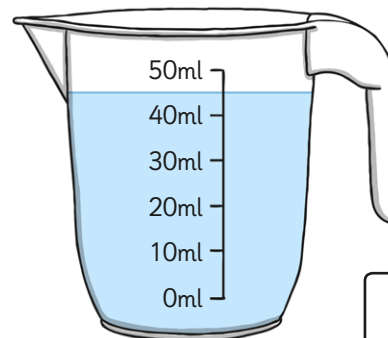
Section 6

Hannah's train leaves at 11.30am. It is now 11.15am. How long does Hannah have to wait for the train to leave?

15 minutes

Section 7

How much juice is in the jug?



45ml

Section 8

Are these correct? Can you correct any which are not correct?


$112 - 10 = 102$ ~~X~~

$200 + 35 = 235$ ~~X~~

$73 + 14 = 87$ ✓

Section 5

Kim eats one cake. What fraction of the amount has she eaten?



$\frac{1}{4}$


Year 2 Maths Activity Mat

Section 1

Use the correct sign < or > to make these true:

145		415
201		102


Section 2

What are the missing numbers? 

75		65	60			45	
----	--	----	----	--	--	----	--

Section 3

Zoe puts her zoo animals in twos. She has 14 pairs. How many animals are there altogether?



Section 4

Which number is the odd one out? Explain how you know.

107 204 113
 91 115



.....

Section 6

Fran has 1 hour and 15 minutes until her dance exam. It is now 10am. What time will the exam start?

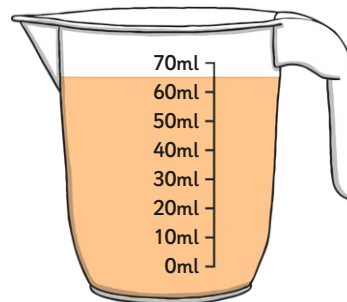
Section 5

Mia eats one cake. Her sister eats one cake. What fraction of the cakes are left?



Section 7

If a 40ml glass of a juice is poured out, how much will be left in the jug?



Section 8

Billy has 112 football cards. He has given 22 of them away. He thinks he should have 95 left. Is he correct? Explain how you know.



.....
.....

Year 2 Maths Activity Mat: 2


Answers

Section 1

Use the correct sign
< or > to make these true:

145	<	415
201	>	102


Section 2

What are the missing numbers? 

75	70	65	60	55	50	45	40
----	-----------	----	----	-----------	-----------	----	-----------

Section 3

Zoe puts her zoo animals in twos. She has 14 pairs. How many animals are there altogether?



28

Section 4

Which number is the odd one out? Explain how you know.

107 204 113
 91 115



204 because it is not odd.

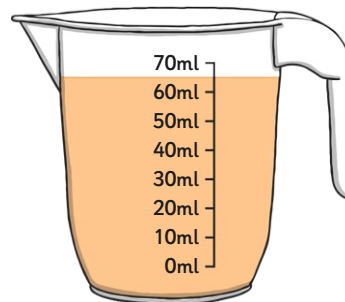
Section 6

Fran has 1 hour and 15 minutes until her dance exam. It is now 10am. What time will the exam start?

11.15 or quarter past 11

Section 7

If a 40ml glass of a juice is poured out, how much will be left in the jug?



25ml

Section 8

Billy has 112 football cards. He has given 22 of them away. He thinks he should have 95 left. Is he correct? Explain how you know.



No he is not correct.

112 - 22 = 90