

Counting in 50s



1 How many cards does each person have?

Filip	Eva	Mo	Aisha

--	--	--	--

Teddy has 8 packs of cards.
How many cards does Teddy have?

Teddy has cards.


2 Complete the number tracks.

200	250	300					550
-----	-----	-----	--	--	--	--	-----

650		750	800				
-----	--	-----	-----	--	--	--	--

	600	550		450			300
--	-----	-----	--	-----	--	--	-----

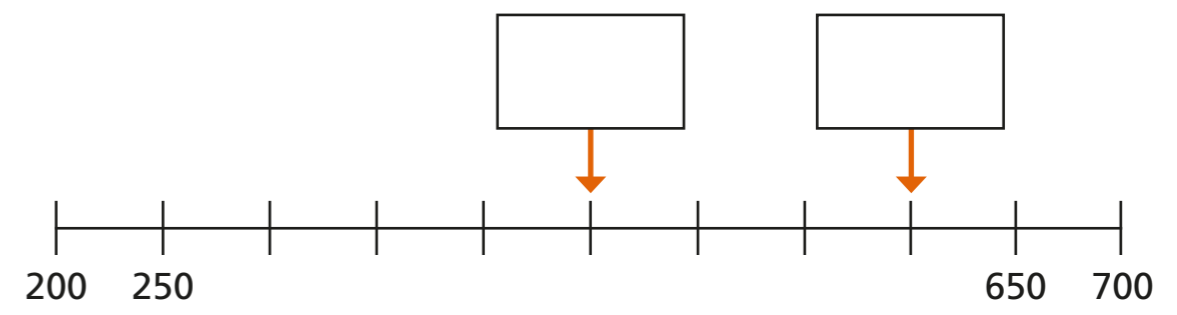
3 Rosie is counting up in 50s from 0 to 1,000



Circle all the numbers that Rosie will say.

505 750 75 350 240 800 950

4 What numbers are the arrows pointing to? Label the arrows.



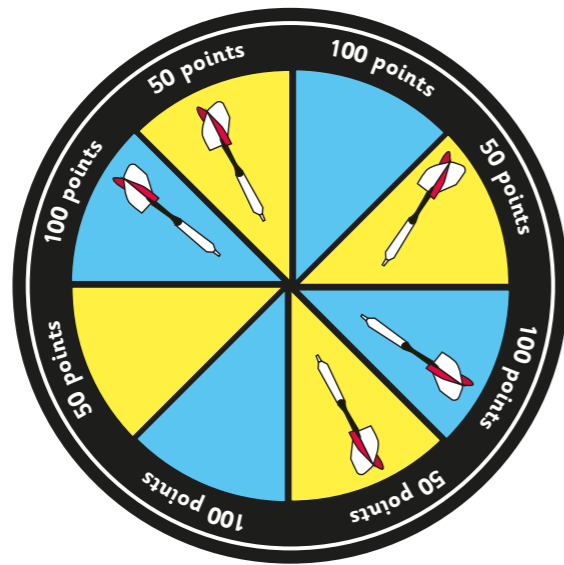
5 Is this true or false?
These scales will balance.



How do you know?

6 Whitney and Dexter are playing darts.

a) Whitney throws 5 darts.



How many points has Whitney scored?

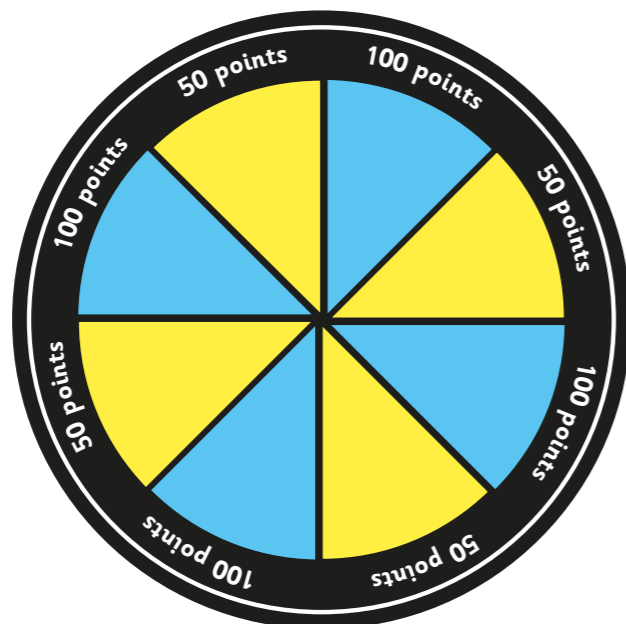
Whitney has scored points.

How did you work this out? Talk about it with a partner.


b) Dexter scores 450 points with 5 darts.

Where could his darts have landed?

Draw your answer on the dartboard.



c)



I don't think it is possible to score 450 with 6 darts.

Is Dexter correct?

Explain how you know.

7 How much money is there?

