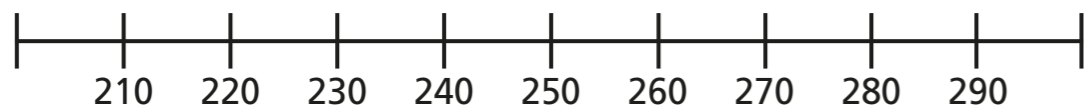


# Round to the nearest 100

- 1 Which multiples of 100 do the numbers sit between?  
Complete the number line.



- a) Circle the number 270 on the number line.

Which multiple of 100 is 270 closest to?

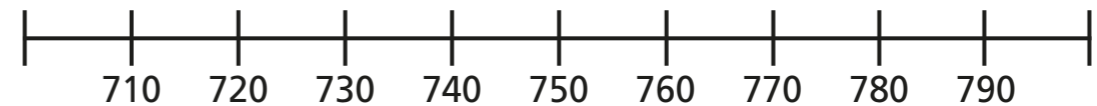
270 rounded to the nearest 100 is

- b) Circle the number 230 on the number line.

Which multiple of 100 is 230 closest to?

230 rounded to the nearest 100 is

- 2 Which multiples of 100 do the numbers sit between?  
Complete the number line.



- a) Draw an arrow and label 713 on the number line.

- b) Which multiple of 100 is 713 closest to?

713 rounded to the nearest 100 is

- c) Round each number to the nearest 100

725

701

749

779

751

750

- 3 Round each number to the nearest 100

a) 401

d) 190

g) 250

b) 789

e) 89

h) 44

c) 330

f) 708

i) 99





4 Round each number to the nearest 100

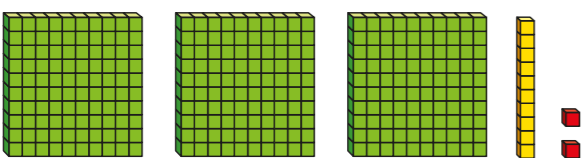
a) 

b) 712

c) 

H	T	O
		

d) XXIX

e) 

f) CXVIII

5 Circle the numbers that round to 300 to the nearest 100

359      279      271      341      350      250

6 Circle the numbers that round to 200 to the nearest 100

150      207      196      249      250      190

7 Complete the table.


Rounded to	624	371	289	750	38
the nearest 10					
the nearest 100					

8 There are 400 children in a school, to the nearest 100

What is the least number of children in the school?

What is the greatest number of children in the school?

9 Annie is thinking of a number.



My number rounds to 300 to the nearest 10 and to the nearest 100

What number could Annie be thinking of?

Is this the only answer? Talk about it with a partner.