


Compare 4-digit numbers

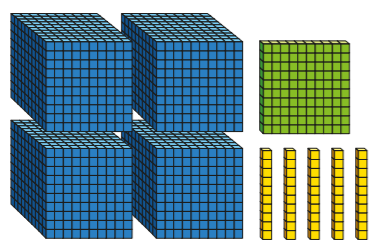
1 Who has the smallest amount of drink?

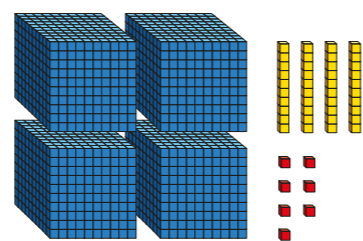


_____ has the smallest amount of drink.

Explain how you know.

2 Which is the greatest number? Tick your answer.





3 Which number is the greatest? Tick your answer

Th	H	T	O
1,000 1,000	100 100	10 10	1
1,000	100 100 100	10	

Th	H	T	O
1,000 1,000	100 100		1 1
1,000	100 100 100		1 1

4 Circle all the numbers greater than 4,500

7,000 3,960 4,499 985 4,526

5 Write $<$, $>$ or $=$ to compare the numbers.

a)

Th	H	T	O
1	4	9	0

 ○

Th	H	T	O
2	0	7	5

b)

Th	H	T	O
6	2	0	1

 ○

Th	H	T	O
6	2	3	5

c)

Th	H	T	O
7	0	0	5

 ○

Th	H	T	O
6	9	2	7



6 Write the missing phrase.

is less than

is greater than

- a) 4,720 _____ 4,635
- b) 5,100 _____ 800
- c) 3,195 _____ 3,591
- d) 2,000 _____ 7,999

7 Which is the most expensive car?

A  B 

Describe the steps you used to compare the car prices.

8 Write $<$, $>$ or $=$ to compare the numbers.

- a) 6,000 3,981
- b) 4,512 4,521
- c) 900 1,200
- d) 32 2,000
- e) £6,418 £6,419

9 Teddy and Scott have some digit cards.



Teddy makes the number 4,571

Scott says his number is greater than Teddy's.

Teddy says Scott's number must start with a 5

Is Teddy correct? Explain how you know.

10 What could the missing digits be?

- a) 4,523 is greater than 4,5_7
- b) 7,000 $<$ _,513
- c) 3,854 $>$ 3,85_
- d) 5,650 $>$ 4,_ 7_

11 Write all the possible missing digits.

- a) 2,778 is less than 2,7_4

- b) 6,000 $>$ _,259

