

Name : _____

Acute, Right, and Obtuse Angles in Real-Life

Sheet 1

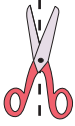
Cut out the object with different types of angles. Sort and glue them in the correct row.

Acute angles					
Right angles					
Obtuse angles					

Name : _____

Acute, Right, and Obtuse Angles in Real-Life

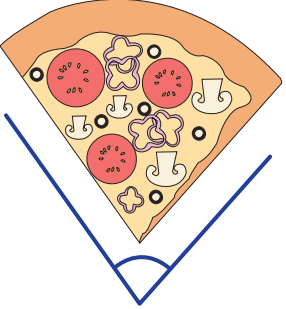

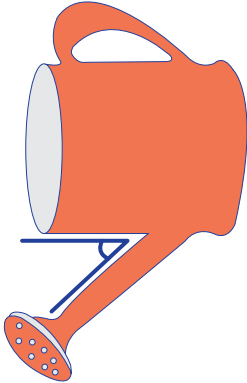
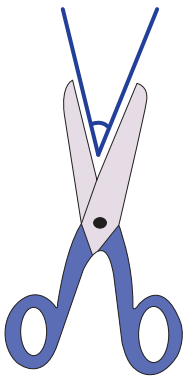
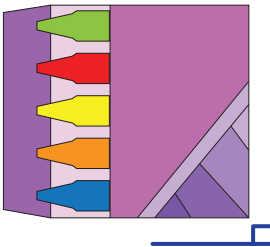
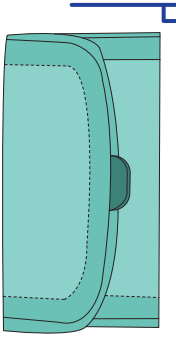
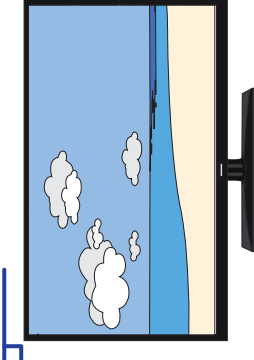
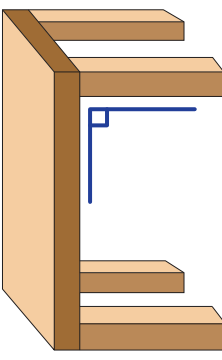
Cut out the object with different types of angles. Sort and glue them in the correct row.



Name : _____

Acute, Right, and Obtuse Angles in Real-Life

Cut out the object with different types of angles. Sort and glue them in the correct row.

<p>Acute angles</p>				
<p>Right angles</p>				
<p>Obtuse angles</p>	