

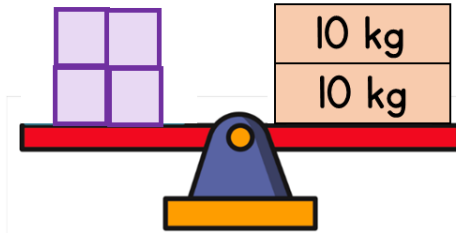
Problem Solving



Your turn



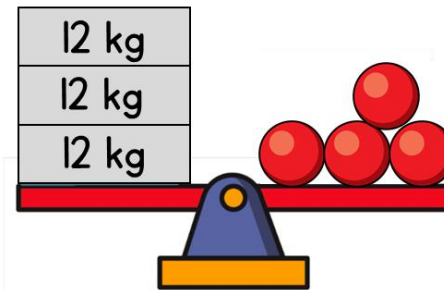
1 The scales are balanced.




Each  block has the same mass.

What is the mass of one of the blocks?

2 The scales are balanced.



Each  sphere has the same mass.

What is the mass of one of the spheres?

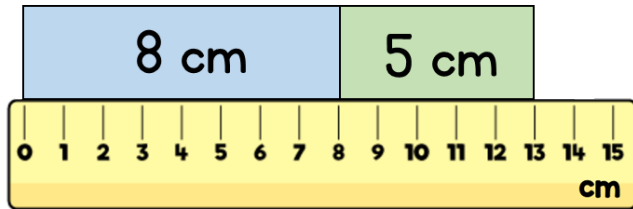
Problem Solving



Your turn




- 3 Two strips of paper are placed end to end.



How much longer is the blue strip than the green strip?

- 4 Here is a toy giraffe and a toy elephant.



How much shorter is the elephant than the giraffe?