



As recommended by [gov.uk](https://www.gov.uk)

Home Learning Pack Year 1

Week 9


22/06/2020



Take a picture while you work through this booklet and tweet us [@ClassroomSecLtd](https://twitter.com/ClassroomSecLtd) using the hashtags [#CSKids](https://twitter.com/CSKids) and [#HomeLearningHero](https://twitter.com/HomeLearningHero) to be in with a chance of winning a month's subscription to [classroomsecrets.co.uk](https://www.classroomsecrets.co.uk).

Monday – Counting to 100

1. Circle the number that comes next in the sequence.

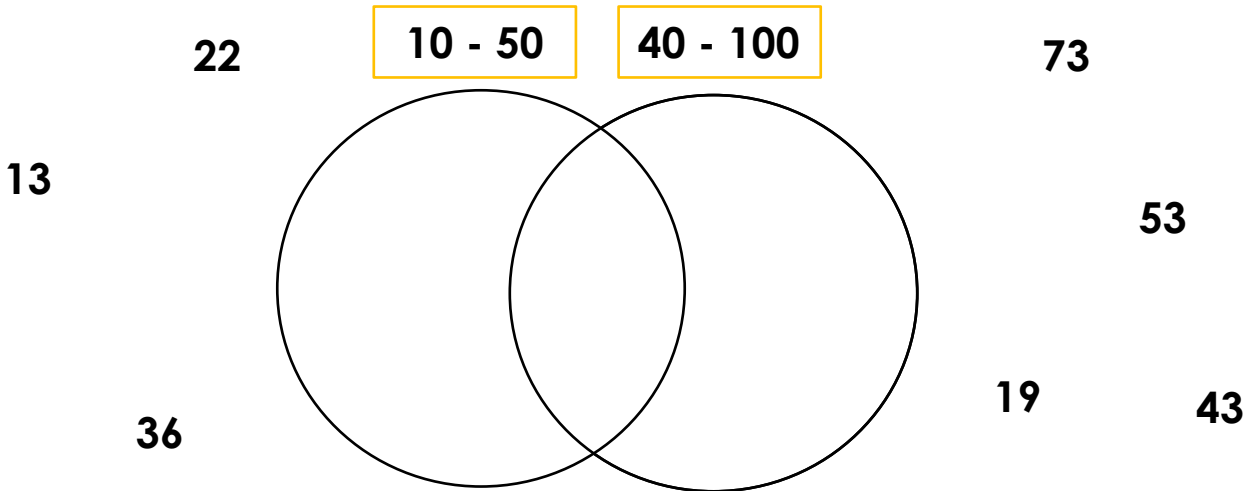


53


54

55

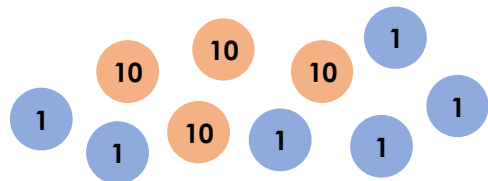
2. Write the numbers in the correct place in the Venn Diagram



3. Beth is counting place value counters. Do you agree with Beth? Explain why.



The counters make 64.



Monday – Comparing and Correcting –ing, –ed and –er

1. Choose the best words to complete the sentences below.

greeted

worker

playing

Erin is a very hard _____.

running

turned

singer

Mum enjoys _____ to keep fit.

2. Circle the word with the correct suffix in the sentences below.

Masood painting/painted/painter a big picture.

The dirty shirts are soaked/soaker/soaking in the sink.

Sophie is the best boxer/boxing/boxed in the world.

3. Choose a word to fill in the blank and finish the sentence below.

shouted


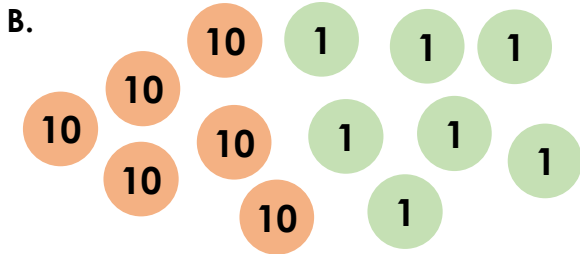


shouter

shouting

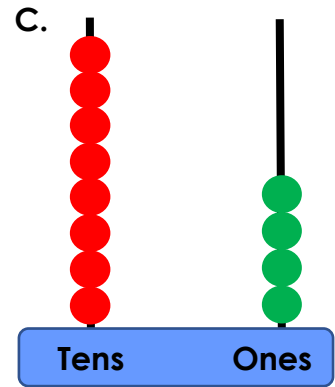
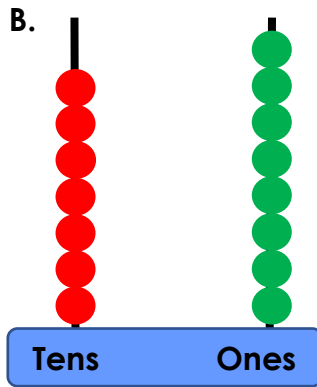
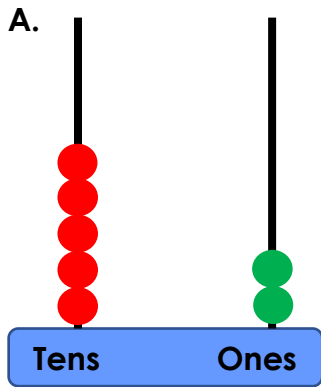
Rosie is _____ because _____

Tuesday – Partitioning Numbers

1. Circle all the images that have 6 tens.



2. Jack is representing numbers with beads. Match the images to the correct numbers.



78

84

52

3. Ava has made a number by putting counters on a place value chart. She has lost two counters. Which numbers could she have made? Write three possibilities.

Tens	Ones

Tuesday – Year 1 Removing ‘un-’

1. Write the words that will come out of the machine below.

unwell

unlock

unpack

uncover

remove
'un-'

2. Match each sentence with a sentence that has the opposite meaning.

A. The cat is unsafe.

B. The cat is afraid.

C. The cat is unafraid.

D. The cat is clean.

E. The cat is safe.

F. The cat is unclean.

3. Rewrite the sentences so they have the opposite meaning. You will need to remove ‘un-’ from the underlined words.

The kitchen was very untidy and

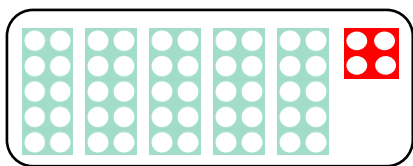
the cooker was unclean. This

made it unsafe to cook a meal.

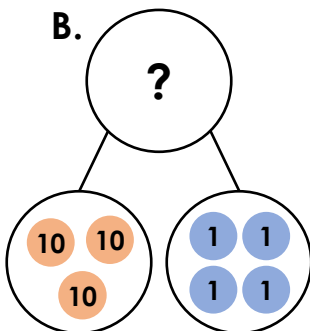
Wednesday – Comparing Numbers 1

1. Match each representation to a statement.

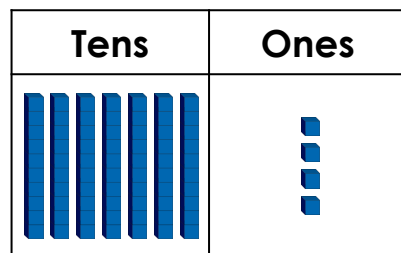
A.



B.



C.

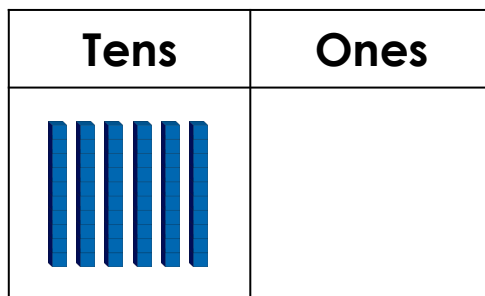
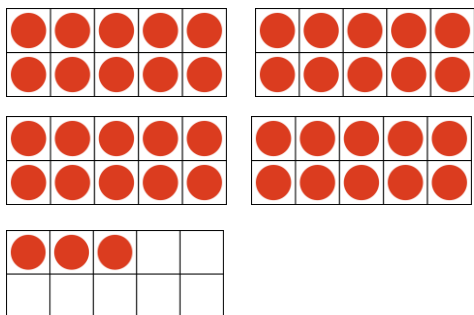


more than 70 but
less than 75

equal to 54

< 45

2. Choose either <, > or = to complete the sentence below.

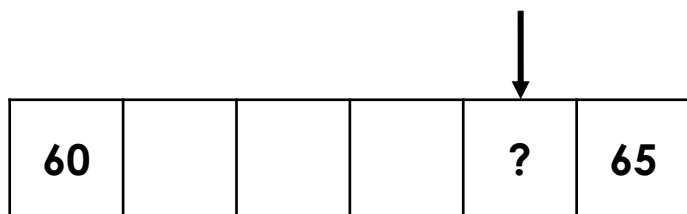


43

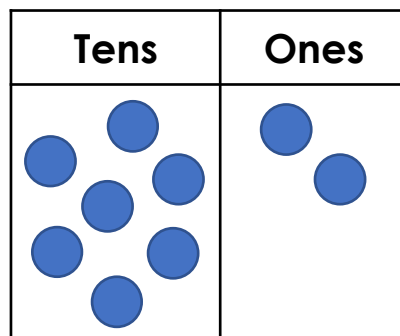


60

3. True or false? Explain how you know.




>



Read this story starter.

Forest Sports Day



It was sports day in the forest. All the animals wanted to win. Ray Rabbit won the hopping race. Fee Fox won the running race. Bart Badger won the egg and spoon race. The last race was the sack race. All the animals wanted to win.

“Go!” shouted Harry Hedgehog.

“I will win!” said Ray.

“I will win!” said Fee.

“I will win!” said Bart.

Suddenly Bart tripped and fell over. He started to cry because he had hurt his knee. Ray and Fee both stopped and looked at poor Bart.

Now you write the rest of the story. You can use the words in the word bank to help you.

Word bank

cheered

help

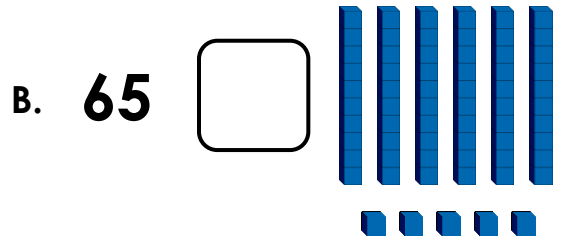
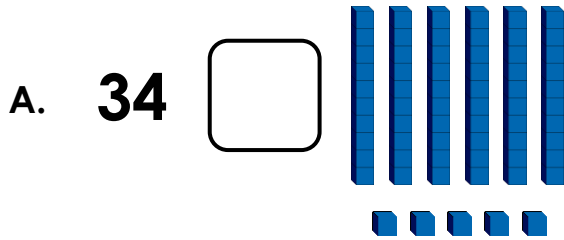
kind

friends

hooray

Thursday – Comparing Numbers 2

1. Use $<$, $>$ or $=$ to compare the numbers.



2. Circle the two correct statements.

45 $>$ 77

18 $>$ 69


43 $<$ 76

27 $=$ 61

77 $=$ 85

81 $<$ 90

3. Sarah and Emma go on a treasure hunt. Each gem they find is worth a different number of points.



Sarah thinks she that has won because she has more gems than Emma. Is she correct? Explain why.

Thursday – Adding ‘un–’

1. Add the prefix ‘un–’ to the words below to change their meaning.

finished

true

fold

load

2. Complete the sentences below by adding ‘un–’ to the word in brackets.

Sam has lost his keys so he can't _____ (lock) the door.

The library books were left _____ (read) on the shelf.

My house is dusty and _____ (clean).

This game is silly and _____ (fair).

3. Choose one of the words below.

safe

block

twist

Add ‘un–’ and write the new word in a sentence.

Friday – Reading Comprehension

The UEFA Champions League

Read the information on the next page and answer the questions.

1. Who organises the Champions League?

2. When was the Champions League formed?

3. Why do you think the logo is called the *starball*?

4. Why do you think the games are held in the biggest stadiums?

5. What do fans wave to support their team?

6. Who won the European Cup last year?

Friday – Reading Comprehension The UEFA Champions League

The Champions League is a football competition that takes place every year. It is organised by UEFA (you-ay-fuh).



The Champions League was formed in 1955. Its logo is called the 'starball'.

Champions League games are held in the biggest stadiums in Europe. Many people go to cheer on their favourite teams. Fans chant for their teams and wave their scarves to show support.



The team that wins the league gets a special trophy called The European Cup. The 2018 – 2019 champions were Liverpool. They have won the competition 6 times!

