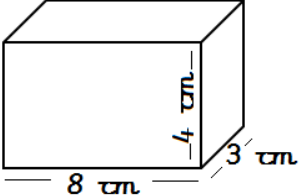
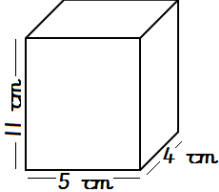
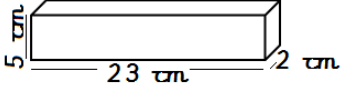
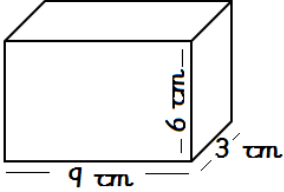
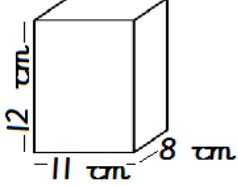


# Year Five Securing Skills Sheet 1



Task:	Monday	Tuesday	Wednesday	Thursday	Friday
Write in words:	96,145	104,278	329,012	35,090	207,733
Calculate the volume:					
$\times$ by 100	2751	198.2	35.7	8.05	4280
Find the perimeter:	A regular hexagon has sides that are 13cm long. What is the perimeter?	A regular octagon has sides that are 19cm long. What is the perimeter?	A regular pentagon has sides that are 24cm long. What is the perimeter?	A regular heptagon has sides that are 15cm long. What is the perimeter?	A regular hexagon has sides that are 17cm long. What is the perimeter?

Write the difference between these numbers	-7 and 5	-12 and 3	-24 and 32	-17 and 19	-43 and 43
Calculate	$\begin{array}{r} \xrightarrow{\quad} \\ 138 + \square = 294 \\ - \\ \square + \square = 161 \\ \hline 66 \quad 67 \end{array}$	$\begin{array}{r} \xrightarrow{\quad} \\ 257 + \square = 449 \\ - \\ \square + \square = 202 \\ \hline 134 \quad 113 \end{array}$	$\begin{array}{r} \xrightarrow{\quad} \\ 176 + \square = 523 \\ - \\ \square + \square = 212 \\ \hline 128 \quad 183 \end{array}$	$\begin{array}{r} \xrightarrow{\quad} \\ 309 + \square = 585 \\ - \\ \square + \square = 263 \\ \hline 134 \quad 188 \end{array}$	$\begin{array}{r} \xrightarrow{\quad} \\ 231 + \square = 485 \\ - \\ \square + \square = 252 \\ \hline 146 \quad 87 \end{array}$
Convert to l	3000ml	4500ml	1200ml	700ml	10500ml
Convert these roman numerals	CXXVI	DCCV	MCCX	LXXIV	CDLXXXI

