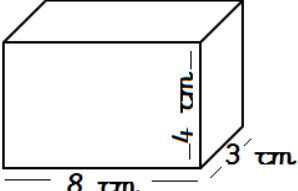
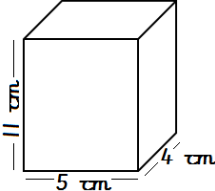
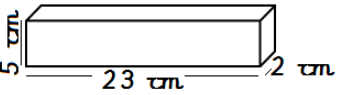
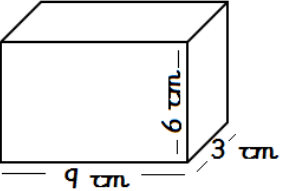
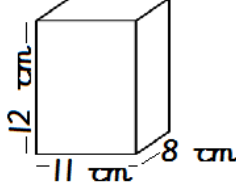


Year Five Securing Skills Sheet | *Answers*



Task:	Monday	Tuesday	Wednesday	Thursday	Friday
Write in words:	96,145 <i>Ninety six thousand one hundred and forty five</i>	104,278 <i>One hundred and four thousand two hundred and seventy eight</i>	329,012 <i>Three hundred and twenty nine thousand and twelve</i>	35,090 <i>Thirty five thousand and ninety</i>	207,733 <i>Two hundred and seven thousand seven hundred and thirty three</i>
Calculate the volume:	 <i>96cm³</i>	 <i>220cm³</i>	 <i>230cm³</i>	 <i>162cm³</i>	 <i>1056cm³</i>
\times by 100	2751 <i>275100</i>	198.2 <i>19820</i>	35.7 <i>3570</i>	8.05 <i>805</i>	4280 <i>428000</i>
Find the perimeter:	A regular hexagon has sides that are 13cm long. What is the perimeter? <i>78cm</i>	A regular octagon has sides that are 19cm long. What is the perimeter? <i>152cm</i>	A regular pentagon has sides that are 24cm long. What is the perimeter? <i>120cm</i>	A regular heptagon has sides that are 15cm long. What is the perimeter? <i>105cm</i>	A regular hexagon has sides that are 17cm long. What is the perimeter? <i>102cm</i>

Write the difference between these numbers	-7 and 5 12	-12 and 3 15	-24 and 32 56	-17 and 19 36	-43 and 43 86
Calculate	$\begin{array}{r} 138 + \boxed{156} = 294 \\ - \\ \hline \boxed{72} + \boxed{89} = 161 \\ \hline 66 \quad 67 \end{array}$	$\begin{array}{r} 257 + \boxed{192} = 449 \\ - \\ \hline \boxed{123} + \boxed{79} = 202 \\ \hline 134 \quad 113 \end{array}$	$\begin{array}{r} 176 + \boxed{347} = 523 \\ - \\ \hline \boxed{48} + \boxed{164} = 212 \\ \hline 128 \quad 183 \end{array}$	$\begin{array}{r} 309 + \boxed{276} = 585 \\ - \\ \hline \boxed{175} + \boxed{88} = 263 \\ \hline 134 \quad 188 \end{array}$	$\begin{array}{r} 231 + \boxed{254} = 485 \\ - \\ \hline \boxed{85} + \boxed{167} = 252 \\ \hline 146 \quad 87 \end{array}$
Convert to l	3000ml 3l	4500ml 4.5l	1200ml 1.2l	700ml 0.7l	10500ml 10.5l
Convert these roman numerals	CXXVI 126	DCCV 705	MCCX 1210	LXXIV 74	CDLXXXI 481

