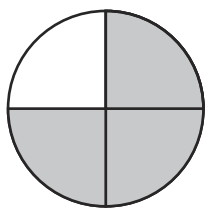


# Comparing Fractions with the Same Denominator

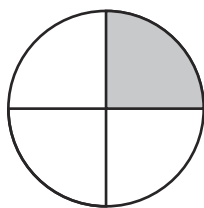
I can compare fractions with the same denominator.

Use the < or > signs to compare these pairs of fractions.

1.

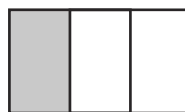


$\frac{3}{4}$



$\frac{1}{4}$

2.

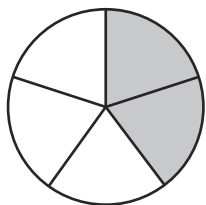


$\frac{1}{3}$

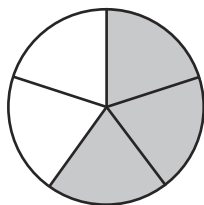


$\frac{2}{3}$

3.

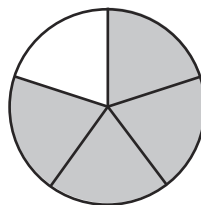


$\frac{2}{5}$

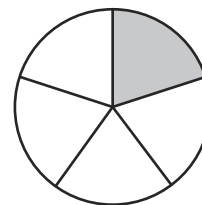


$\frac{3}{5}$

4.

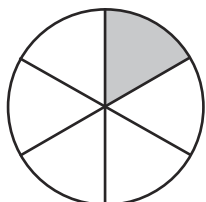


$\frac{4}{5}$

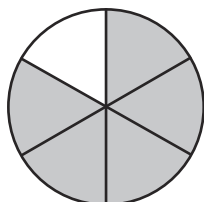


$\frac{1}{5}$

5.

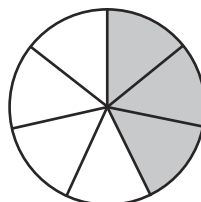


$\frac{1}{6}$

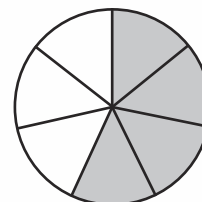



$\frac{5}{6}$

6.




$\frac{3}{7}$

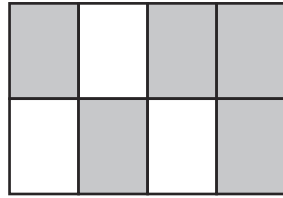


$\frac{4}{7}$

7.

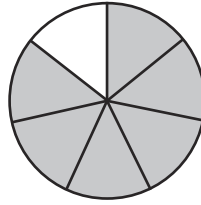


$\frac{3}{8}$

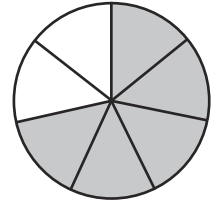


$\frac{5}{8}$

8.

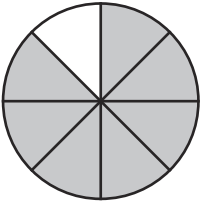


$\frac{6}{7}$

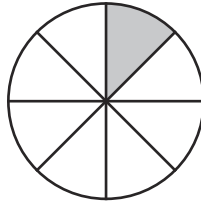


$\frac{5}{7}$

9.

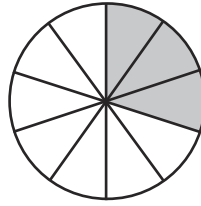


$\frac{7}{8}$

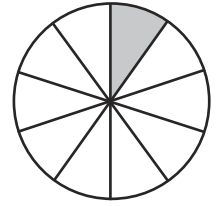


$\frac{1}{8}$

10.

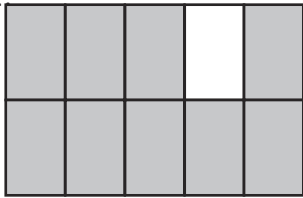


$\frac{3}{10}$

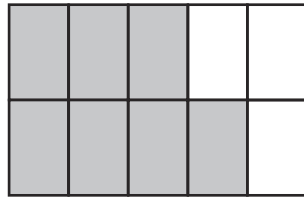


$\frac{1}{10}$

11.

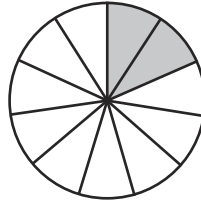


$\frac{9}{10}$

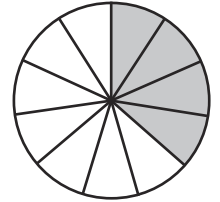


$\frac{7}{10}$

12.

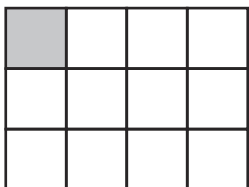


$\frac{2}{11}$

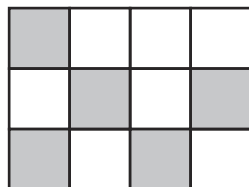


$\frac{4}{11}$

13.

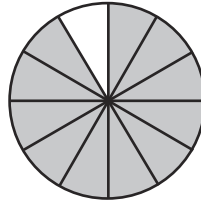


$\frac{1}{12}$

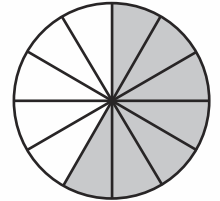


$\frac{5}{12}$

14.

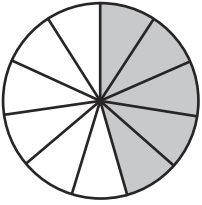


$\frac{11}{12}$

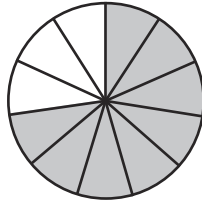



$\frac{7}{12}$

15.

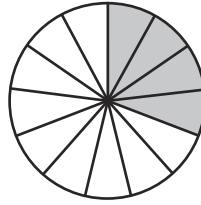


$$\frac{5}{11}$$

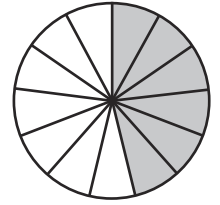


$$\frac{8}{11}$$

16.

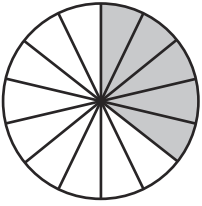


$$\frac{4}{13}$$

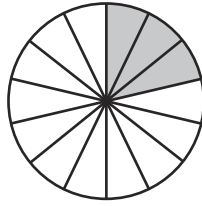



$$\frac{6}{13}$$

17.

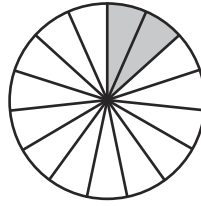


$$\frac{5}{14}$$

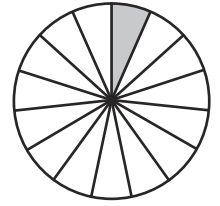


$$\frac{3}{14}$$

18.




$$\frac{2}{15}$$

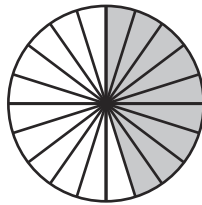



$$\frac{1}{15}$$

19.

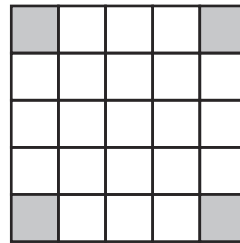


$$\frac{7}{20}$$




$$\frac{9}{20}$$

20.



$$\frac{4}{25}$$



$$\frac{6}{25}$$

# Comparing Fractions with the Same Denominator Answers

Use the < or > signs to compare these pairs of fractions.

Question	Answer
1	$\frac{3}{4} > \frac{1}{4}$
2	$\frac{1}{3} < \frac{2}{3}$
3	$\frac{2}{5} < \frac{3}{5}$
4	$\frac{4}{5} > \frac{1}{5}$
5	$\frac{1}{6} < \frac{5}{6}$
6	$\frac{3}{7} < \frac{4}{7}$
7	$\frac{3}{8} < \frac{5}{8}$
8	$\frac{6}{7} > \frac{5}{7}$
9	$\frac{7}{8} > \frac{1}{8}$
10	$\frac{3}{10} > \frac{1}{10}$
11	$\frac{9}{10} > \frac{7}{10}$
12	$\frac{2}{11} < \frac{4}{11}$
13	$\frac{1}{12} < \frac{5}{12}$
14	$\frac{11}{12} > \frac{7}{12}$
15	$\frac{5}{11} < \frac{8}{11}$
16	$\frac{4}{13} < \frac{6}{13}$
17	$\frac{5}{14} > \frac{3}{14}$
18	$\frac{2}{15} > \frac{1}{15}$
19	$\frac{7}{20} < \frac{9}{20}$
20	$\frac{4}{25} < \frac{6}{25}$