



# How many more to make 9?


## Sheet 2




$$7 + \square = 9$$




$$5 + \square = 9$$




$$6 + \square = 9$$




$$8 + \square = 9$$




$$3 + \square = 9$$



$$2 + \square = 9$$



$$4 + \square = 9$$



$$1 + \square = 9$$




$$9 + \square = 9$$


### Challenge


Sam's big brother is seven today! How many more years until he is 9? How many years until you are 9?


# Fish doubles


## Sheet 1


	+	2	=	
---	---	---	---	--

	+		=	
---	---	--	---	--

	+		=	
---	---	--	---	--


	+		=	
---	---	--	---	--


	+		=	
---	---	--	---	--

	+		=	
---	---	--	---	--

### Challenge

Draw two more different fish doubles.  
Write a number sentence for each.

	+		=	
---	---	--	---	--

	+		=	
---	---	--	---	--