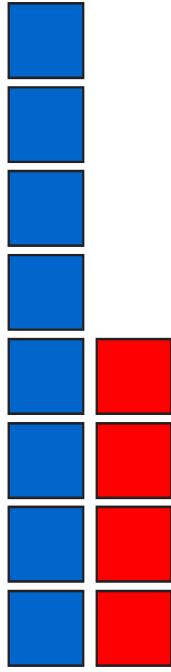



# How many more to make 8?

## Sheet 1


Draw the missing number of cubes and write the missing number in the number sentence below:




$$4 + \square = 8$$



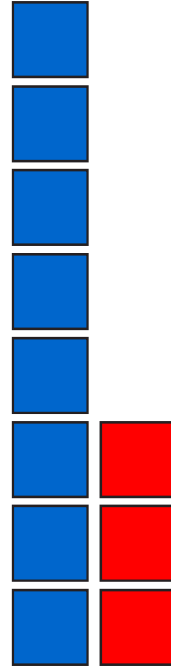
$$5 + \square = 8$$




$$2 + \square = 8$$



$$7 + \square = 8$$



$$3 + \square = 8$$



$$\square + 1 = 8$$