


Estimating and counting

Sheet 1


Look at the pictures in each box and make a quick estimation of how many objects are in each box. Write this down and then count the objects to check how close you were.

A




Estimate _____
Actual number _____

B




Estimate _____
Actual number _____

C




Estimate _____
Actual number _____

D




Estimate _____
Actual number _____

E



Estimate _____
Actual number _____

F



Estimate _____
Actual number _____

Challenge

Put the boxes in order, smallest to largest.

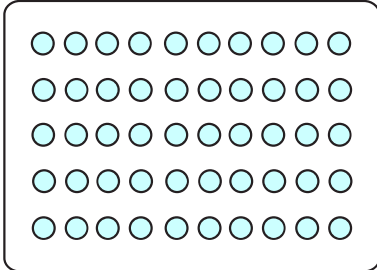
Estimating and counting

Sheet 2

Have a look at each box of dots.

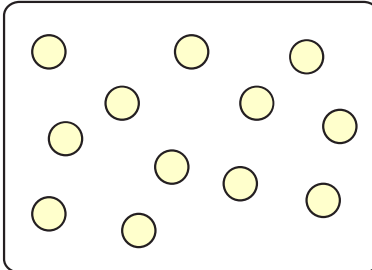
Roughly estimate how many dots you think are in each box and then order the boxes from the smallest number to the largest number.

A



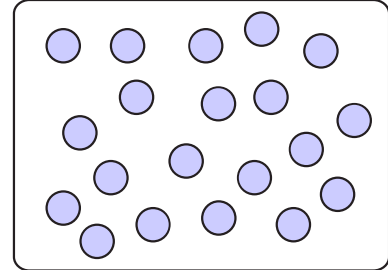
Estimate _____

B




Estimate _____

C




Estimate _____

D



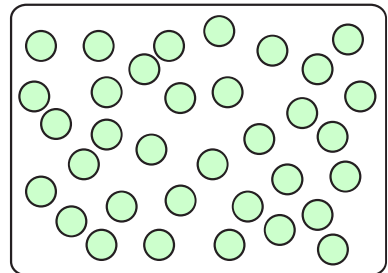
Estimate _____

E



Estimate _____

F



Estimate _____

Actual numbers

Box A

Box D

Box B

Box E

Box C

Box F

Order of the boxes:

smallest
number

largest
number

Challenge

Estimate how many shapes are in the border of this page.