

# Missing numbers

## Sheet 1

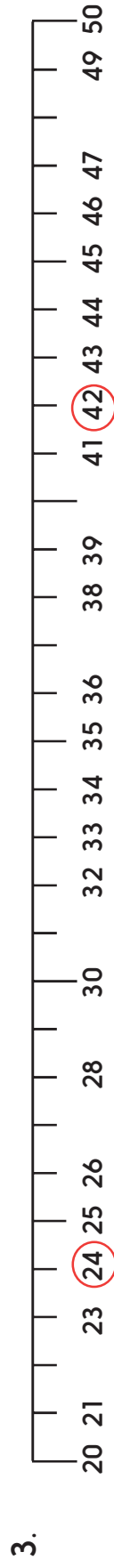
Fill in the missing numbers on the number line. Look at the two numbers circled.  
Which number is bigger?



Bigger number: \_\_\_\_\_



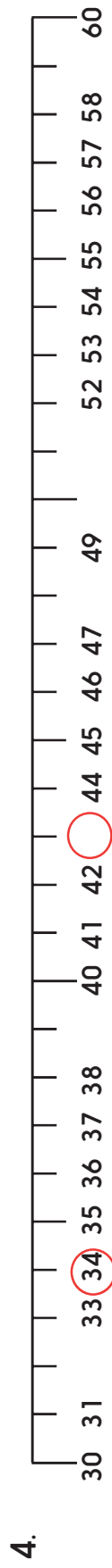
Bigger number: \_\_\_\_\_



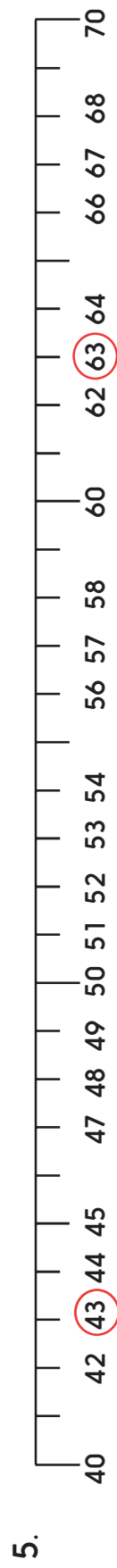
Bigger number: \_\_\_\_\_

# Missing numbers

## Sheet 2



Bigger number: \_\_\_\_\_



Bigger number: \_\_\_\_\_



Bigger number: \_\_\_\_\_