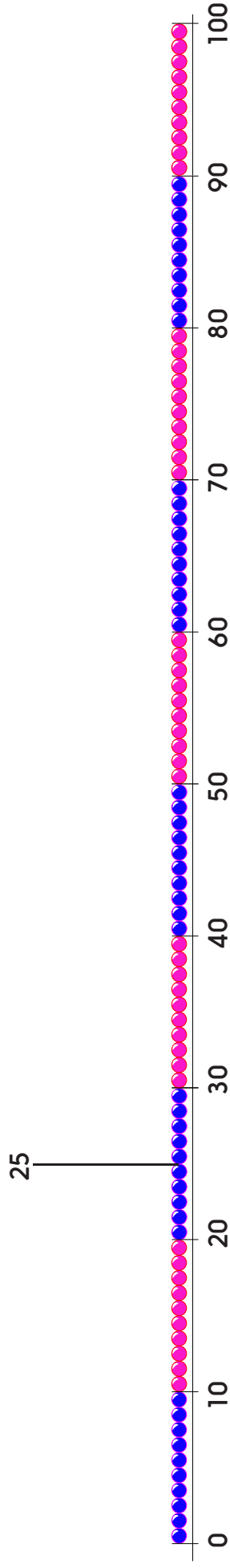


In between numbers

Sheet 1

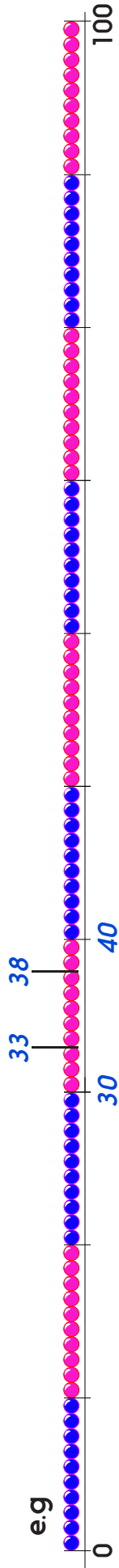
Mark on a number between every pair of neighbouring 10s numbers.
One has been done for you.



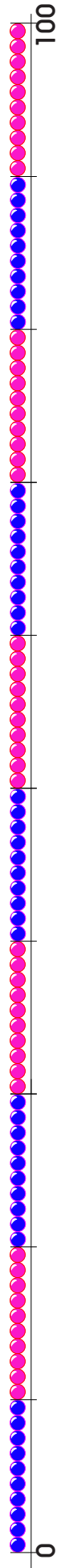
In between numbers

Sheet 2

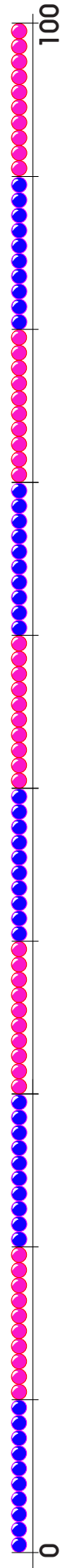
Find the two numbers on each beaded line. Write them in the correct place.
Mark two numbers between them.



60 and 70.



80 and 90.



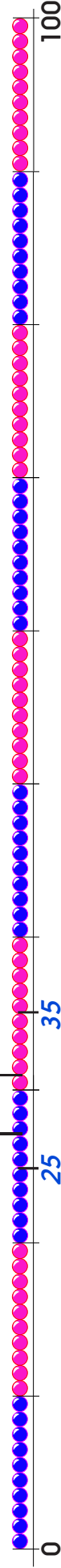
40 and 50.

In between numbers

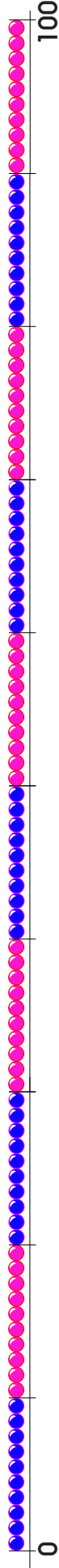
Sheet 3

Find the two numbers on each beaded line. Write them in the correct place.
Mark two numbers between them.

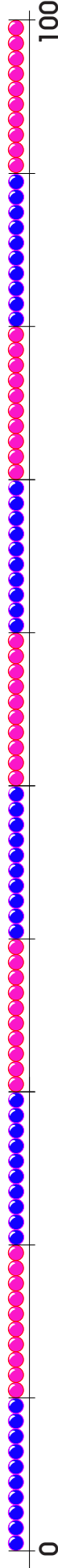
e.g. 27 31



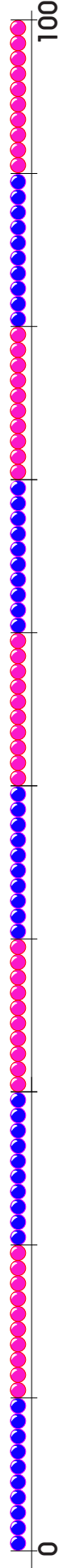
25 and 35.



55 and 65.



88 and 98.



36 and 46.

Making numbers


Sheet 1

Look at the numbers on the cards.

Can you make 3 different 2-digit numbers using the cards?


Circle the biggest number you have made.

1.




--	--	--

2.




--	--	--

3.




--	--	--

4.




--	--	--

5.



--	--	--


6.



--	--	--


Challenge

1. Using these cards make 2 numbers that are less than 60 but more than 50.



--	--

2. Using these cards make 2 numbers that are less than 85 but more than 65

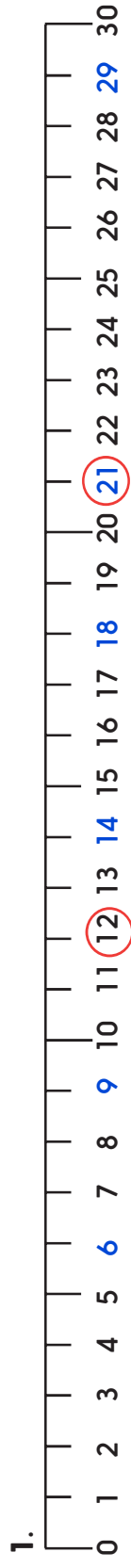


--	--

Place value

Answers

Day 1 Missing numbers Sheet 1



Bigger number 21

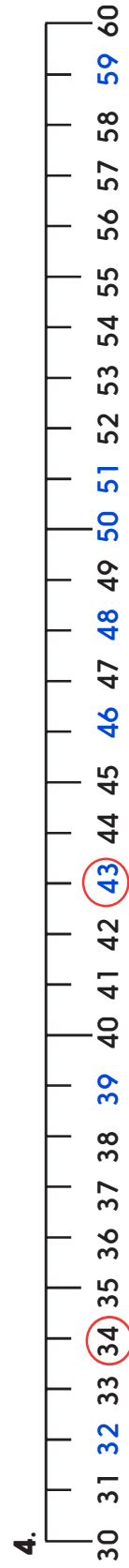


Bigger number 39

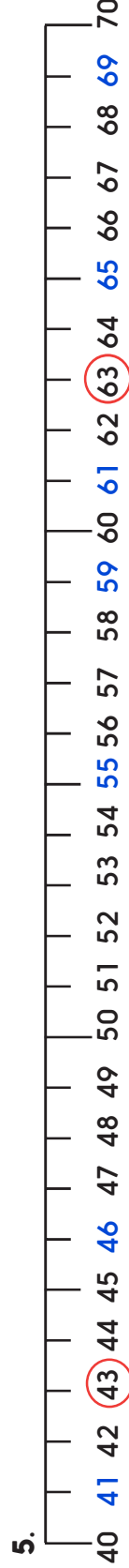


Bigger number 42

Day 1 Missing numbers Sheet 2



Bigger number 43



Bigger number 63



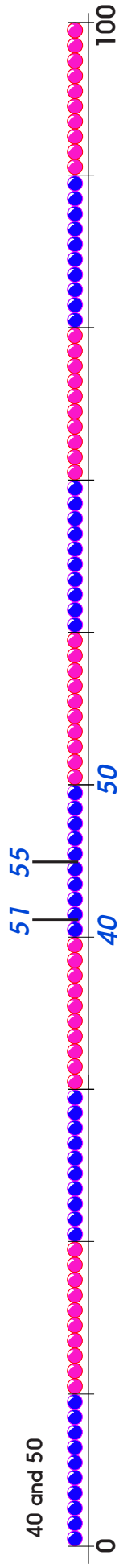
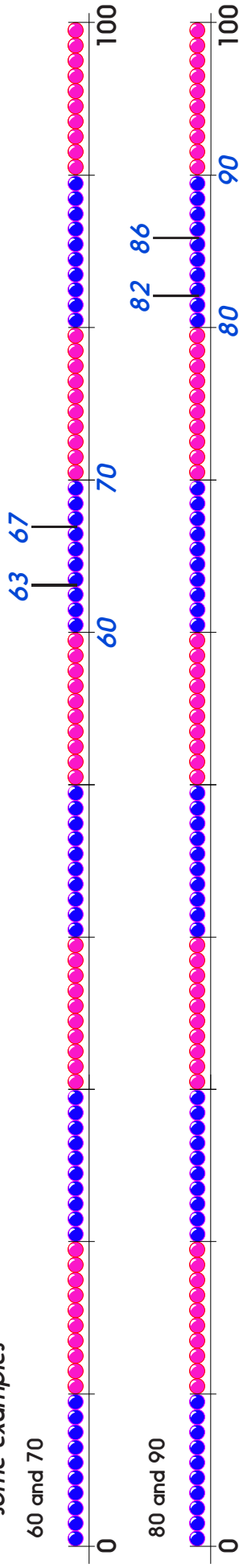
Bigger number 72

Place value

Answers

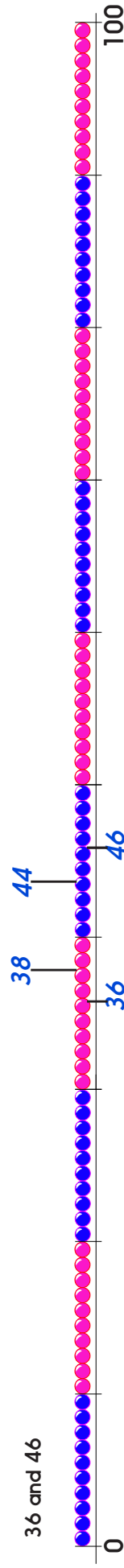
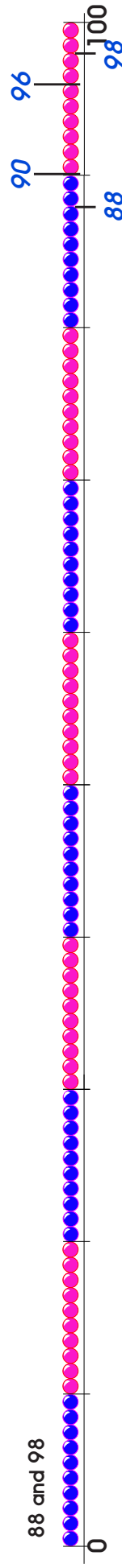
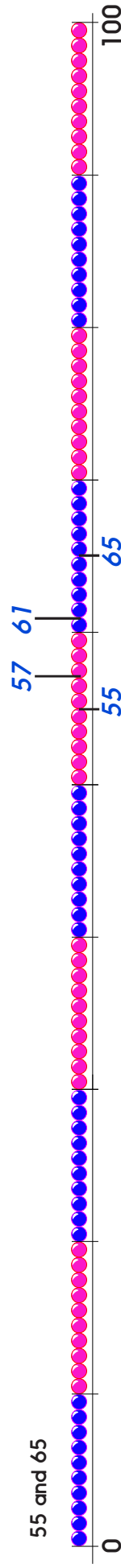
Day 2 Inbetween numbers Sheet 2

some examples



Day 2 Inbetween numbers Sheet 3

some examples



Place value

Answers

Day 3 Making numbers Sheet 1

Examples of answers are:

1. 23 **43** 24
2. 15 57 **75**
3. 48 **86** 68
4. 28 58 **85**
5. 56 67 **75**
6. **96** 62 92

Challenge

1. Using these cards make 2 numbers that are less than 60 but more than 50.



e.g. 58, 56, 54, 51

2. Using these cards make 2 numbers that are less than 85 but more than 65



e.g. 72, 79, 79, 82