

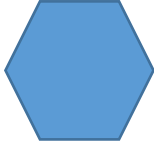



# 3 minute maths

Day 1	Day 2	Day 3	Day 4
Circle the odd numbers 1 2 4 6 $5 + \underline{\quad} = 10$ $\underline{\quad} + 3 = 10$ Double 3 = Double 5 = Name the shape:  Circle the smallest number 13 8 20 6	Circle the odd numbers 5 1 7 2 $3 + \underline{\quad} = 10$ $\underline{\quad} + 9 = 10$ Double 1 = Double 4 = Name the shape:  Circle the smallest number 12 3 13 9	Circle the odd numbers 9 10 3 5 $1 + \underline{\quad} = 10$ $\underline{\quad} + 8 = 10$ Double 0 = Double 2 = Name the shape:  Circle the smallest number 30 18 12 19	Circle the odd numbers 2 1 7 9 $6 + \underline{\quad} = 10$ $\underline{\quad} + 2 = 10$ Double 4 = Double 6 = Name the shape:  Circle the smallest number 16 52 37 25

# 3 minute maths

$15 + \underline{\quad} = 20$

$17 + \underline{\quad} = 20$

$5 + \underline{\quad} = 20$

Write in words:

4 \_\_\_\_\_

6 \_\_\_\_\_

12 \_\_\_\_\_

$3 + \underline{\quad} = 20$

$18 + \underline{\quad} = 20$

$14 + \underline{\quad} = 20$

Write in words:

3 \_\_\_\_\_

2 \_\_\_\_\_

1 \_\_\_\_\_

$10 + 8 =$

$10 + 9 =$

$10 + 1 =$

Write in words:

7 \_\_\_\_\_

8 \_\_\_\_\_

9 \_\_\_\_\_

$10 + 4 =$

$10 + 3 =$

$10 + 2 =$

Write in words:

4 \_\_\_\_\_

6 \_\_\_\_\_

12 \_\_\_\_\_