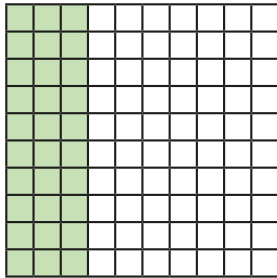


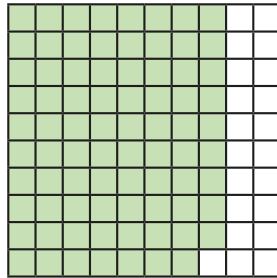
Complements to 1

1 Each hundred square represents one whole.
Use the hundred squares to help you complete the additions.

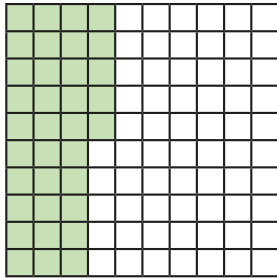
a) $0.3 + 0.7 = 1$



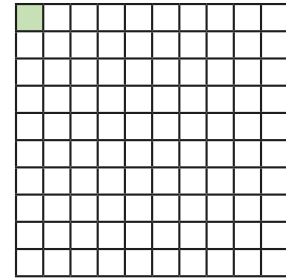
c) $1 = 0.21 + 0.79$



b) $0.35 + 0.65 = 1$

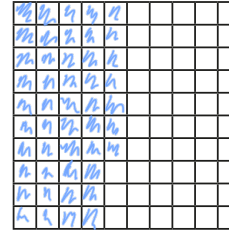


d) $0.99 + 0.01 = 1$

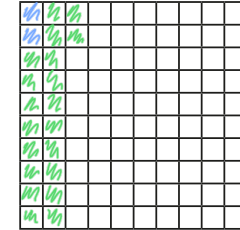


2 Complete the calculations.
Shade the hundred squares to help you.

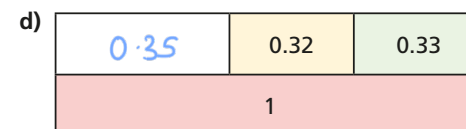
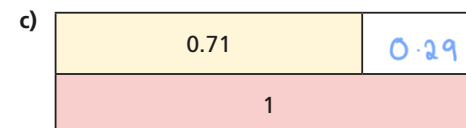
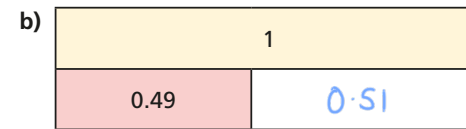
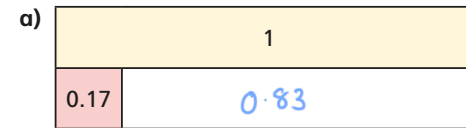
a) $1 = 0.47 + 0.53 = 1$



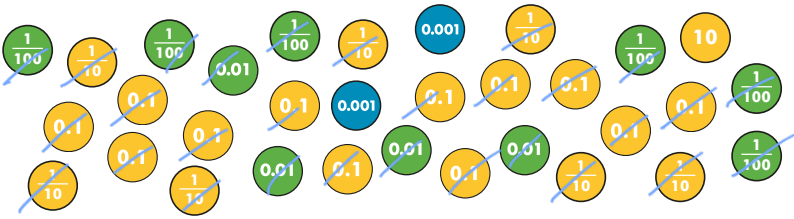
b) $0.02 + 0.2 + 0.78 = 1$



3 Complete the bar models.



4 Teddy has these counters.



He wants to exchange these for as many 1s counters as possible.

How many 1s counters can he collect?

12

19 tenths
10 hundredths (1 tenth) } 2 ones 1 ten = ten ones

5 Complete the additions.

$$54 + \boxed{46} = 100$$

$$5.4 + \boxed{4.6} = 10$$

$$0.54 + \boxed{0.46} = 1$$

$$0.054 + \boxed{0.046} = 0.1$$

What is the same and what is different about your answers?

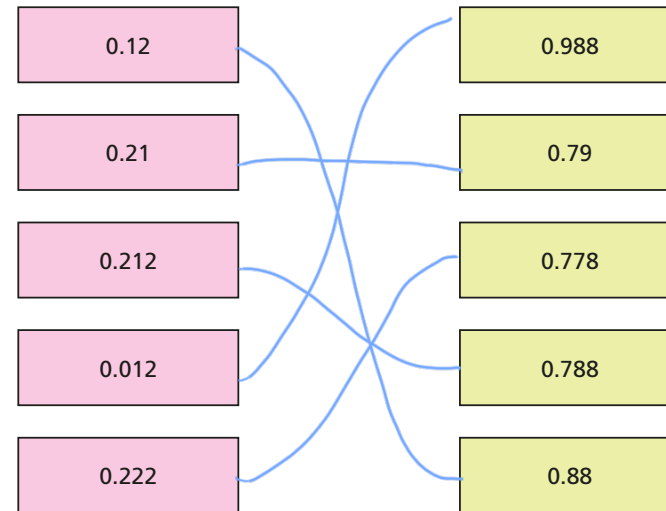
6 Complete the sentences.

a) 6 tenths + $\boxed{4}$ tenths = 1 whole

b) 23 hundredths + $\boxed{77}$ hundredths = 1 whole

e.g. c) 2 tenths + $\boxed{0}$ hundredths + $\boxed{8}$ tenths = 1 whole

7 Match the pairs of decimals that add together to make 1 whole.



8 Mo has completed these calculations.

- a) $0.22 + 0.88 = 1$
- b) $0.39 + 0.71 = 1$
- c) $0.677 + 0.433 = 1$

He has got them all incorrect.

What mistake has Mo made?

He has used number bonds to 10 in every column.

Correct Mo's calculations.

a) $0.22 + \boxed{0.78} = 1$

c) $0.677 + \boxed{0.323} = 1$

b) $0.39 + \boxed{0.61} = 1$