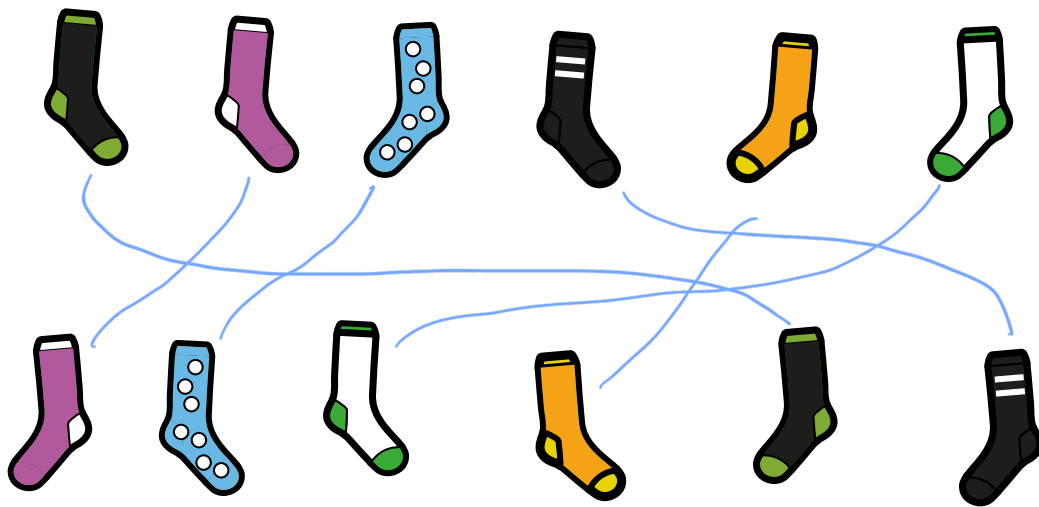


Make equal groups – grouping

I Here are some socks.



a) Draw lines to match the pairs of socks.

b) Complete the sentences.

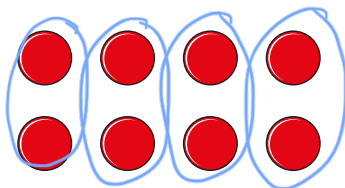
There are socks altogether.

There are socks in each pair.

There are pairs of socks.



2 Here are some counters.



a) Circle groups of 2

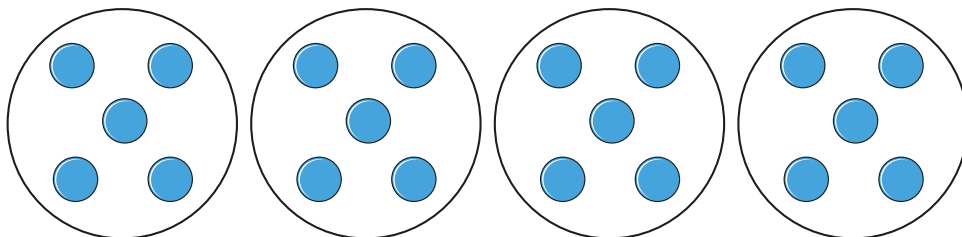
b) Complete the sentences.

There are counters altogether.

There are equal groups of 2 counters.

3 Complete the sentences.

a)

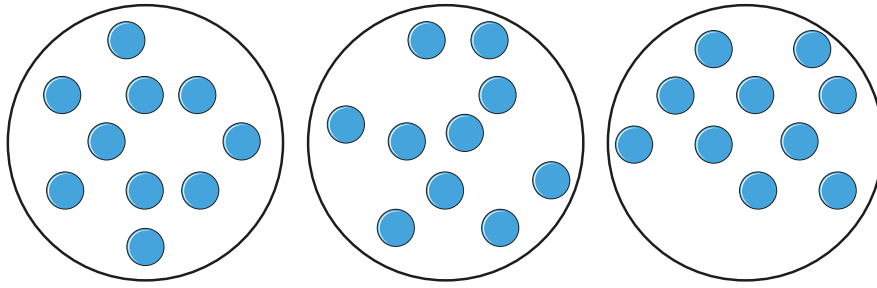


There are counters altogether.

There are equal groups of counters.



b)



There are counters altogether.

There are equal groups of counters.

4

Use 30 counters.

a) How many equal groups of 2 can you make?

b) How many equal groups of 5 can you make?

c) How many equal groups of 10 can you make?

Talk about your answers.

