

Thursday 11th June:

Good morning Year 1. Did you manage to guess the answer to yesterday's riddle? The answer was **a fence**. Did you know that the longest fence in the world is The Dingo Fence of south-east Australia which is 5,614 km (3,488 miles) long. Here are some activities for you to do today.

Daily reading

Today, please read a book of your choice for 10 minutes then spend 5 minutes retelling what you have read and answering questions about it. Please ask an adult to help you with this.

Which word best describes your favourite character in the book you're reading?

Optional online book -





Molly's New Toy - <https://www.oxfordowl.co.uk/api/interactives/13020.html>

Daily counting, number bonds or times tables







Find the missing numbers. Example taken from BBC home learning

[https://www.bbc.co.uk/bitesize/articles/zh8m6v4#:~:text=Number%20bonds%20are%20a%20pair,br](https://www.bbc.co.uk/bitesize/articles/zh8m6v4#:~:text=Number%20bonds%20are%20a%20pair,break%20down%20into%20different%20parts.)

 Count the number of dark nuts to complete the missing number.

			
<input type="text"/> + 8 = 10	<input type="text"/> + 0 = 10	<input type="text"/> + 6 = 10	<input type="text"/> + 3 = 10

2.  Complete the missing number using the nuts to help you.

		
<input type="text"/> + 2 = 10	9 + <input type="text"/> = 10	<input type="text"/> + 4 = 10
		
3 + <input type="text"/> = 10	<input type="text"/> + 5 = 10	10 + <input type="text"/> = 10

More difficult: Can you make up some number sentences that equal 20?

Termly Spellings

Please take time to learn spellings for future weeks and to re-visit past spellings. These can be found on the school website at <https://www.newbridge.bathnes.sch.uk/> and go to the tab **Classes** and click on your class.

You could try it this way today.

Write the word out on a sheet of paper ensuring that it is spelt correctly and it is large enough to trace over. Trace over the word and say it at the same time. Move next to the word you have just written and write it out as you say it. Turn the page over and write the word as you say it, and then check that you have spelt it correctly.

Daily Maths

To be written in books:




Multiplication – Arrays

Use your 2p, 5p and 10p coins to make arrays.

Then record it in a table in your books like the example below.

1. Draw the array
2. Describe the columns
3. Describe the rows
4. Find the total

Or complete the table below. A larger copy is at the end of today's planning.

Array	Description - columns	Description - rows	Totals
	5 columns 2 cookies in each column	2 rows 5 cookies in each row	$2 + 2 + 2 + 2 + 2 = 10$ $5 + 5 = 10$
	___ columns ___ donuts in each column	___ rows ___ donuts in each row	
	___ columns ___ fish in each column	___ rows ___ fish in each row	
	3 columns 5 cupcakes in each column	5 rows 3 cupcakes in each row	

**Daily English/
Phonics**

Writing:

Today, you are going to write about and describe Winter weather. To help you, take a look at the labels you added to your Winter picture on Tuesday. Write some sentences in your book describing the weather in Winter. Remember to include a capital letter, finger spaces and full stop for each sentence, think about including adjectives too. Also, if you use the name of the season, remember it will need a capital letter too.

Dictated sentence:

Please read the sentence to your child. Then re-read slowly one word at a time while your child writes the sentence.

The girl brings milk to her mum.

Extension – Can you extend your sentence using **and/because/when**?

Copy the following real and alien words, then put sound buttons on them. Press the buttons to read the words.

blem vanish quisk label

Play Quick Write. How many times can you write each word in a minute?

ask friend school

Optional game – Cheeky Chimps <https://www.phonicsplay.co.uk/member-only/CheekyChimps.html>
The home page gives you details to log in for free.

Or pick a different game on the website at a phase suitable for your child's ability.

Healthy Me

Time Challenge – It's time to get healthy and build up your stamina! How many tuck jumps can you do in 2 minutes?

In a pair, place your hands over your face and on "go", move your hands to reveal your facial expression. If they match, shout "Snap!"

Problem of the Day

Challenge – Can you build your name or initials? Use Lego, blocks, recycling objects (make sure you check with an adult if they are clean and safe to use) to build your name or initials?

Riddle of the day – What has a bottom at the top?

The activities below are supplementary and can be used to further extend learning opportunities whilst at home.

Home Learning

Please look at your Home Learning grid.
Visit the school website at <https://www.newbridge.bathnes.sch.uk/> and go to the tab **Classes** and click on your class.

Please plan and complete these activities throughout the duration of the school closure.

National Curriculum Word Lists

Look in your Reading Log and find all of the spellings for your year group. How many of these can you learn?

Can you write a sentence using the words?

Curriculum Overview

Take time to look at the Curriculum Overview for your year group. This can be found on the school website at <https://www.newbridge.bathnes.sch.uk/> Go to the tab **Key Information**, go down the menu on the left hand side to **Curriculum**, go to **Termly Overview** and click on the one for your year group.

Talk to a grown up at home and decide on an aspect you would like to find out more about. This means that when you come back to school, you will be able to share something new.




Useful websites

Please see the useful website list.

Well done for trying all of these areas of learning. Please can I ask that your parent sends a few lines in an email to let us know what you have completed today.

1DE: 1de@newbridge.bathnes.sch.uk 1R: 1r@newbridge.bathnes.sch.uk

Please look out for tomorrow's learning, from Mrs Dinsdale, Mrs Earle and Ms Rhodes.

Array	Description - columns	Description - rows	Totals
	5 columns 2 cookies in each column	2 rows 5 cookies in each row	$2 + 2 + 2 + 2 + 2 = 10$ $5 + 5 = 10$
	___ columns ___ donuts in each column	___ rows ___ donuts in each row	
	___ columns ___ fish in each column	___ rows ___ fish in each row	
	3 columns 5 cupcakes in each column	5 rows 3 cupcakes in each row	