

Tuesday 16th June: Happy Tuesday Year 3s! Hope you've enjoyed a yummy breakfast and ready to start another day of learning! Here goes . . .

Daily reading

Yesterday you read the text '**Investigating Pompeii and Vesuvius**'. Today, you need to re-read the text and answer the questions (attached). Remember to write in full sentences and refer back to the text to find the evidence to your answers.

Daily times tables

8 Times Table Space Race

Multiply the numbers on the track.
Write them down as you go around.
Use a timer to see how long it takes you to finish the race!

START 1 6 3 7 2 7 9

Termly Spellings

Please take time to learn spellings for future weeks and to re-visit past spellings. These can be found on the school website at <https://www.newbridge.bathnes.sch.uk/> and go to the tab **Classes** and click on your class.

Have a look at this week's spellings. Can you write an interesting sentence with your spellings in? Can you end your sentence with a full stop, question mark or exclamation mark? Can you include speech marks? Remember to start it with a capital letter!

Daily Maths

Starter:

There are 1000g in 1kg. Using this information answer these questions (the first has been done for you):




- 1.) 1500g = 1.5 kg
- 2.) 1200g = _____ kg
- 3.) 1900g = _____ kg
- 4.) 500g = _____ kg
- 5.) 1350g = _____ kg

Challenge:

How many 100g bags of sugar will I need to make a total of 1kg of sugar?
If I have 300g of flour, how many more grams will I need to make 1kg?

Main activity:




Ready/Steady:

			
1) What is each interval worth on each set of scales?	Each interval is worth _____	Each interval is worth _____	Each interval is worth _____
2) Mark the mass shown on each set of scales.	350g	48g	225kg

Go:

A bag of flour has a mass of 2kg.



			
What is each interval worth on each set of scales?	Each interval is worth _____	Each interval is worth _____	Each interval is worth _____

The pointer shows the mass of one bag of flour on each set of scales.

1) One set is incorrect. Which set?

2) Ali says that the mass of the bag of flour on this set of scales is 800g. Do you agree? Explain your answer.



Daily English

Now you have collected your information about your chosen volcano, we would like you to revise features of a newspaper article. Do you remember when we wrote about the missing ring in Victoria Park? The **'Who, what, where, when and why'**?

Let's recap by reading the paragraph below and recording the information in the correct boxes. You can draw the grid and complete in your books.

The World Today



Tim Peake has returned from his famous mission as the first astronaut from the European Space Agency to stay at the International Space Station. He returned to Earth two days ago, after completing 125 million kilometres in orbit over 195 days. He went into space to complete maintenance on the space station and launched from the ESA in Cologne.

Feature	Check	Example
Who?		
What?		
Where?		
When?		
Why?		

Have a look at this newspaper report. We have labelled some of the features of a newspaper in it!

*** FAIRY TALE TIMES ***¹

¹ include the name of the newspaper

² include a headline

FARMER GROWS AN ENORMOUS TURNIP!²

There was a surprise last night at the Fairy Tale town vegetable show. Farmer Fred had brought his enormous turnip to show the judges and it was the size of a car!⁴

The farmer had planted his turnip in March.⁴ He worked hard to feed and water it every day. He was shocked by how big it grew.

Farmer Fred and his wife carried on feeding the turnip each day and it was soon the size of a football.⁴

Fred decided to pull up the turnip on Tuesday. Fred took all his sharpest spades and forks to help with the job. He dug around the turnip and pulled and pulled. He was unable to move it.⁴


⁴ include facts about the main events

The farmer needed the help of his wife and his grandchildren and even some of the farm animals to pull up the turnip.

Then they had to move it to the show. Fred used his tractor to pull the turnip.⁴

Fred and his wife won first prize in the biggest vegetable competition.⁴

Fred has said that he plans to grow four enormous carrots for the show next year.



³ include pictures with captions

Farmer Fred and his turnip. Have you ever seen such an enormous turnip before?³

Can you think of any other newspaper features that we have used in our writing throughout Year 3? You will need them for your planning tomorrow!

<p>Problem of the Day</p>	<p>How many mice are there in the room if there is a mouse in each of the four corners, and opposite each mouse there are three mice and at each mouse's tail there is a mouse?</p>
<p>Healthy Me</p>	<p>Today, we are going to take some time to reflect and relax. Relaxation is as important as physical exercise for the mind and body. Here is what we would like you to do:</p> <p>Find a quiet space in your house.</p> <ul style="list-style-type: none"> - Lie down on your back and close your eyes. - Make sure the palms of your hands are facing upwards (towards the ceiling) - Imagine you are at the beach listening to the waves. - What can you hear? How does it make you feel? <p>If you have any music that sounds like the beach, please put it on to listen to. Alternatively use this:</p> <p>https://www.youtube.com/watch?v=nWridXDgYc8</p> <p>See if you can lie still for 20 minutes listening and reflecting.</p> <ul style="list-style-type: none"> - Slowly pen your eyes. How do you feel now? - When you are ready, gently and slowly lift yourself up into a seated position.
<p>The activities below are supplementary and can be used to further extend learning opportunities whilst at home.</p>	
<p>Home Learning</p>	<p>Please look at your Home Learning grid. Visit the school website at https://www.newbridge.bathnes.sch.uk/ and go to the tab Classes and click on your class.</p> <p>Please plan and complete these activities throughout the duration of the school closure. We would love to see the work you have completed. Why not send us a photo or a video?</p>
<p>National Curriculum Word Lists</p>	<p>Look in your Reading Log and find all of the spellings for your year group. How many of these can you learn?</p> <p>Can you write a sentence using the words?</p>

Curriculum Overview	<p>Take time to look at the Curriculum Overview for your year group. This can be found on the school website at https://www.newbridge.bathnes.sch.uk/ Go to the tab Key Information, go down the menu on the left hand side to Curriculum, go to Termly Overview and click on the one for your year group.</p> <p>Talk to a grown up at home and decide on an aspect you would like to find out more about. This means that when you come back to school, you will be able to share something new.</p>
Useful websites	Please see useful website list.

Well done for trying all of these areas of learning. Please can we ask that your parent sends a few lines in an email to let us know what you have completed today.

3OG: 3og@newbridge.bathnes.sch.uk

3KC: 3kc@newbridge.bathnes.sch.uk

Please look out for tomorrow's learning, from Mrs O'Gara, Mrs Keynes and Mrs Ross