

Diamond class work for Friday 5th March 2021

- ▶ Here you will find three pages of work for today.
- ▶ Page one has some English work and page two and page three some maths for your morning. Please email your work to Mr Mearns at - pmearns@poolhouse.lancs.sch.uk
- ▶ Page four has work from Miss Hall for your afternoon. When completed send this work to - ahall@poolhouse.lancs.sch.uk
- ▶ We will be keeping records of who completes the work to report to Mrs Cole.

English

To begin an advertising campaign for the museum.

1
First today, look through all the information on screens 6 and 7 of the ebook - 'The Museum Of Fun'.

On screen 7, how does the author use language to reflect the excitement of the circus and convince the reader that they should visit this attraction?

What are the facts in this advertisement?

Is there any way you could make this more exciting while still using the same facts?

Come to the circus!

Rewrite the sentences below to make the circus sound as exciting as possible.


The circus will be on the village green for a week.

There are some clowns.

Acrobats do tricks.

Rudolpho the magician will do something surprising.

Come to the circus.



2

TBAT name and describe polygons.

Maths 1

Copy and complete the table. For each statement and shape, colour the box the correct colour.

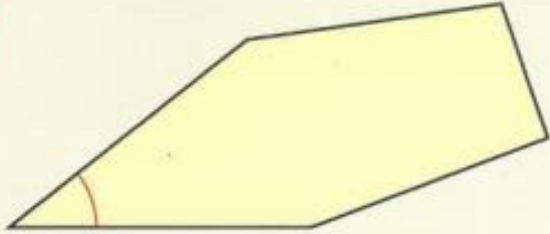
	square	rectangle	parallelogram	rhombus	trapezium	kite	arrowhead
Has 4 sides							
Has all sides the same length							
Has only one pair of parallel sides							
Has two pairs of parallel sides							
Has opposite sides equal							
Has adjacent sides equal							
Has line symmetry							
Has a right angle							
Has an obtuse angle							
Has a reflex angle							

always true sometimes true never true

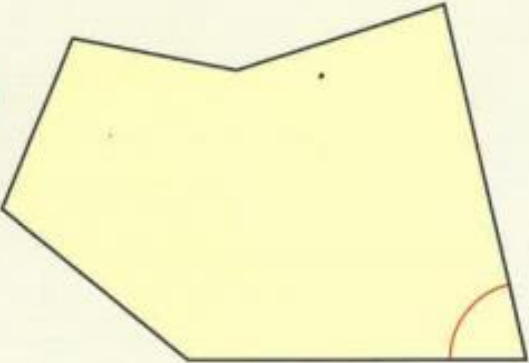
Maths 2

Name each of the shapes below. Then name the angle which has been highlighted. Is it an acute, right, obtuse or reflex angle?

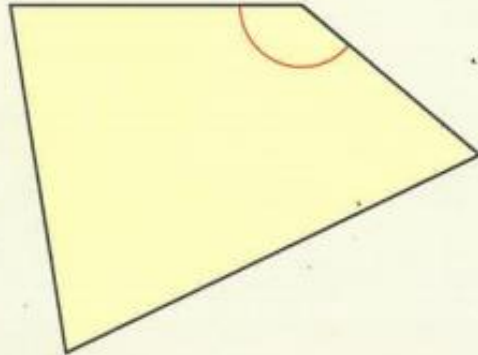
1



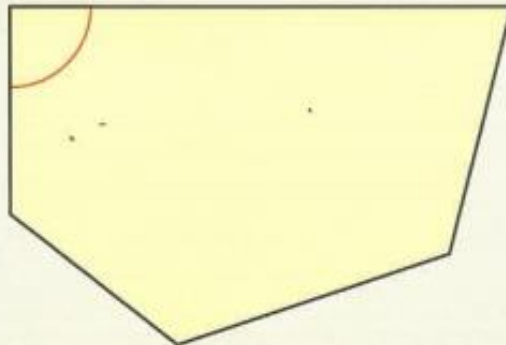
2



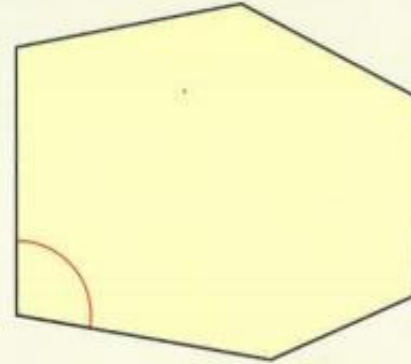
3



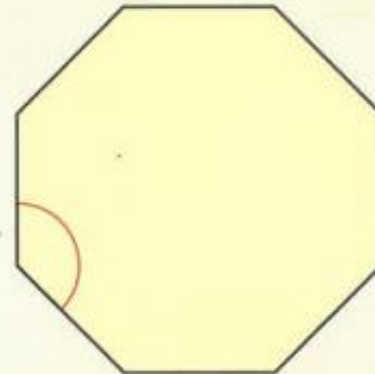
4



5

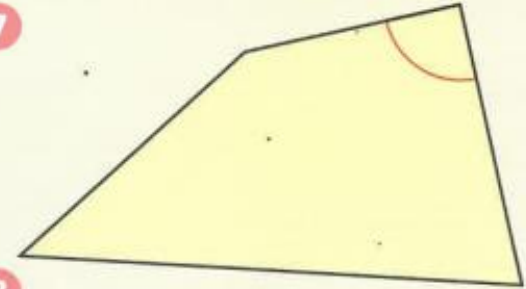


6

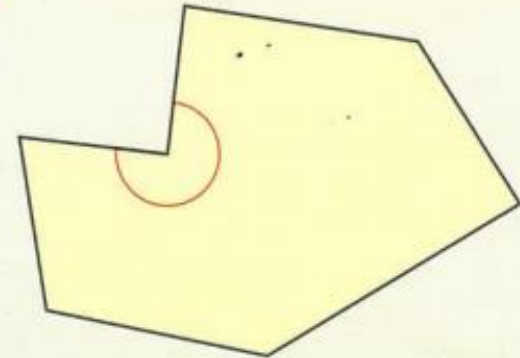


7

7



8



Most of these shapes are irregular. What makes them irregular?

Computing: Internet Safety

Your task:

I would like you to write a brief summary to explain what you have learnt about internet safety throughout this topic. You can discuss the positive and negative things that can occur from being online.



Example:

Positive - socialising with friends

Negative - strangers may want to contact you

Please do at least 5 of each.

Music: Using your instrument

I would like you to video a 20 second clip of you using your instrument that you made yesterday.



Try to make it flow into a tune or a beat, depending on your instrument. If you count steadily 1, 2, 3, 4 and repeat, it will help you stay in time.