

Task for Miss Pass!!

Write a short paragraph for me. In the paragraph I would like you to tell me one skill or topic you feel you cannot remember. It could be column addition or using apostrophes, for example. Next week I will then set you an individual task about your chosen topic to help you feel more confident.

Anglo-Saxons and Vikings

In History we would have begun to study and look at life during the Anglo-Saxon and Viking eras. Use your research skills to find out where the Vikings came from, when they came to Britain and also find out some facts about the Kings who reigned during the time the Anglo-Saxons and Vikings where in Britain. Present this research in anyway you would like.

Choose as many activities to complete in a week as you would like.

The Water Cycle

Can you remember the water cycle?

Create a bright and informative diagram (**with labels**) showing the process of the water cycle.

Remember to include key words like condensation and evaporation.

Silver Class (Y4) Weekly Work Web Week 4 Summer Term Miss Pass

Finding the Area

Attached you will find a question sheet and help sheet.

Answer the questions to the best of your ability. (I know this is not something we have covered yet!) If you struggle email me and I will send you some extra help.

Baking AND Maths!!

Find a recipe for something you would like to bake with an adult in your home.

Use your knowledge of measuring to help you with sorting the ingredients.

Can you try to convert some of the measurements (for example millilitres to litres).

Send me some pictures of you measuring and converting and your finished product.


RE Recap

This half term we would have been studying Hinduism. Can you remember any key beliefs and facts about this faith. Can you use books or the internet to research or find out some more interesting facts?


Email me some of the work if you would like me to see it – I would love that!
kpass@poolhouse.lancs.sch.uk

Finding the Area


1.



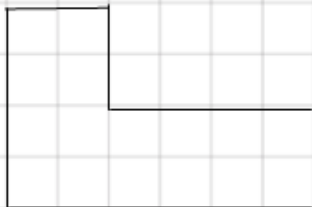
2.



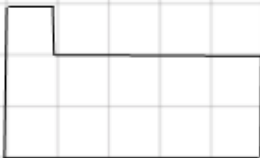
3.



4.



5.




Finding the area of a shape (help-sheet)

To find the area of a shape you must multiply the width of a shape by its height.

You will need to use your knowledge of times tables to help you!

For example:



So the calculation you will need to solve is $7\text{cm} \times 3\text{cm} = 21\text{cm}^2$

When working out the area your answer will always have a small 2 after the unit of measure (cm, m etc.)

The work will ask you to count squares to give you how many cm the height and width are.



For example on this question you will need to work out the calculation $4\text{cm} \times 3\text{cm} = ?$

Some of the questions show an irregular shape – your challenge is to see if you can solve these or work out a strategy to answer them. (Questions 4 and 5).
