

1 Here are some digit cards.



Mary makes a 2-digit number using two of the cards.

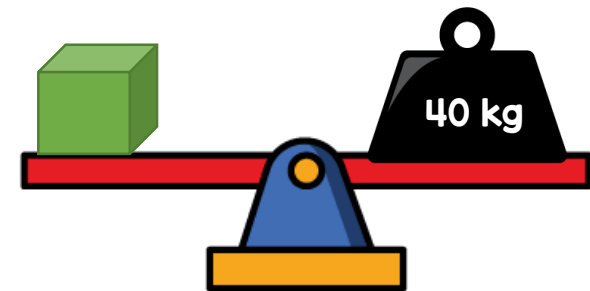
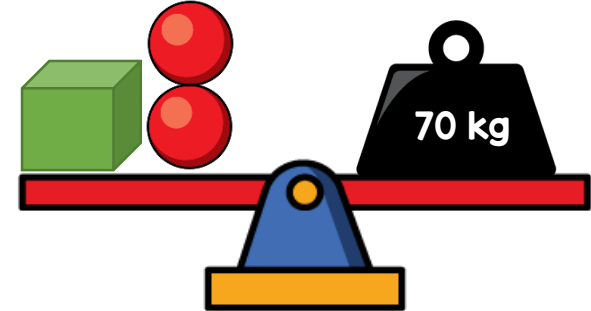
How many different numbers can she make?

2 Complete the number sentences.

$$60 + \square = 79$$

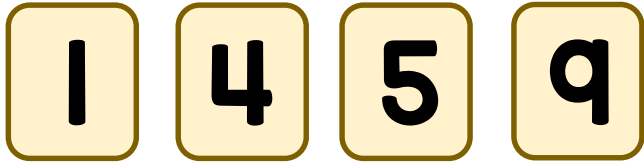
$$15 + 12 = 12 + \square$$

3 Tom balances some scales.



What is the mass of the sphere?

1 Here are some digit cards.



Find the 4-digit number that is closest to 5,000

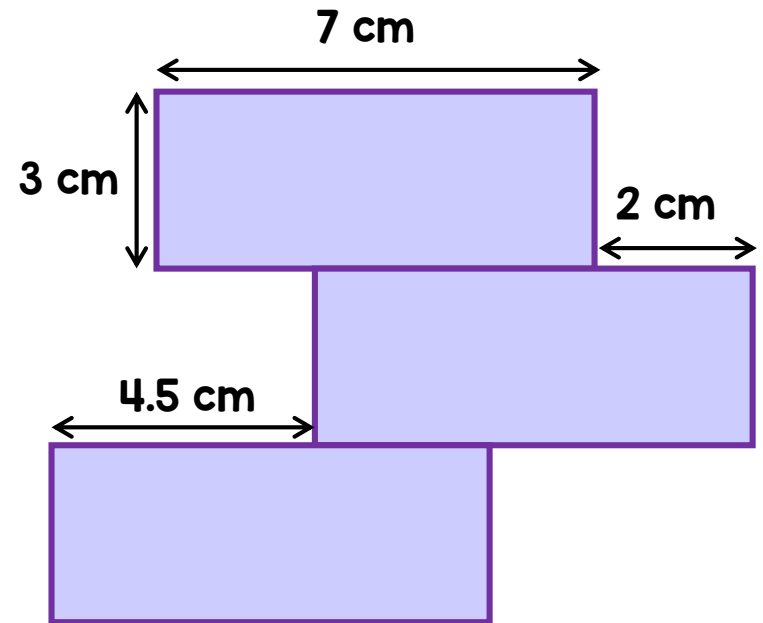
You may use each card only once.

2 Complete the number sentences.

$$65 + \square = 79$$

$$83 + 28 = 82 + \square$$

3 Three identical rectangles are arranged to make a shape.



What is the perimeter of the shape?