



Support Slides

The following slides are based on Year 1 Multiplication and Division – Count in 2s



To be able to count in 2s

Count the boots in 2s.



How many boots are there in total?

Answers

To be able to count in 2s

Can you complete the number tracks?

2	4			10	12		16	
---	---	--	--	----	----	--	----	--

30	32	34	36		40		44	
----	----	----	----	--	----	--	----	--

20	18	16			10		6	
----	----	----	--	--	----	--	---	--

26	24		20		16		12	
----	----	--	----	--	----	--	----	--

Answers



THIRD SPACE
LEARNING

To divide by 2

Success Criteria

- I can make equal groups from a set of objects
- I know that division is making equal groups
- I know that counting equal groups is multiplication or repeated addition



To divide by 2

Starter:

Alex is investigating whether half of 14 is the same as $14 \div 2$.

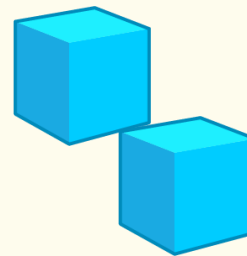
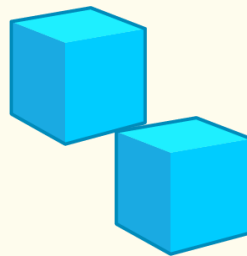
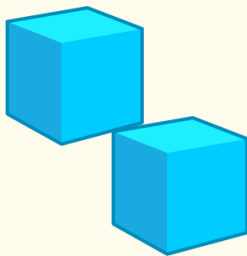
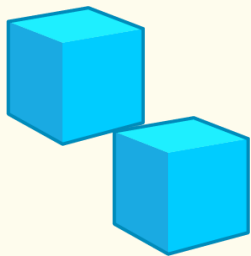
How could he use cubes to prove that they are the same?

Answers



To divide by 2

Complete the stem sentences.



I have _____ cubes altogether.

÷

=

There are _____ in each group..

There are _____ groups.

x

=

Answers

To divide by 2

Guided Practice:

Group the gloves into pairs.



Complete the number sentences.

$$\boxed{} \div \boxed{} = \boxed{}$$

$$\boxed{} \times \boxed{} = \boxed{}$$


Answers

To divide by 2

Independent Practice:

1. a. Divide the 12 counters by 2. Complete the calculation.

$12 \div 2 = \underline{\quad}$



b. Divide the 16 apples by 2. Complete the calculation.

$16 \div 2 = \underline{\quad}$



c. Divide the 20p by 2. Complete the calculation.

$20 \div 2 = \underline{\quad}$



d. Divide the 28p by 2. Complete the calculation.

$28 \div 2 = \underline{\quad}$



To divide by 2

Guided Practice:

The Red Mathstronaut and the Blue Mathstronaut have 14 sweets between them. They share them equally.

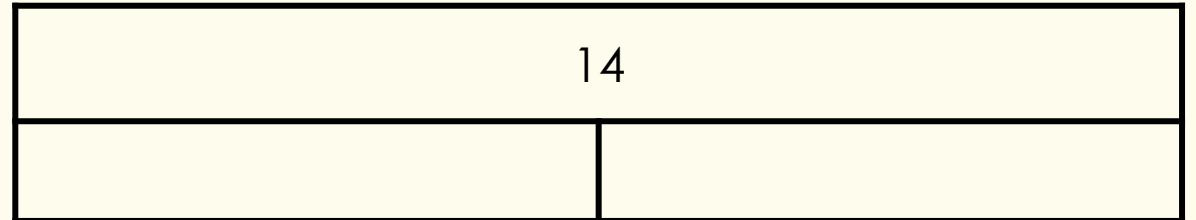
How many sweets does each Mathstronaut get?

There are _____ sweets altogether.

There are _____ groups.

There are _____ in each group.

Complete the bar model and write a calculation to match.



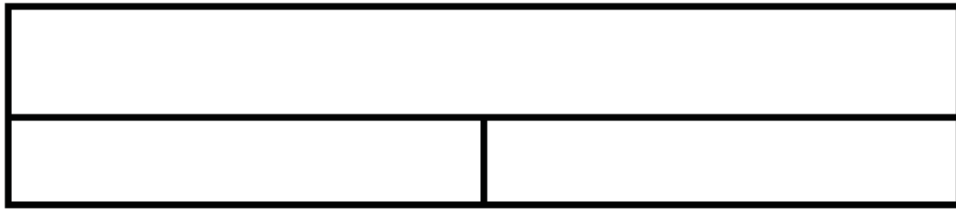
Answers

To divide by 2

Independent Practice:

2. Complete the bar models and calculations.

a. $22 \div \underline{\hspace{2cm}} = \underline{\hspace{2cm}}$

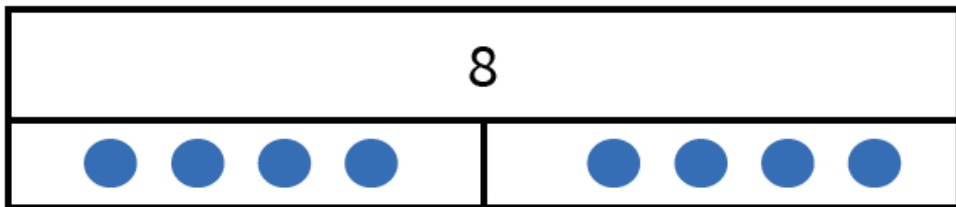


b. $18 \div \underline{\hspace{2cm}} = \underline{\hspace{2cm}}$



c. Using the bar model, circle the mistake in the calculation.

$8 \div 2 = 3$





To divide by 2

Guided Practice:

I have 24p.

I divide it equally between 2 friends .

How much will they get each?

I have 24p in 2p coins.

How many 2p coins do I have?

Consider the two questions above.

What is the same and what is different?

Answers

To divide by 2

Independent Practice:

- 3.** The Yellow and Purple Mathstronauts have some counters.
The Yellow Mathstronaut shares his counters into 2 equal groups. He has 17 in each group.
The Purple Mathstronaut groups her counters in twos. She has 21 groups.
Who has more counters and by how many?
How did you work it out?



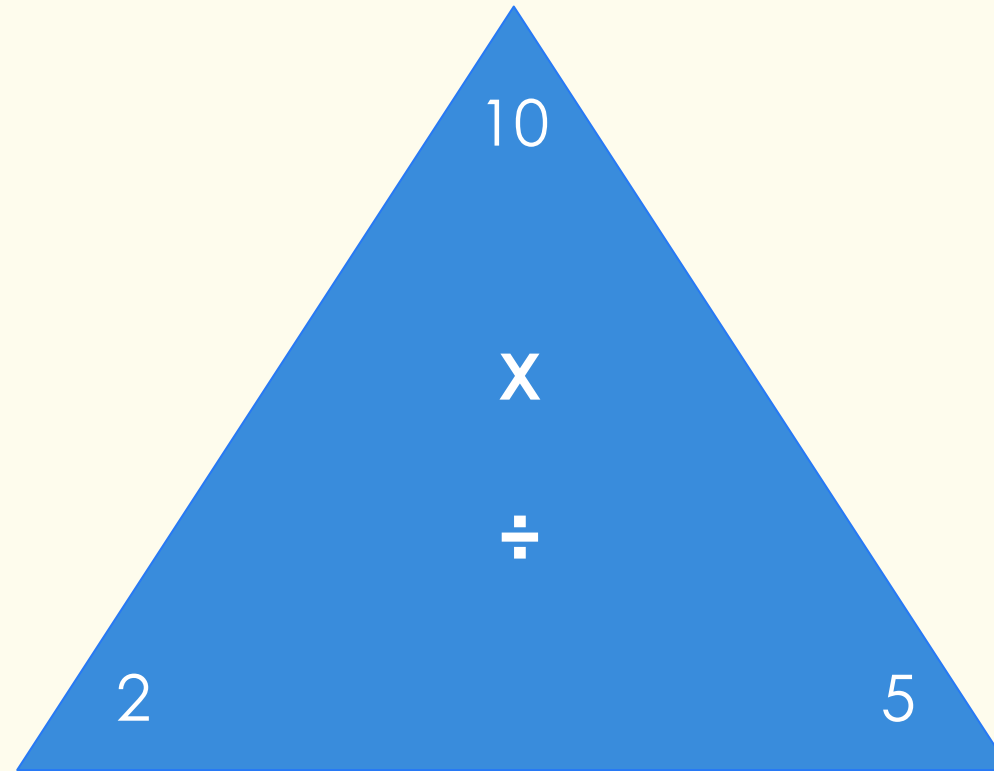
To divide by 2

Let's Reflect:

Here is a 'Tricky Triangle'.

Are the calculations right?

Why? Why not?



$$2 \times 5 = 10$$

$$5 \times 2 = 10$$

$$10 \div 2 = 5$$

$$5 \div 10 = 2$$

Answers