

1) How many tens are there in 100?


2) How many visitors were there all weekend?

Day	Number of visitors
Saturday	493
Sunday	413

3) Find the difference between £4 and 42p and £2 and 50p

4) What is 8×6 ?

1) How many tens are there in 100? **10 tens**



2) How many visitors were there all weekend?

Day	Number of visitors
Saturday	493
Sunday	413

906 visitors

3) Find the difference between £4 and 42p and £2 and 50p

£1 and 92p


4) What is 8×6 ? **48**

1) Which unit of measurement is the best to measure a 5p coin?

millimetres

centimetres

metres



2) How many more visitors were there on Saturday?

Day	Number of visitors
Saturday	● ● ● ● ●
Sunday	● ●

Key


● = 100 visitors

3) Write 376p in pounds and pence.

4) What is 32 divided by 4?

1) Which unit of measurement is the best to measure a 5p coin?

- millimetres
 centimetres
 metres



2) How many more visitors were there on Saturday?


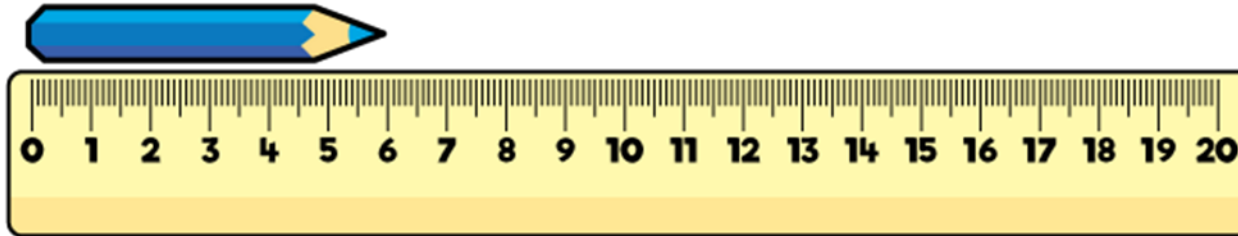
Day	Number of visitors
Saturday	● ● ● ● ●
Sunday	● ●

Key
 ● = 100 visitors
 300 visitors

3) Write 376p in pounds and pence. £3 and 76 p

4) What is 32 divided by 4? 8

1) How long is the crayon?



2) How many more children play netball than rounders?

Sport played	Number of children
Rounders	● ● ● ◐
Netball	● ● ● ● ●

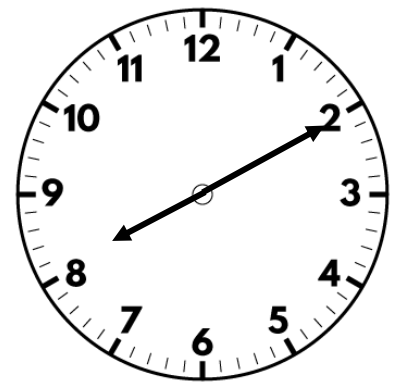
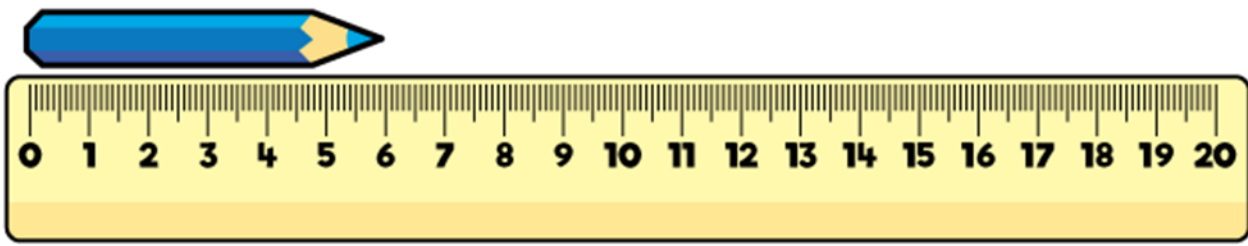
Key

● = 8 children

3) What is £5 and 27 p + £6 and 50 p?

4) How many hundreds are in 462?

1) How long is the crayon? **6 cm**



2) How many more children play netball than rounders?


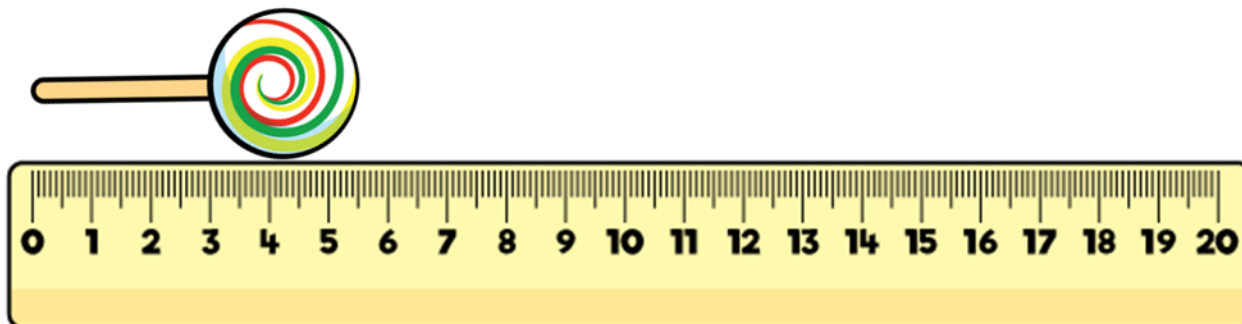
Sport played	Number of children
Rounders	● ● ● ●
Netball	● ● ● ● ●

Key **12 children**
 ● = 8 children

3) What is £5 and 27 p + £6 and 50 p? **£11 and 77 p**

4) How many hundreds are in 462? **4 hundreds**

1) How long is the lollipop?


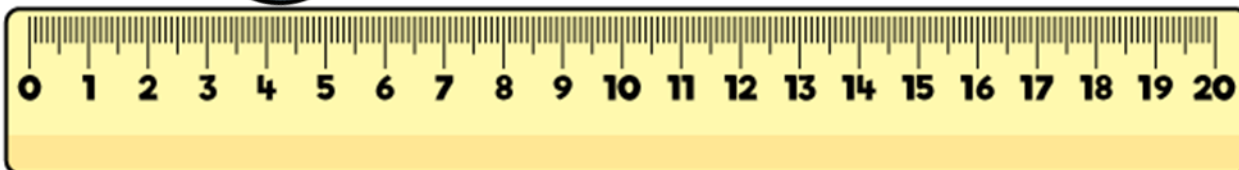


2) Write 18 in tally marks.

3) Find the total of £2 and 94 p and £5 and 79 p.

4) What is 3×12 ?

1) How long is the lollipop? **5 cm and 5 mm**



2) Write 18 in tally marks. **|||| |||**

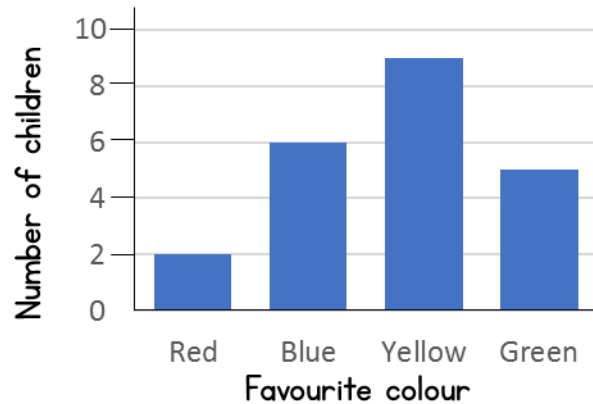
3) Find the total of £2 and 94 p and £5 and 79 p. **£8 and 73 p**

4) What is 3×12 ? **36**

1) Complete the sentence.


_____ centimetres = 1 metre

2) How many more children like yellow than red?




3) What is £3 more than 452 p?

4) What is the value of the 5 digit in 325?

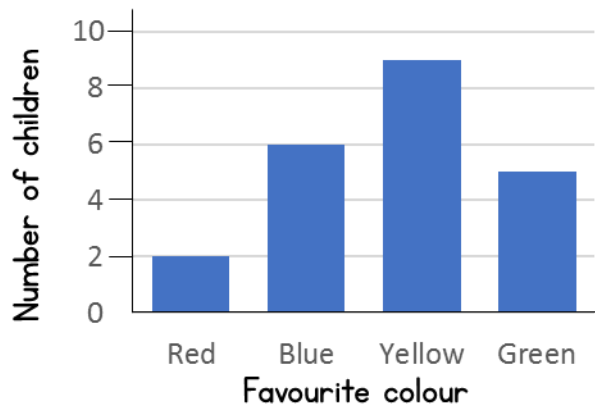


1) Complete the sentence.

100 centimetres = 1 metre



2) How many more children like yellow than red?



7 children

3) What is £3 more than 452 p?

£7 and 52 p

4) What is the value of the 5 digit in 325?

5 ones