

Can I write the time?

(recap)

*seconds*

*minutes*

Year 3/4 Friday 26<sup>th</sup> February 2021

Alternative provision.

*hours*


# Watch the video

- <https://vimeo.com/436534112>
- Now complete the questions on the next slides
- Date your work for me please and if you did the work on your own with no help write an **I** at the top and if you had help please write **AS** at the top
- Don't forget to write your answers including your working out.

# Writing time

Did you know?

1 Match the activity to the time it takes.




eating a sandwich

seconds



a day at school

minutes



eating a grape

hours

2 Choose a word to complete the sentences.

seconds

minutes

hours

a) The film lasted for 2 \_\_\_\_\_.

b) Break time is 20 \_\_\_\_\_.

c) Jo can do 5 star jumps in 20 \_\_\_\_\_.

**If you count slowly and say 1 elephant, 2 elephant etc you should be able to count in seconds.**

3 Ask a partner to use a timer. Or count

a) How many smiley faces can you draw in 10 seconds?

b) What number can you count to in 20 seconds?

c) How many star jumps can you do in 1 minute?

- 4 The toy train goes round the track twice in 3 minutes.



The train will go round the track more times in 1 hour because hours are longer than minutes.

Kim



Ron


The train will go round the track fewer times in 1 hour because 1 is less than 3

Who do you agree with? \_\_\_\_\_

Talk about your answers.

Can you think of some activities you could do for 1 minute?

Playtime lasts longer than 15 seconds but  
less than 15 hours.






# ANSWER sheets

- Please check your answers using the answer sheets on the next slide.
- If you have made a mistake, can you explain what you did wrong and what you should have done instead?
- There are lots of time games you can play on this website
- <https://mathsframe.co.uk/en/resources/resource/116/telling-the-time>

## Writing time

1 Match the activity to the time it takes.



seconds

minutes

hours

2 Choose a word to complete the sentences.

seconds

minutes

hours

- a) The film lasted for 2 hours.
- b) Break time is 20 minutes.
- c) Jo can do 5 star jumps in 20 seconds.

3 Ask a partner to use a timer.

- a) How many smiley faces can you draw in 10 seconds?

various answers

- b) What number can you count to in 20 seconds?

various answers

- c) How many star jumps can you do in 1 minute?

various answers

- 4 The toy train goes round the track twice in 3 minutes.



Kim

The train will go round the track more times in 1 hour because hours are longer than minutes.



Ron


The train will go round the track fewer times in 1 hour because 1 is less than 3

Who do you agree with? Kim

Talk about your answers.



True



Playtime lasts for about 15 minutes.

Did you get it right?