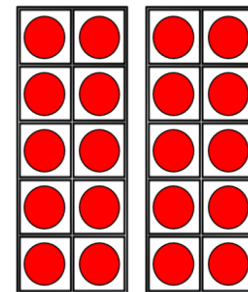


# Week 1

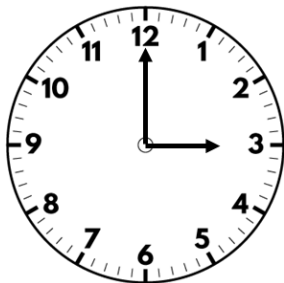
Beginning 22<sup>nd</sup> February 2021

Alternative provision

1) How many dots?



2) What time is shown on the clock?



3) What is the total value of the coins?

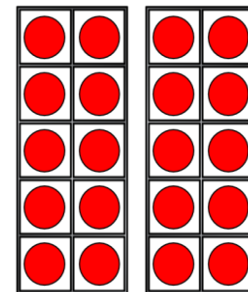


4) What is half of 18?

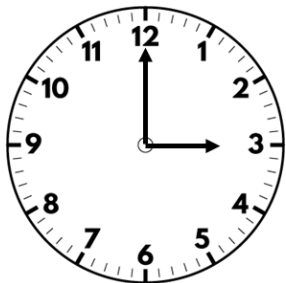
1) How many dots?



12



2) What time is shown on the clock?



3 o'clock


3) What is the total value of the coins?




60p

4) What is half of 18? 9

1) How many cakes?



2) What time is shown on the clock?




3) What is the total value of the coins?




4) What is half of 14?

# Flashback 4


1) How many cakes?



23



2) What time is shown on the clock?



8 o'clock

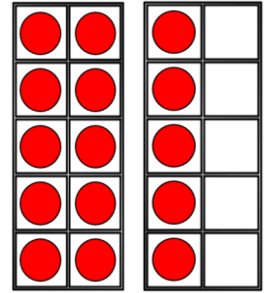
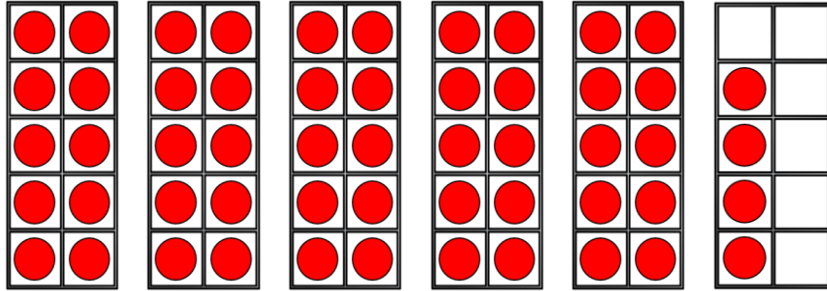
3) What is the total value of the coins?




20p

4) What is half of 14? 7

1) Which number is represented?



2) What time is shown on the clock?

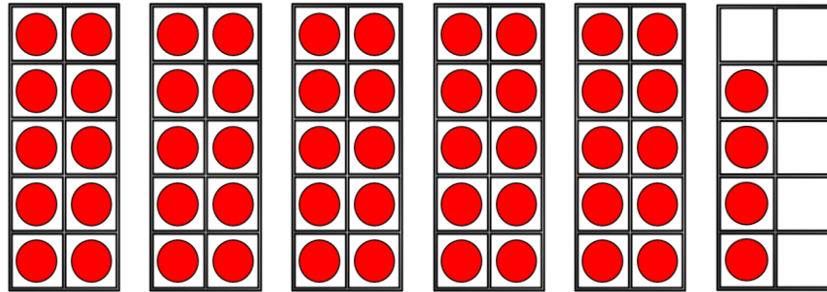


3) What is the total value of the coins?

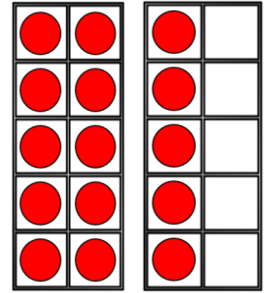


4) What is half of 16?


1) Which number is represented?



54



2) What time is shown on the clock?



11 o'clock


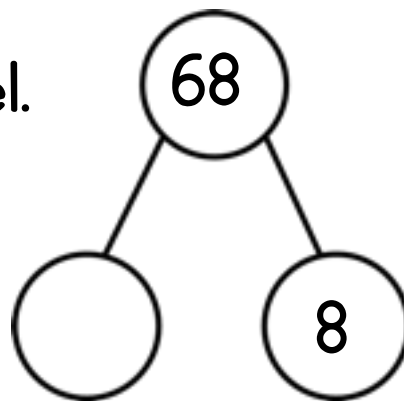
3) What is the total value of the coins?




14p

4) What is half of 16? 8

1) Complete the part-whole model.



2) What time is shown on the clock?




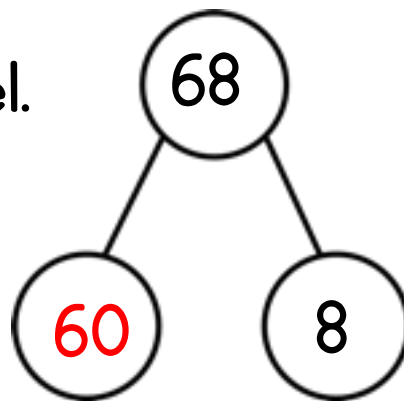
3) What is the total value of the coins?




4) What is half of 40?



1) Complete the part-whole model.



2) What time is shown on the clock?



4 o'clock

3) What is the total value of the coins?

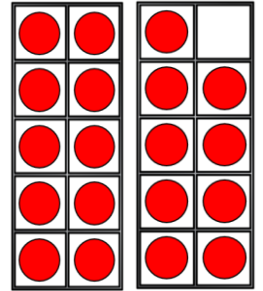
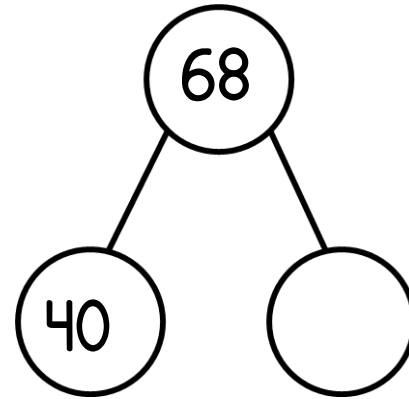


16p


4) What is half of 40?

20

1) Complete the part-whole model.



2) What time is shown on the clock?

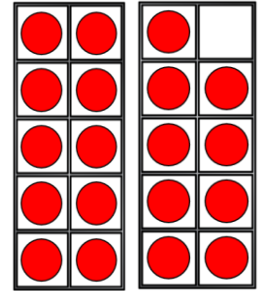
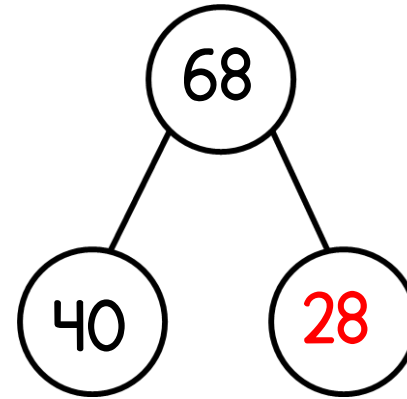


3) What is the total value of the coins?

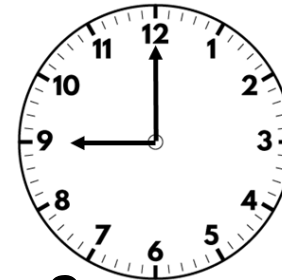


4) What is half of 60?

1) Complete the part-whole model.



2) What time is shown on the clock?



9 o'clock

3) What is the total value of the coins?



20p

4) What is half of 60? 30