

# Varied Fluency

## Step 5: Horizontal and Vertical

### National Curriculum Objectives:

Mathematics Year 3: (3G2) [Identify horizontal and vertical lines](#)

### Differentiation:

**Developing** Questions to support identifying horizontal and vertical lines. Using regular quadrilaterals and rectangles (shapes and objects).

**Expected** Questions to support identifying horizontal and vertical lines and symmetry. Using regular shapes, symbols and capital letters.


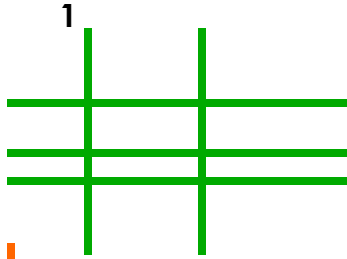
**Greater Depth** Questions to support identifying horizontal and vertical lines and symmetry. Using compound shapes, symbols and capital letters.

More [Year 3 Properties of Shapes](#) resources.

Did you like this resource? Don't forget to [review](#) it on our website.

# Horizontal and Vertical

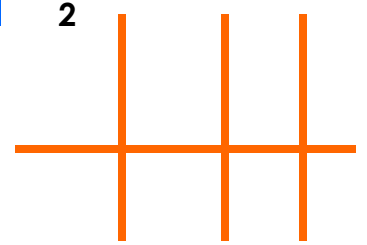
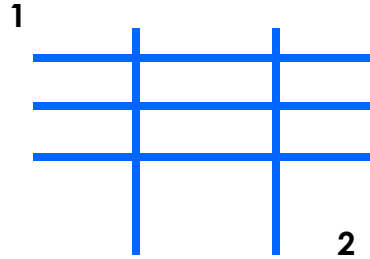
1a. Which of the images below has the most vertical lines?



VF

# Horizontal and Vertical

1b. Which of the images below has the most horizontal lines?



VF

2a. Fill in the table below.

Flag	Horizontal or vertical lines?



VF

2b. Fill in the table below.

Flag	Horizontal or vertical lines?



VF

3a. Which of these flags has a vertical line of symmetry?



VF

3b. Which of these flags has a horizontal line of symmetry?

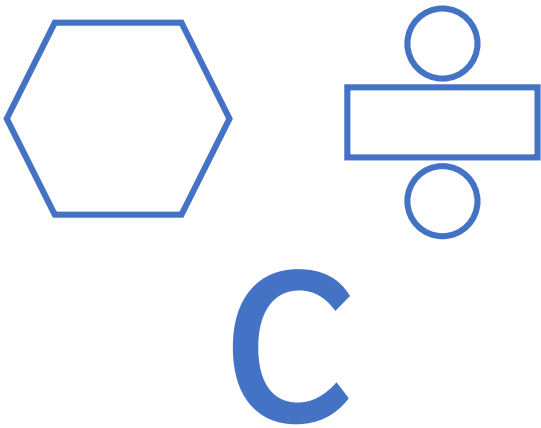


VF

# Horizontal and Vertical

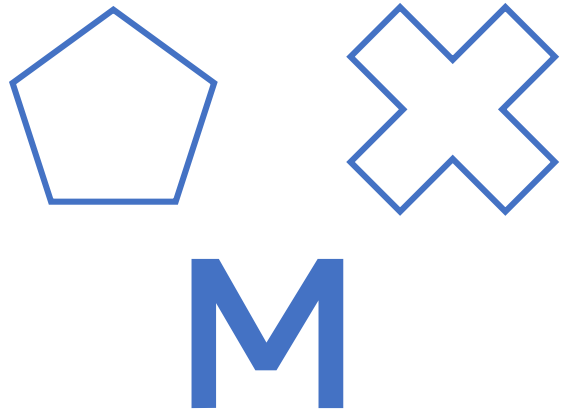
# Horizontal and Vertical

4a. Draw the horizontal lines of symmetry in these objects.







VF

4b. Draw the vertical lines of symmetry in these objects.



VF





5a. Fill in the table below.

Shape	Type of lines – horizontal, vertical or both?
A 	
B 	
C 	
D 	



VF

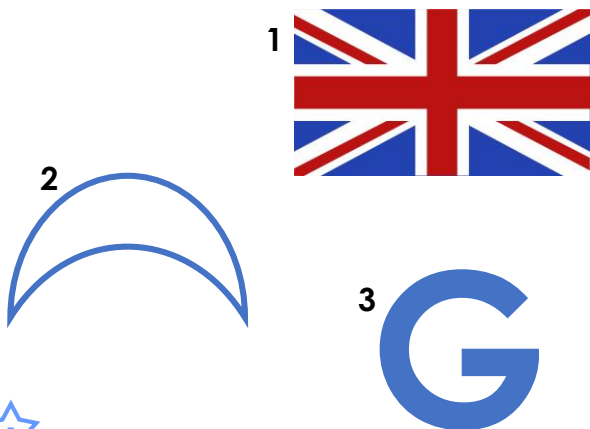
5b. Fill in the table below.

Shape	Type of lines – horizontal, vertical or both?
A 	
B 	
C 	
D 	



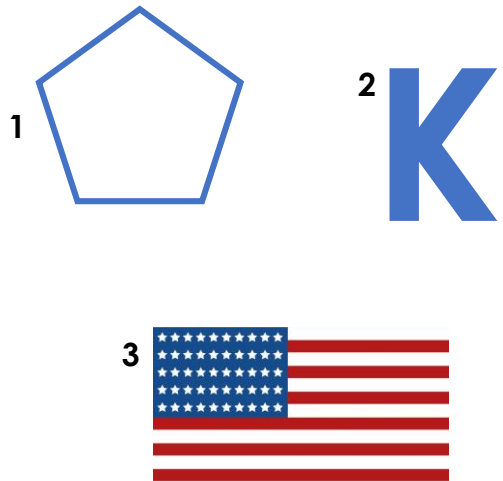
VF

6a. Which of the images below has a vertical line of symmetry?



VF

6b. Which of the images below has a horizontal line of symmetry?

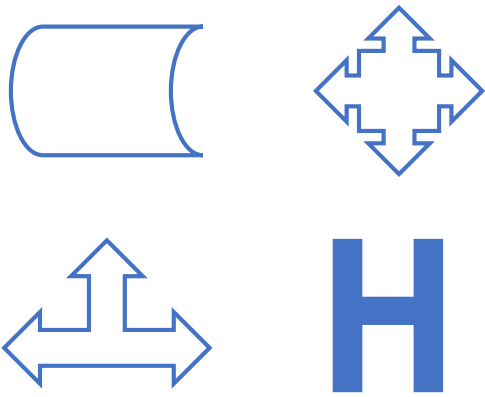


VF

# Horizontal and Vertical

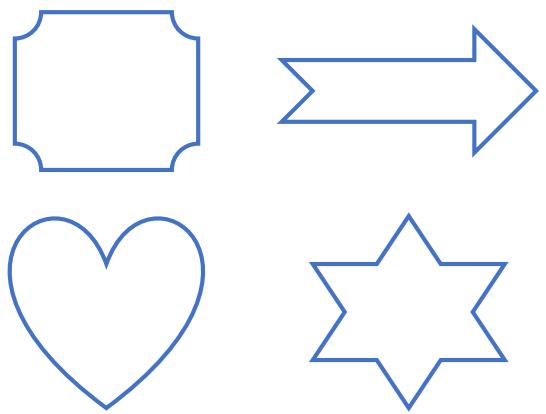
# Horizontal and Vertical

7a. Draw the horizontal and vertical lines of symmetry in these objects



VF

7b. Draw the horizontal and vertical lines of symmetry in these objects.



VF

8a. Fill in the table below.

Shape	Type of lines – horizontal, vertical, both or neither?
A	
B	
C	
D	



VF

8b. Fill in the table below.

Shape	Type of lines – horizontal, vertical, both or neither?
A	
B	
C	
D	



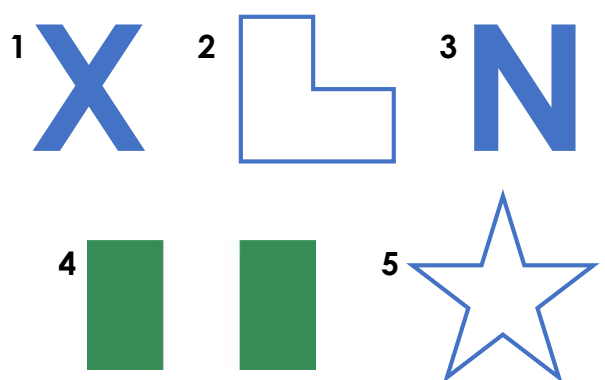
VF

9a. Which of the images below has a vertical and a horizontal line of symmetry?



VF

9b. Which of the images below has a vertical and a horizontal line of symmetry?



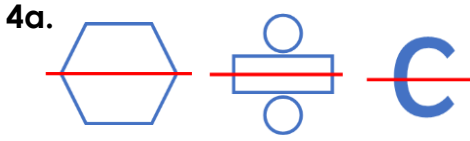
VF

# Varied Fluency Horizontal and Vertical

## Developing

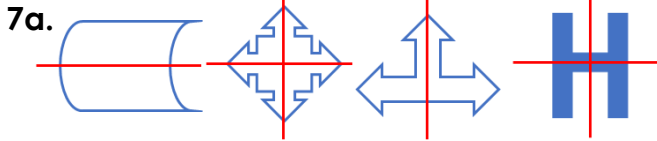
- 1a. 2  
2a. Vertical; Horizontal  
3a. 1

## Expected



- 5a. A – both, B – vertical, C – horizontal,  
D – both  
6a. 2

## Greater Depth



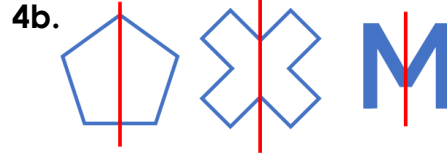
- 8a. A – both, B – vertical, C – horizontal,  
D – neither  
9a. 4

# Varied Fluency Horizontal and Vertical

## Developing

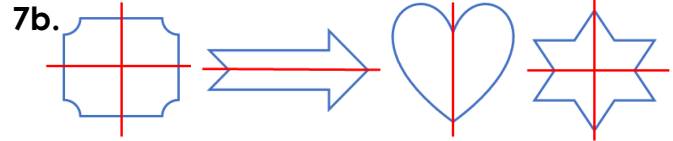
- 1b. 1  
2b. Horizontal; Vertical  
3b. 2

## Expected



- 5b. A – horizontal, B – horizontal,  
C – vertical, D – both  
6b. 2

## Greater Depth



- 8b. A – both, B – neither, C – both,  
D – vertical  
9b. 1 and 4