

Jack and the Beanstalk


Crack the Code Subtraction to 10

Can you crack the code? Use the key at the top of the page to find the number for each picture and solve the subtraction number sentences.

Key



1



2




3



4



5



6




7



8



9



-



=



-



=



-



=



-



=



-



=

Jack and the Beanstalk Crack the Code


Subtraction to 10 Answers

Can you crack the code? Use the key at the top of the page to find the number for each picture and solve the subtraction number sentences.

Key



1



2



3



4



5



6




7



8




9



6

-



2

=

4



4

-



1

=

3



7

-



5

=

2



9

-



4

=

5



8

-



7

=

1

Jack and the Beanstalk Crack the Code


Mixed Addition and Subtraction to 10

Can you crack the code? Use the key at the top of the page to find the number for each picture and solve the number sentences.

Key



1



2



3



4



5



6



7



8



9



+



=



-



=



+



=




-



=



-



=


Jack and the Beanstalk Crack the Code Mixed Addition and Subtraction to 10 Answers

Can you crack the code? Use the key at the top of the page to find the number for each picture and solve the number sentences.

Key



1



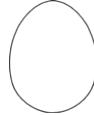
2



3



4



5



6



7



8




9



8

+



2

=

10



6

-



3

=

3



4

+



4

=

8



9

-



5

=

4



7

-



2

=

5