

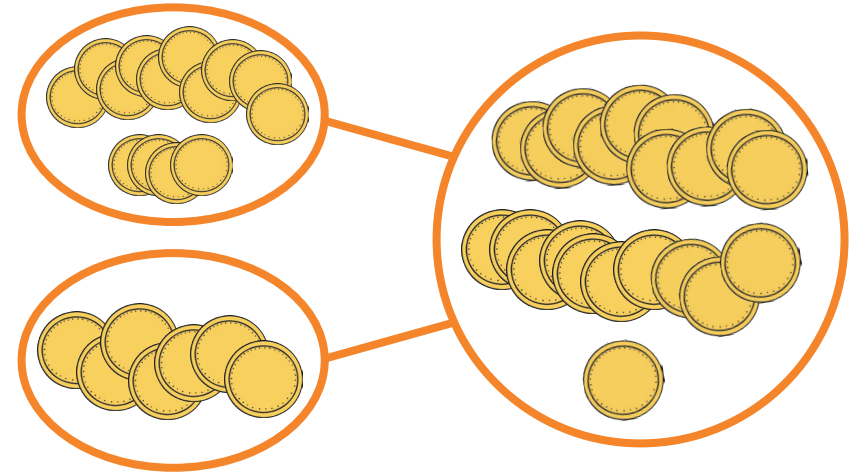
Year 2

Pirate Themed Addition and Subtraction Maths Challenge Cards



Pirate Themed Addition and Subtraction Maths Challenge Cards

1. How many coins are there altogether?




Can you write a calculation about this picture?

twinkl.com

Pirate Themed Addition and Subtraction Maths Challenge Cards

2. How many coins are needed to complete this diagram?




Can you write a calculation about this picture?

twinkl.com

Pirate Themed Addition and Subtraction Maths Challenge Cards

3. Sneaky Selma is watching out for ships from the crow's nest using her telescope. She has already spotted 18 ships. This is what she can see now.

How many ships has she seen in total?



Tell a friend how you found the answer.

twinkl.com

Pirate Themed Addition and Subtraction Maths Challenge Cards

4. Salty Salina has 43 purple jewels and 5 blue jewels.
How many does she have altogether?



Tell a friend how you found the answer.

twinkl.com

Pirate Themed Addition and Subtraction Maths Challenge Cards

5. There are 34 pirates on board Captain Cleo's ship.
20 are girls.

How many are boys?



twinkl.com

Pirate Themed Addition and Subtraction Maths Challenge Cards

6. The Crusty Clam sails 52 miles on Thursday and
40 miles on Friday.

How far does it sail in total?




twinkl.com

Pirate Themed Addition and Subtraction Maths Challenge Cards

7. It is 69 miles from Costa Rosa Beach to Slippery
Eel Cove. The Crusty Clam leaves Costa Rosa and
sails 30 miles.

How much further is it to Slippery Eel Cove?



twinkl.com

Pirate Themed Addition and Subtraction Maths Challenge Cards

8. Pirate Paul has collected some bags of coins.

How many coins does he have altogether?



How did you find the answer?

Was there a quicker way to find the answer?

twinkl.com

Pirate Themed Addition and Subtraction Maths Challenge Cards

9. Toothless Tom's parrot can say 48 words.
Doubleloon Dora's parrot can say twenty words more.

How many words can Doubleloon Dora's parrot say?
Write your answer in numerals and in words!




twinkl.com

Pirate Themed Addition and Subtraction Maths Challenge Cards

10. Toothless Tom is checking the cannonball stock on board The Crusty Clam. He counts 34 on the main deck and 23 on the lower deck.

How many cannonballs does he find in total?




twinkl.com

Pirate Themed Addition and Subtraction Maths Challenge Cards

11. In a battle against rival pirates, the crew of the Crusty Clam use 15 cannonballs. They started the battle with 68.

How many cannonballs do they have left?



twinkl.com