






Mass Problem



- The pumpkin weighs 100 times the amount of the cherries.
- If the apple was cut into quarters each quarter would weigh double the mass of the cherries.
- The cherries weigh $\frac{1}{10}$ the mass of the aubergine.
- The aubergine weighs $\frac{1}{5}$ of a kilo.
- What do each of the items weigh in grams?